

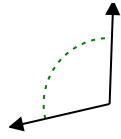


Determina si el ángulo mostrado es agudo, obtuso, recto o llano.

Ej)



1)



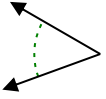
2)



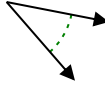
Respuestas

Ej. **derecho**

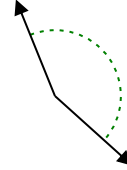
3)



4)



5)



1. _____

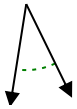
2. _____

3. _____

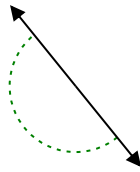
4. _____

5. _____

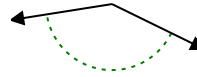
6)



7)



8)

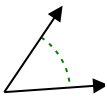


6. _____

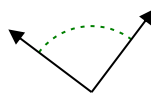
7. _____

8. _____

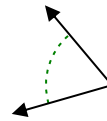
9)



10)



11)

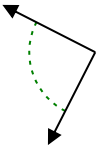


9. _____

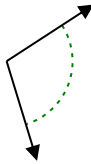
10. _____

11. _____

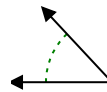
12)



13)



14)



12. _____

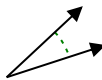
13. _____

14. _____

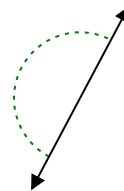
15)



16)



17)

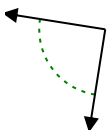


15. _____

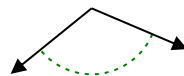
16. _____

17. _____

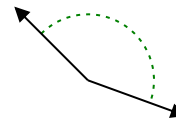
18)



19)



20)



18. _____

19. _____

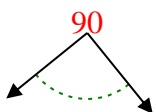
20. _____

1-10	95	90	85	80	75	70	65	60	55	50
11-20	45	40	35	30	25	20	15	10	5	0

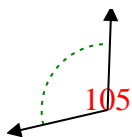


Determina si el ángulo mostrado es agudo, obtuso, recto o llano.

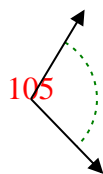
Ej)



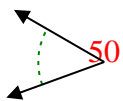
1)



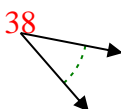
2)



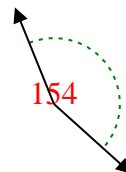
3)



4)



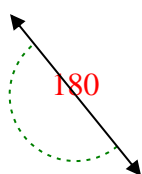
5)



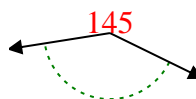
6)



7)



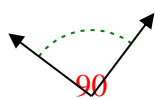
8)



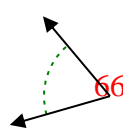
9)



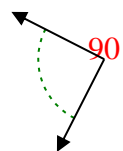
10)



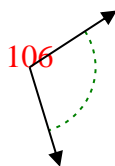
11)



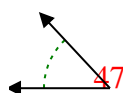
12)



13)



14)



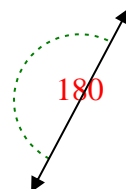
15)



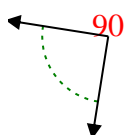
16)



17)



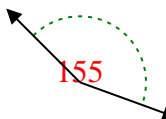
18)



19)



20)



Respuestas

Ej. derecho

1. obtuso

2. obtuso

3. agudo

4. agudo

5. obtuso

6. agudo

7. recto

8. obtuso

9. agudo

10. derecho

11. agudo

12. derecho

13. obtuso

14. agudo

15. agudo

16. agudo

17. recto

18. derecho

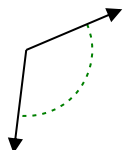
19. obtuso

20. obtuso

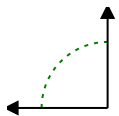


Determina si el ángulo mostrado es agudo, obtuso, recto o llano.

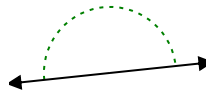
Ej)



1)



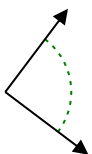
2)



Respuestas

Ej. obtuso

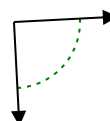
3)



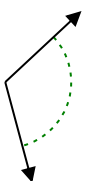
4)



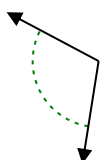
5)



6)



7)



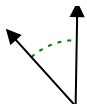
8)



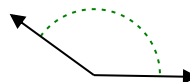
9)



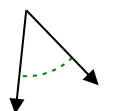
10)



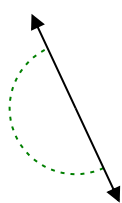
11)



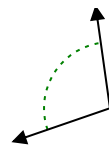
12)



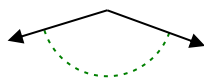
13)



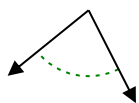
14)



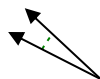
15)



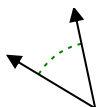
16)



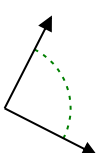
17)



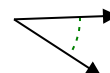
18)



19)



20)

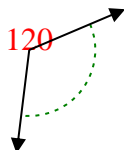


- 1. _____
- 2. _____
- 3. _____
- 4. _____
- 5. _____
- 6. _____
- 7. _____
- 8. _____
- 9. _____
- 10. _____
- 11. _____
- 12. _____
- 13. _____
- 14. _____
- 15. _____
- 16. _____
- 17. _____
- 18. _____
- 19. _____
- 20. _____

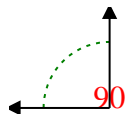


Determina si el ángulo mostrado es agudo, obtuso, recto o llano.

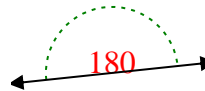
Ej)



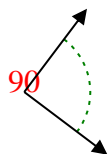
1)



2)



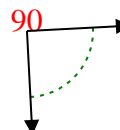
3)



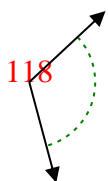
4)



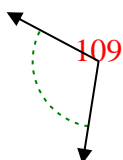
5)



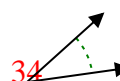
6)



7)



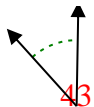
8)



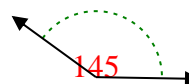
9)



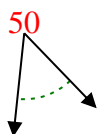
10)



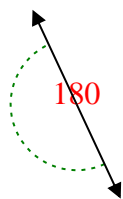
11)



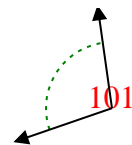
12)



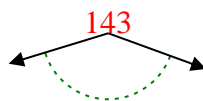
13)



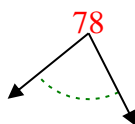
14)



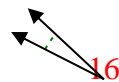
15)



16)



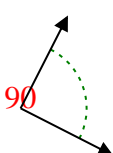
17)



18)



19)



20)



Respuestas

Ej. obtuso

1. derecho

2. recto

3. derecho

4. agudo

5. derecho

6. obtuso

7. obtuso

8. agudo

9. obtuso

10. agudo

11. obtuso

12. agudo

13. recto

14. obtuso

15. obtuso

16. agudo

17. agudo

18. agudo

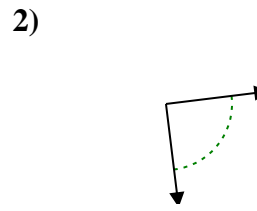
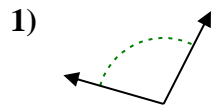
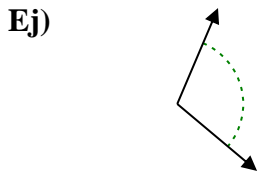
19. derecho

20. agudo



Determina si el ángulo mostrado es agudo, obtuso, recto o llano.

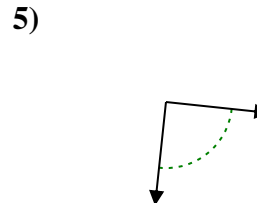
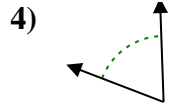
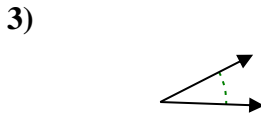
Respuestas



Ej. obtuso

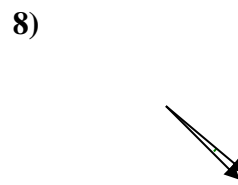
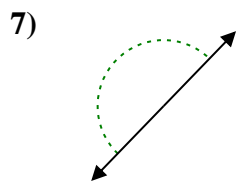
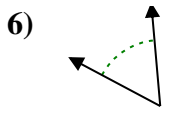
1. _____

2. _____



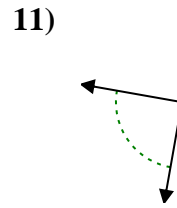
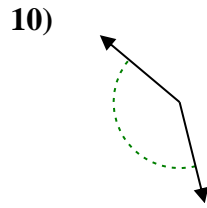
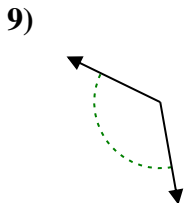
3. _____

4. _____



5. _____

6. _____

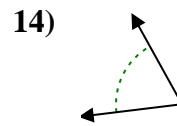
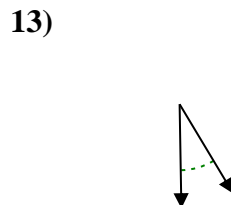
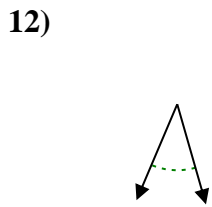


7. _____

8. _____

9. _____

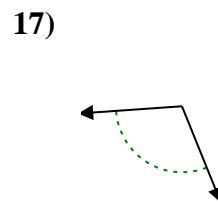
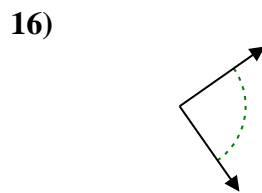
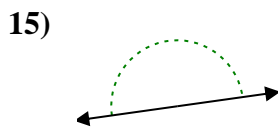
10. _____



11. _____

12. _____

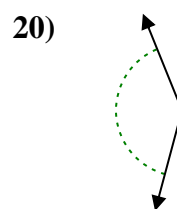
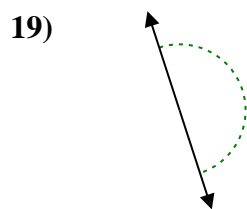
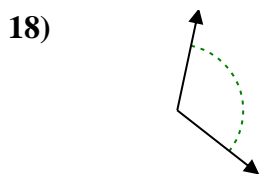
13. _____



14. _____

15. _____

16. _____



17. _____

18. _____

19. _____

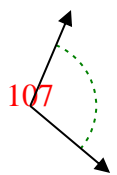
20. _____

1-10	95	90	85	80	75	70	65	60	55	50
11-20	45	40	35	30	25	20	15	10	5	0

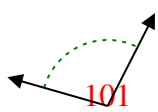


Determina si el ángulo mostrado es agudo, obtuso, recto o llano.

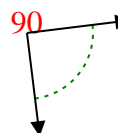
Ej)



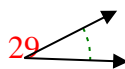
1)



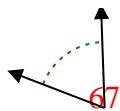
2)



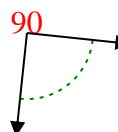
3)



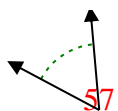
4)



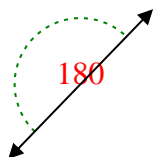
5)



6)



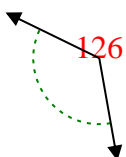
7)



8)



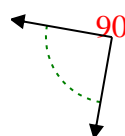
9)



10)



11)



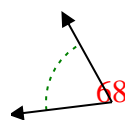
12)



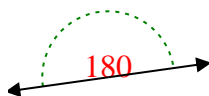
13)



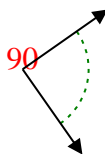
14)



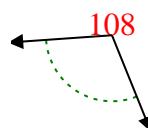
15)



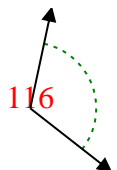
16)



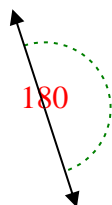
17)



18)



19)



20)



Respuestas

Ej. obtuso

1. obtuso

2. derecho

3. agudo

4. agudo

5. derecho

6. agudo

7. recto

8. agudo

9. obtuso

10. obtuso

11. derecho

12. agudo

13. agudo

14. agudo

15. recto

16. derecho

17. obtuso

18. obtuso

19. recto

20. obtuso



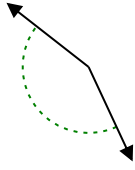
Determina si el ángulo mostrado es agudo, obtuso, recto o llano.

Respuestas

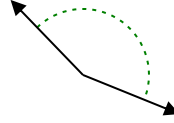
Ej)



1)

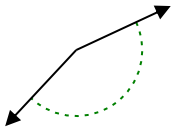


2)

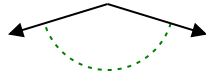


Ej. **recto**

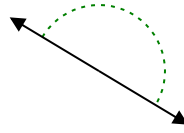
3)



4)



5)



1. _____

2. _____

6)



7)



8)



3. _____

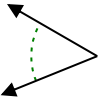
4. _____

5. _____

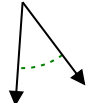
6. _____

7. _____

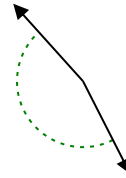
9)



10)



11)



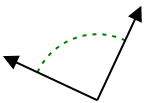
8. _____

9. _____

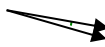
10. _____

11. _____

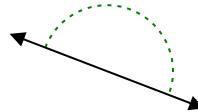
12)



13)



14)

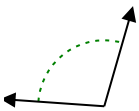


12. _____

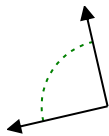
13. _____

14. _____

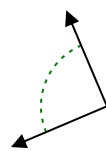
15)



16)



17)



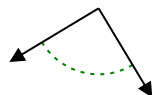
15. _____

16. _____

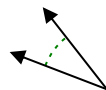
18)



19)



20)



17. _____

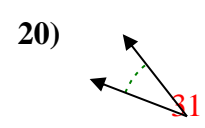
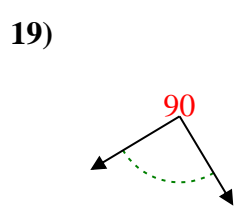
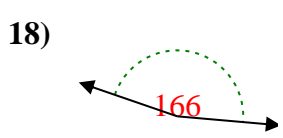
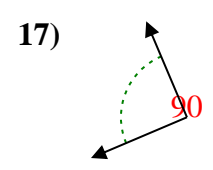
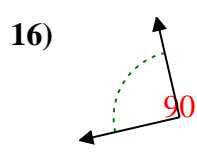
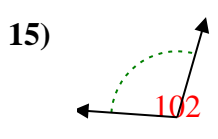
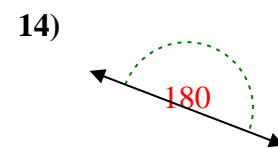
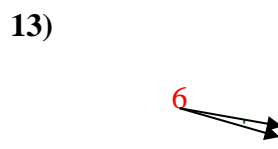
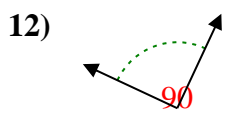
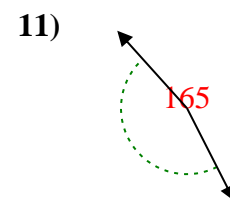
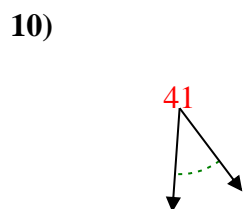
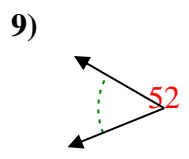
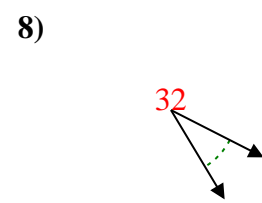

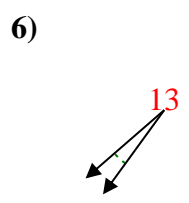
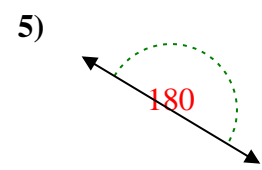
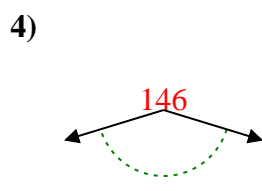
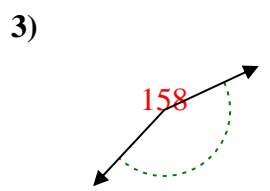
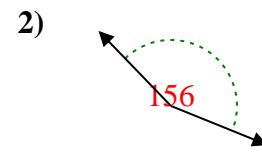
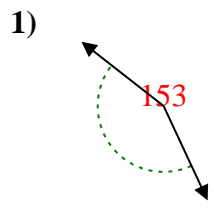
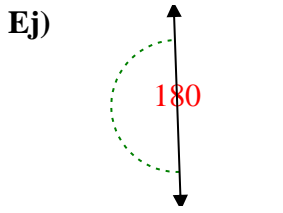
18. _____

19. _____

20. _____



Determina si el ángulo mostrado es agudo, obtuso, recto o llano.



Respuestas

Ej. recto

1. obtuso

2. obtuso

3. obtuso

4. obtuso

5. recto

6. agudo

7. agudo

8. agudo

9. agudo

10. agudo

11. obtuso

12. derecho

13. agudo

14. recto

15. obtuso

16. derecho

17. derecho

18. obtuso

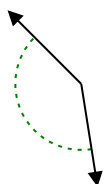
19. derecho

20. agudo

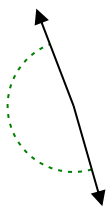


Determina si el ángulo mostrado es agudo, obtuso, recto o llano.

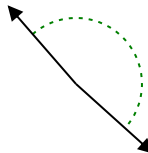
Ej)



1)



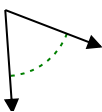
2)



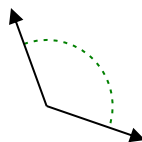
Respuestas

Ej. obtuso

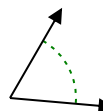
3)



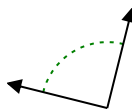
4)



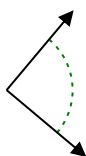
5)



6)



7)



8)



9)



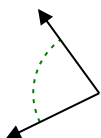
10)



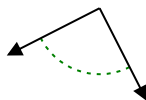
11)



12)



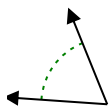
13)



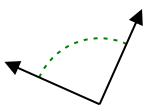
14)



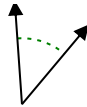
15)



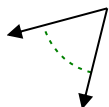
16)



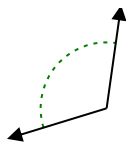
17)



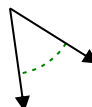
18)



19)



20)



- 1. _____
- 2. _____
- 3. _____
- 4. _____
- 5. _____
- 6. _____
- 7. _____
- 8. _____
- 9. _____
- 10. _____
- 11. _____
- 12. _____
- 13. _____
- 14. _____
- 15. _____
- 16. _____
- 17. _____
- 18. _____
- 19. _____
- 20. _____

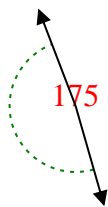


Determina si el ángulo mostrado es agudo, obtuso, recto o llano.

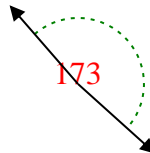
Ej)



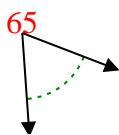
1)



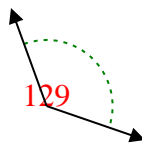
2)



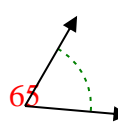
3)



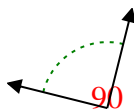
4)



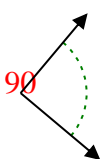
5)



6)



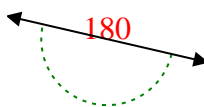
7)



8)



9)



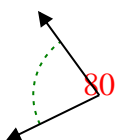
10)



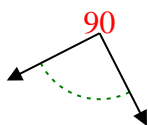
11)



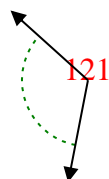
12)



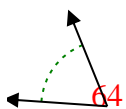
13)



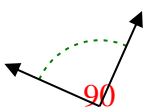
14)



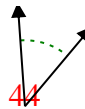
15)



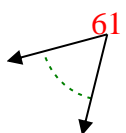
16)



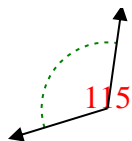
17)



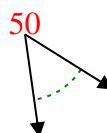
18)



19)



20)



Respuestas

Ej. **obtuso**

1. **obtuso**

2. **obtuso**

3. **agudo**

4. **obtuso**

5. **agudo**

6. **derecho**

7. **derecho**

8. **obtuso**

9. **recto**

10. **agudo**

11. **recto**

12. **agudo**

13. **derecho**

14. **obtuso**

15. **agudo**

16. **derecho**

17. **agudo**

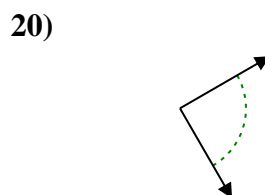
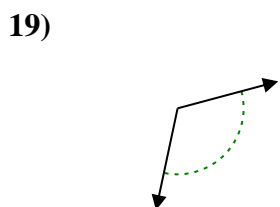
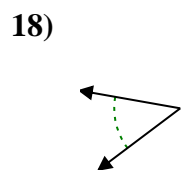
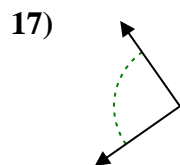
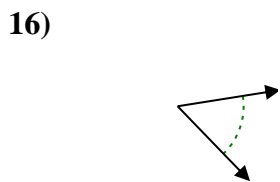
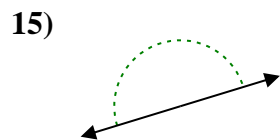
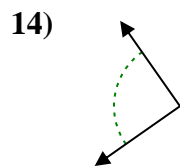
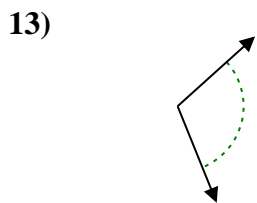
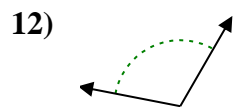
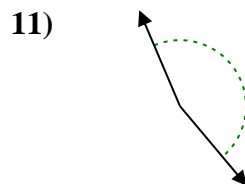
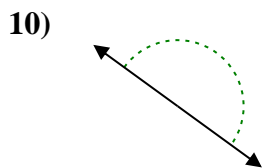
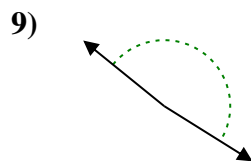
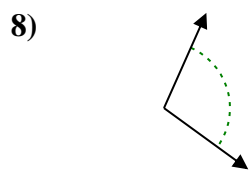
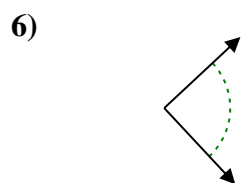
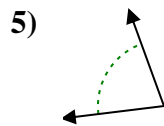
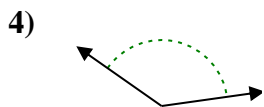
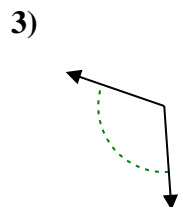
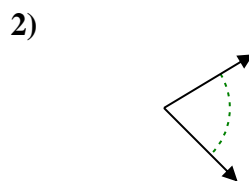
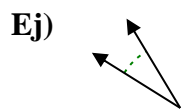
18. **agudo**

19. **obtuso**

20. **agudo**



Determina si el ángulo mostrado es agudo, obtuso, recto o llano.



Respuestas

Ej. agudo

1. _____

2. _____

3. _____

4. _____

5. _____

6. _____

7. _____

8. _____

9. _____

10. _____

11. _____

12. _____

13. _____

14. _____

15. _____

16. _____

17. _____

18. _____

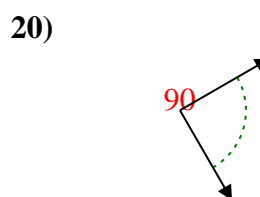
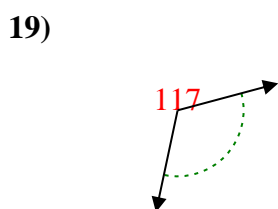
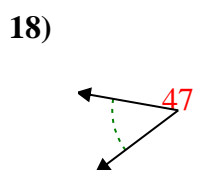
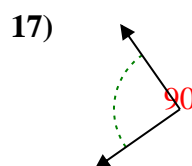
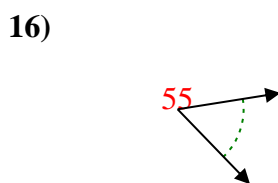
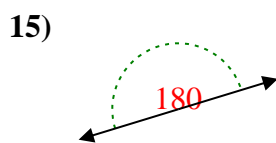
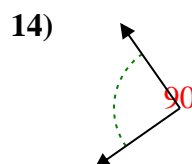
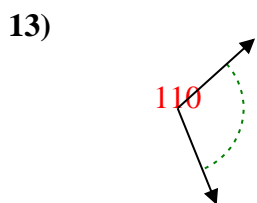
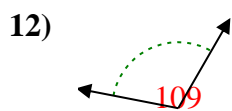
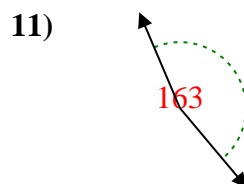
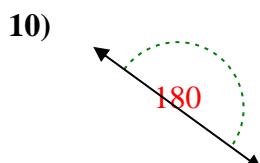
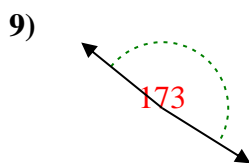
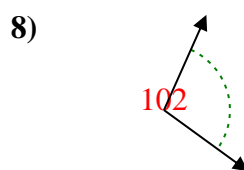
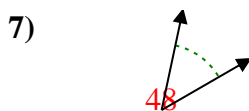
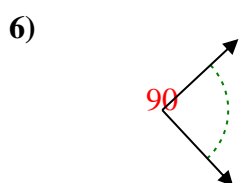
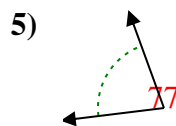
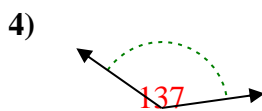
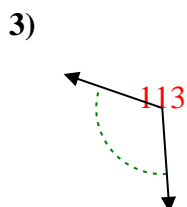
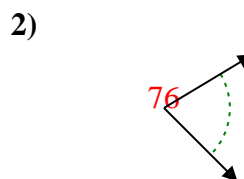
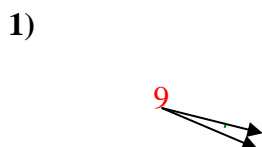
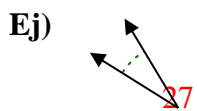
19. _____

20. _____

1-10	95	90	85	80	75	70	65	60	55	50
11-20	45	40	35	30	25	20	15	10	5	0



Determina si el ángulo mostrado es agudo, obtuso, recto o llano.



Respuestas

Ej. agudo

1. agudo

2. agudo

3. obtuso

4. obtuso

5. agudo

6. derecho

7. agudo

8. obtuso

9. obtuso

10. recto

11. obtuso

12. obtuso

13. obtuso

14. derecho

15. recto

16. agudo

17. derecho

18. agudo

19. obtuso

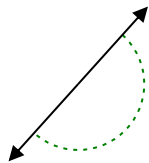
20. derecho



Determina si el ángulo mostrado es agudo, obtuso, recto o llano.

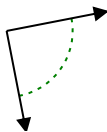
Respuestas

Ej)

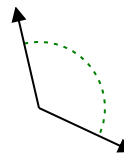


Ej. **recto**

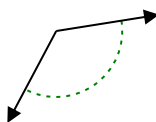
1)



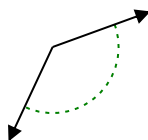
2)



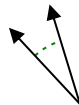
3)



4)



5)



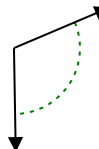
6)



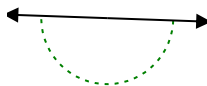
7)



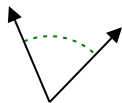
8)



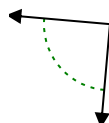
9)



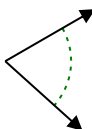
10)



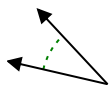
11)



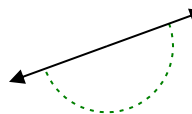
12)



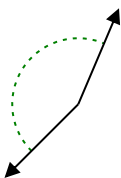
13)



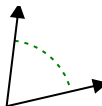
14)



15)



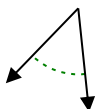
16)



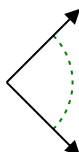
17)



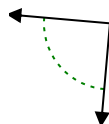
18)



19)



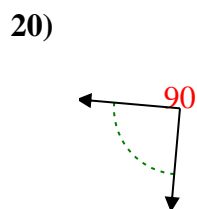
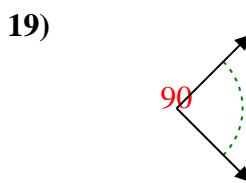
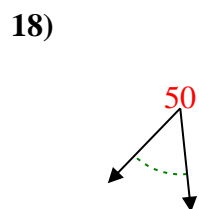
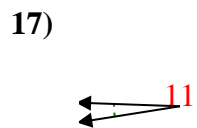
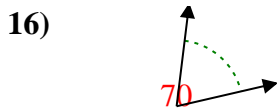
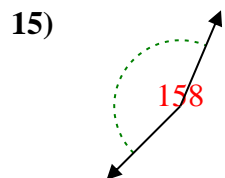
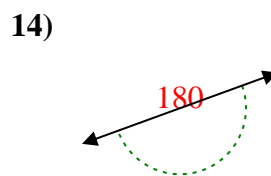
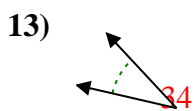
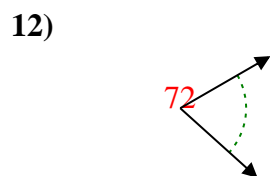
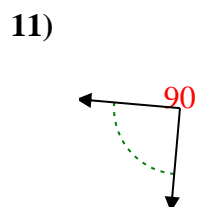
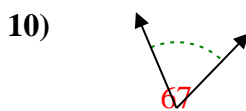
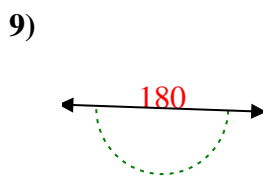
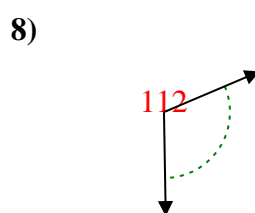
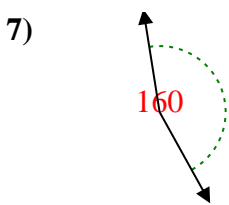
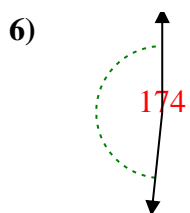
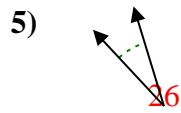
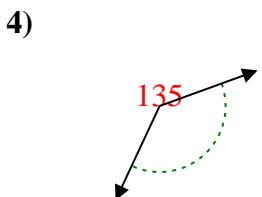
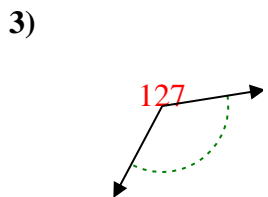
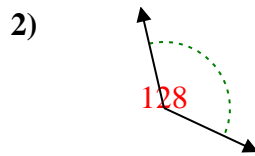
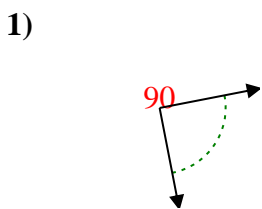
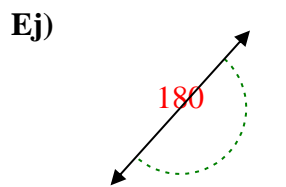
20)



- 1. _____
- 2. _____
- 3. _____
- 4. _____
- 5. _____
- 6. _____
- 7. _____
- 8. _____
- 9. _____
- 10. _____
- 11. _____
- 12. _____
- 13. _____
- 14. _____
- 15. _____
- 16. _____
- 17. _____
- 18. _____
- 19. _____
- 20. _____



Determina si el ángulo mostrado es agudo, obtuso, recto o llano.



Respuestas

Ej. recto

1. derecho

2. obtuso

3. obtuso

4. obtuso

5. agudo

6. obtuso

7. obtuso

8. obtuso

9. recto

10. agudo

11. derecho

12. agudo

13. agudo

14. recto

15. obtuso

16. agudo

17. agudo

18. agudo

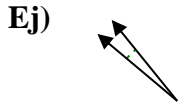
19. derecho

20. derecho

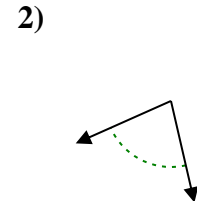
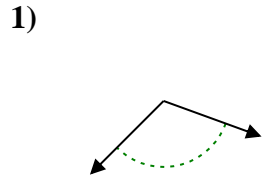


Determina si el ángulo mostrado es agudo, obtuso, recto o llano.

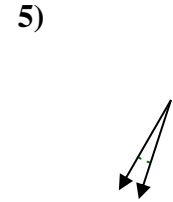
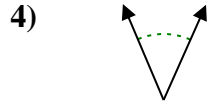
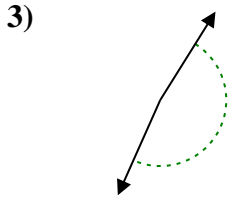
Respuestas



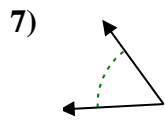
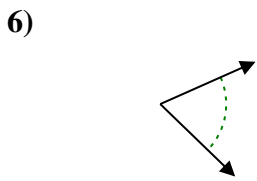
Ej. agudo



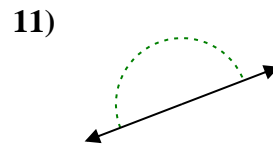
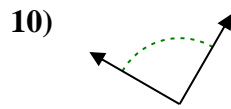
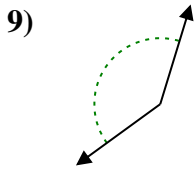
1. _____



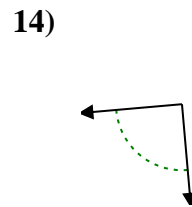
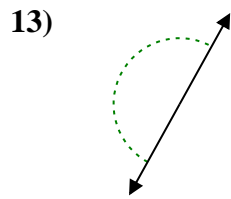
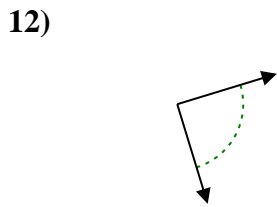
2. _____



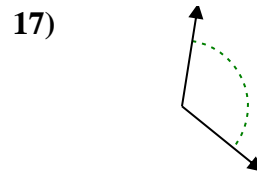
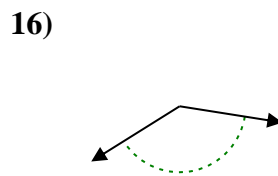
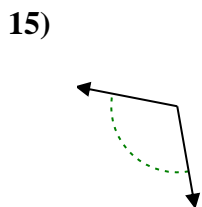
3. _____



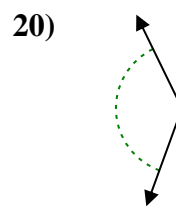
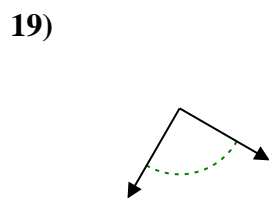
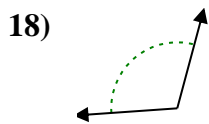
4. _____



5. _____



6. _____



7. _____

8. _____

9. _____

10. _____

11. _____

12. _____

13. _____

14. _____

15. _____

16. _____

17. _____

18. _____

19. _____

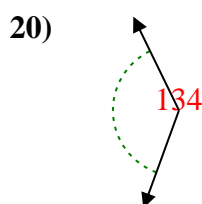
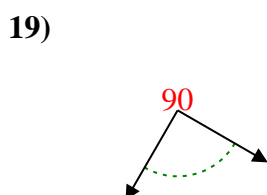
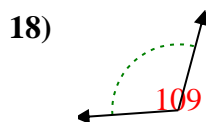
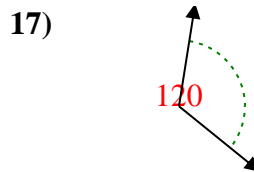
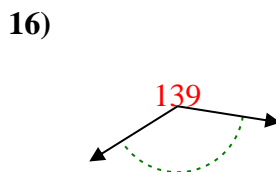
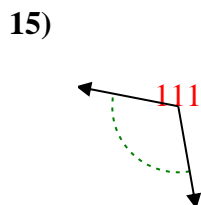
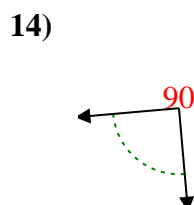
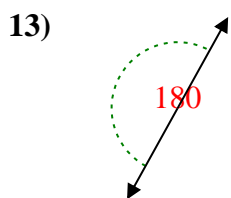
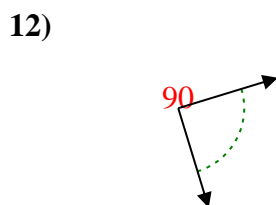
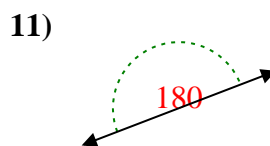
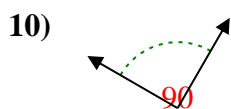
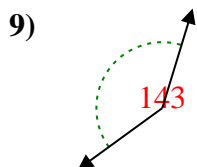
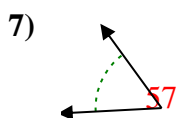
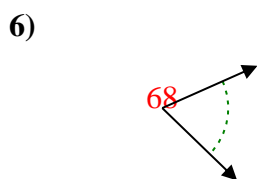
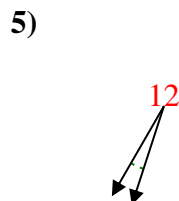
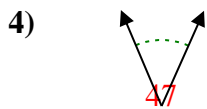
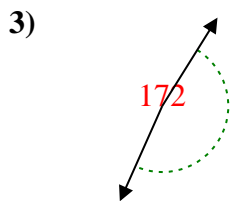
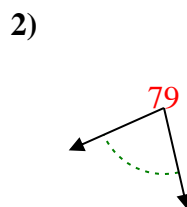
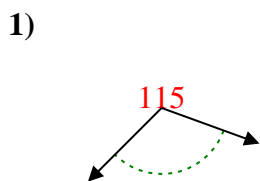
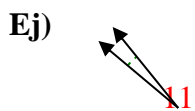
20. _____

20. _____

1-10	95	90	85	80	75	70	65	60	55	50
11-20	45	40	35	30	25	20	15	10	5	0



Determina si el ángulo mostrado es agudo, obtuso, recto o llano.



Respuestas

Ej. agudo

1. obtuso

2. agudo

3. obtuso

4. agudo

5. agudo

6. agudo

7. agudo

8. agudo

9. obtuso

10. derecho

11. recto

12. derecho

13. recto

14. derecho

15. obtuso

16. obtuso

17. obtuso

18. obtuso

19. derecho

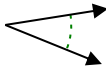
20. obtuso



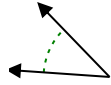
Determina si el ángulo mostrado es agudo, obtuso, recto o llano.

Respuestas

Ej)



1)



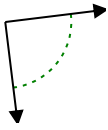
2)



Ej. **agudo**

1. _____

3)



4)



5)



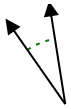
2. _____

3. _____

4. _____

5. _____

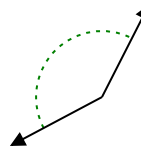
6)



7)



8)

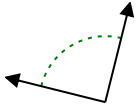


6. _____

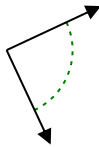
7. _____

8. _____

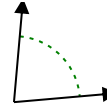
9)



10)



11)

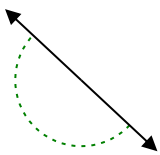


9. _____

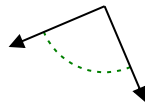
10. _____

11. _____

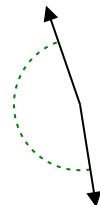
12)



13)



14)

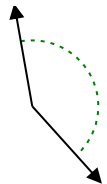


12. _____

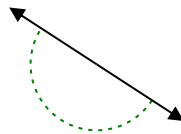
13. _____

14. _____

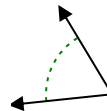
15)



16)



17)

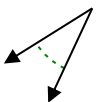


15. _____

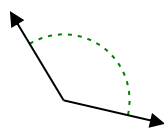
16. _____

17. _____

18)



19)



20)



18. _____

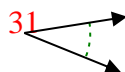
19. _____

20. _____

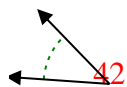


Determina si el ángulo mostrado es agudo, obtuso, recto o llano.

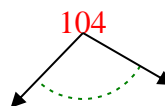
Ej)



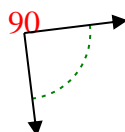
1)



2)



3)



4)



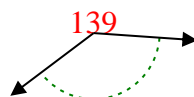
5)



6)



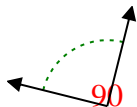
7)



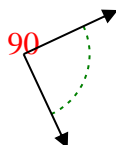
8)



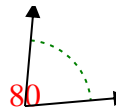
9)



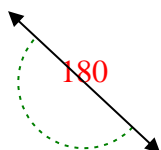
10)



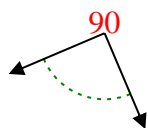
11)



12)



13)



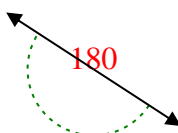
14)



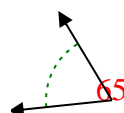
15)



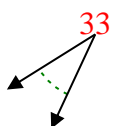
16)



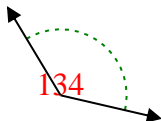
17)



18)



19)



20)



Respuestas

Ej. **agudo**

1. **agudo**

2. **obtuso**

3. **derecho**

4. **agudo**

5. **obtuso**

6. **agudo**

7. **obtuso**

8. **obtuso**

9. **derecho**

10. **derecho**

11. **agudo**

12. **recto**

13. **derecho**

14. **obtuso**

15. **obtuso**

16. **recto**

17. **agudo**

18. **agudo**

19. **obtuso**

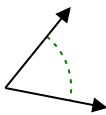
20. **obtuso**



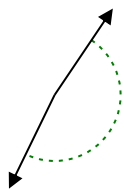
Determina si el ángulo mostrado es agudo, obtuso, recto o llano.

Respuestas

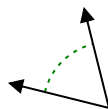
Ej)



1)

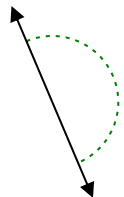


2)



Ej. **agudo**

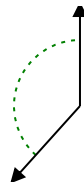
3)



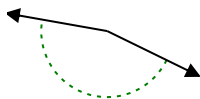
4)



5)



6)



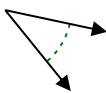
7)



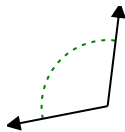
8)



9)



10)



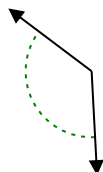
11)



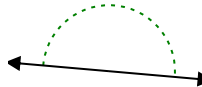
12)



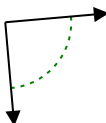
13)



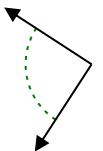
14)



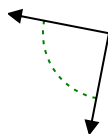
15)



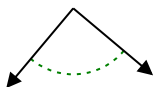
16)



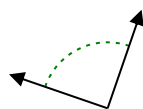
17)



18)



19)



20)

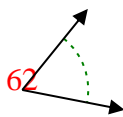


- 1. _____
- 2. _____
- 3. _____
- 4. _____
- 5. _____
- 6. _____
- 7. _____
- 8. _____
- 9. _____
- 10. _____
- 11. _____
- 12. _____
- 13. _____
- 14. _____
- 15. _____
- 16. _____
- 17. _____
- 18. _____
- 19. _____
- 20. _____

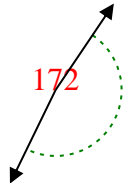


Determina si el ángulo mostrado es agudo, obtuso, recto o llano.

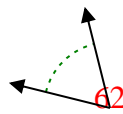
Ej)



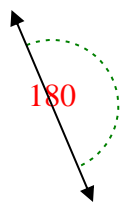
1)



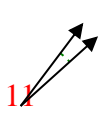
2)



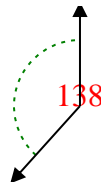
3)



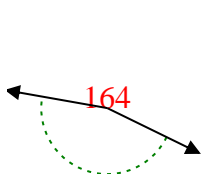
4)



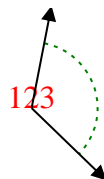
5)



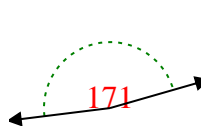
6)



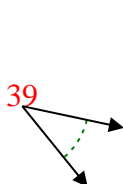
7)



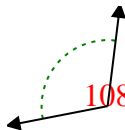
8)



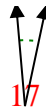
9)



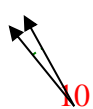
10)



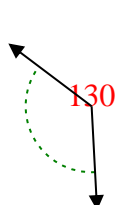
11)



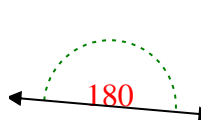
12)



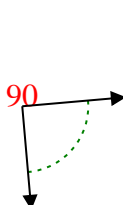
13)



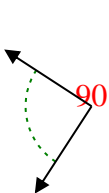
14)



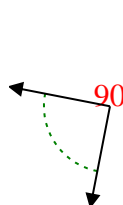
15)



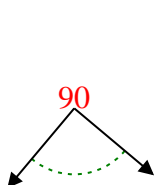
16)



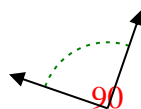
17)



18)



19)



20)



Respuestas

Ej. agudo

1. obtuso

2. agudo

3. recto

4. agudo

5. obtuso

6. obtuso

7. obtuso

8. obtuso

9. agudo

10. obtuso

11. agudo

12. agudo

13. obtuso

14. recto

15. derecho

16. derecho

17. derecho

18. derecho

19. derecho

20. agudo