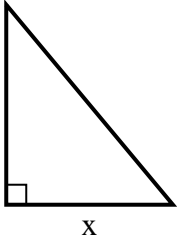


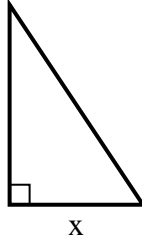


**Encuentra el valor de X.**

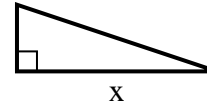
1) area =  $15 u^2$



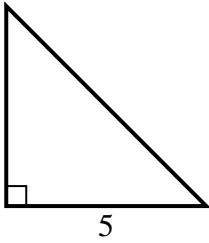
2) area =  $3 u^2$



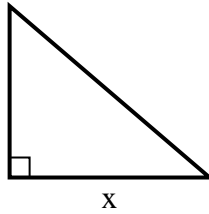
3) area =  $6 u^2$



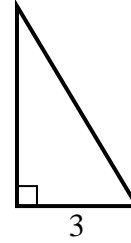
4) area =  $12.5 u^2$



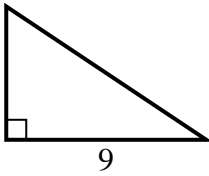
5) area =  $21 u^2$



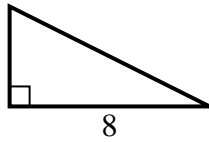
6) area =  $7.5 u^2$



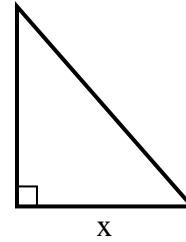
7) area =  $27 u^2$



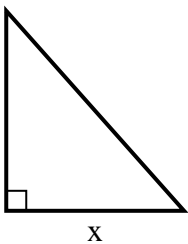
8) area =  $16 u^2$



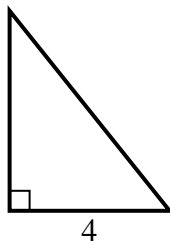
9) area =  $28 u^2$



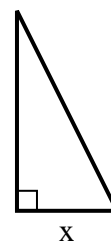
10) area =  $36 u^2$



11) area =  $10 u^2$



12) area =  $4 u^2$



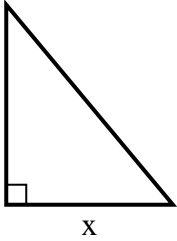
**Respuestas**

1. \_\_\_\_\_
2. \_\_\_\_\_
3. \_\_\_\_\_
4. \_\_\_\_\_
5. \_\_\_\_\_
6. \_\_\_\_\_
7. \_\_\_\_\_
8. \_\_\_\_\_
9. \_\_\_\_\_
10. \_\_\_\_\_
11. \_\_\_\_\_
12. \_\_\_\_\_

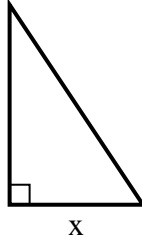


**Encuentra el valor de X.**

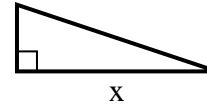
1) area =  $15 u^2$



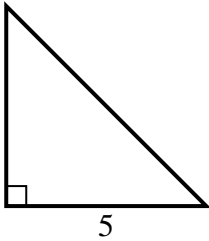
2) area =  $3 u^2$



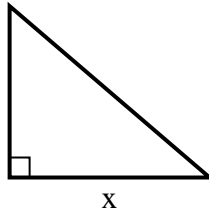
3) area =  $6 u^2$



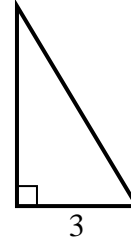
4) area =  $12.5 u^2$



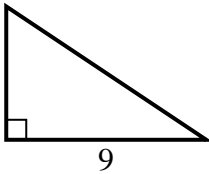
5) area =  $21 u^2$



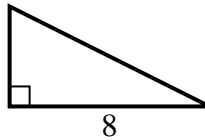
6) area =  $7.5 u^2$



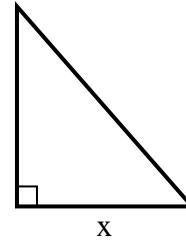
7) area =  $27 u^2$



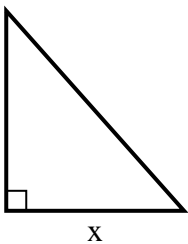
8) area =  $16 u^2$



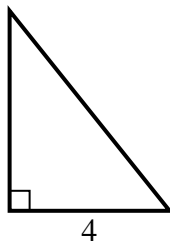
9) area =  $28 u^2$



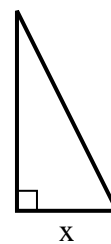
10) area =  $36 u^2$



11) area =  $10 u^2$



12) area =  $4 u^2$



**Respuestas**

1. 5

2. 2

3. 6

4. 5

5. 7

6. 5

7. 6

8. 4

9. 7

10. 8

11. 5

12. 2