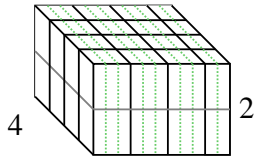


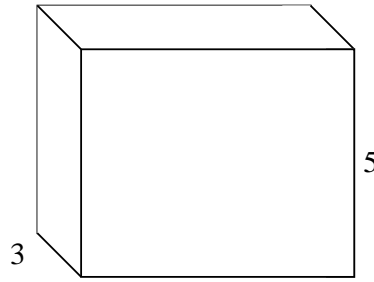


Rellenar cada prisma rectangular con cubos para determinar el volumen. Cada unidad de prisma es medida en cm (no a escala).


Ej) $3 \frac{2}{3}$



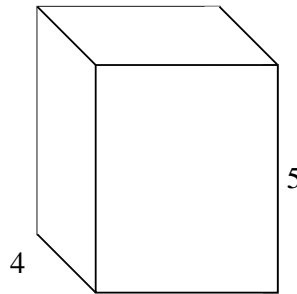
1) $6 \frac{2}{3}$



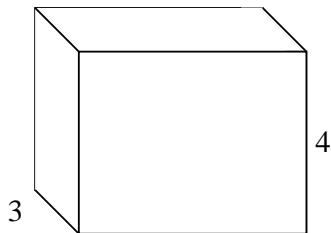
2) $6 \frac{2}{3}$




3) $4 \frac{1}{3}$



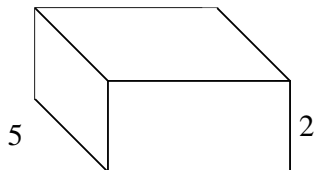
4) $5 \frac{1}{2}$



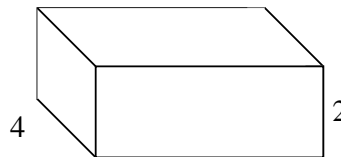
5) $6 \frac{1}{3}$



6) $4 \frac{1}{3}$



7) $5 \frac{2}{5}$



Respuestas

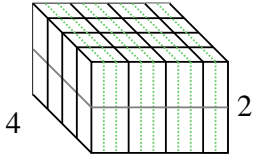
Ej. $29 \frac{1}{3} \text{ cm}^3$

1. _____
2. _____
3. _____
4. _____
5. _____
6. _____
7. _____

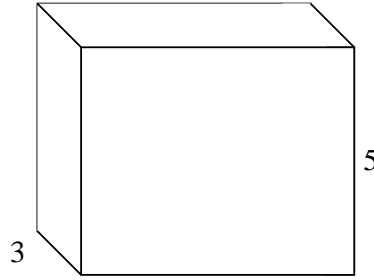


Rellenar cada prisma rectangular con cubos para determinar el volumen. Cada unidad de prisma es medida en cm (no a escala).


Ej) $3 \frac{2}{3}$



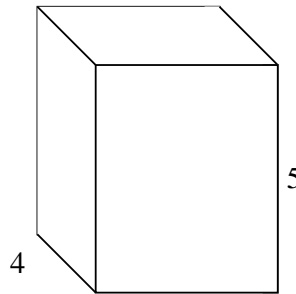
1) $6 \frac{2}{3}$



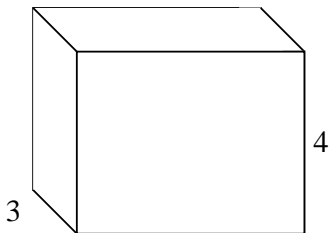
2) $6 \frac{2}{3}$




3) $4 \frac{1}{3}$



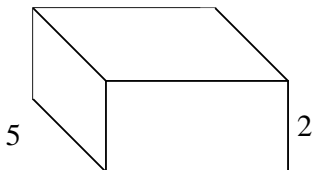
4) $5 \frac{1}{2}$



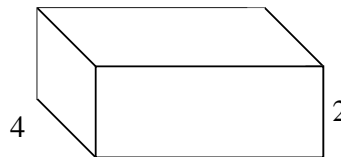
5) $6 \frac{1}{3}$



6) $4 \frac{1}{3}$



7) $5 \frac{2}{5}$



Respuestas

Ej. $29 \frac{1}{3} \text{ cm}^3$

1. 100 cm^3

2. 80 cm^3

3. $86 \frac{2}{3} \text{ cm}^3$

4. 66 cm^3

5. 38 cm^3

6. $43 \frac{1}{3} \text{ cm}^3$

7. $43 \frac{1}{5} \text{ cm}^3$