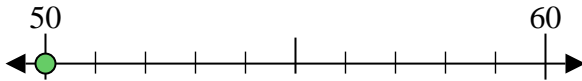


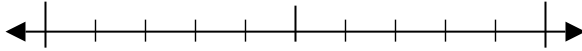


Usar las rectas numéricas para encontrar el número más cercano a 10.

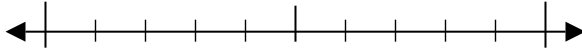
Ej) 50



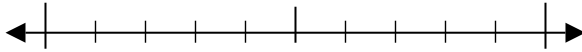
1) 21



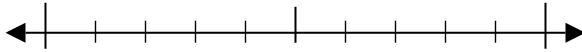
2) 22



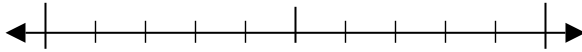
3) 33



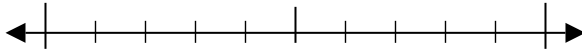
4) 39



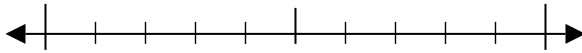
5) 182



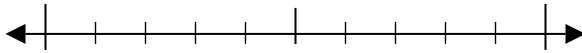
6) 889



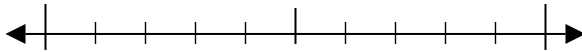
7) 286



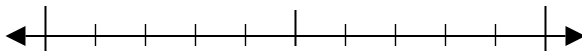
8) 507



9) 6,212



10) 9,046



Respuestas

Ej. 50

1. _____

2. _____

3. _____

4. _____

5. _____

6. _____

7. _____

8. _____

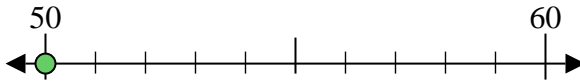
9. _____

10. _____

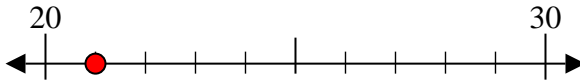


Usar las rectas numéricas para encontrar el número más cercano a 10.

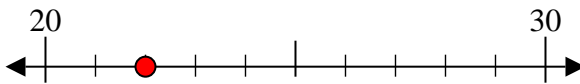
Ej) 50



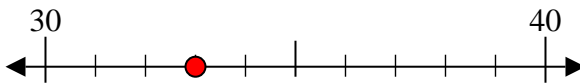
1) 21



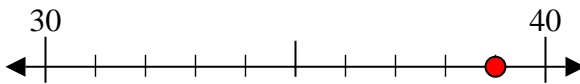
2) 22



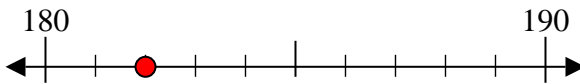
3) 33



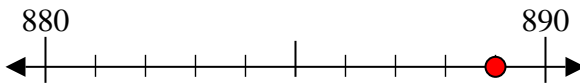
4) 39



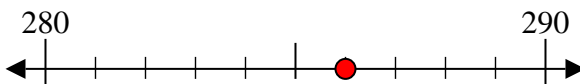
5) 182



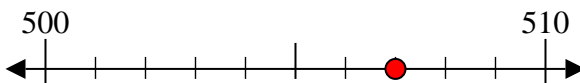
6) 889



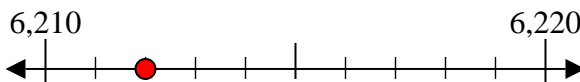
7) 286



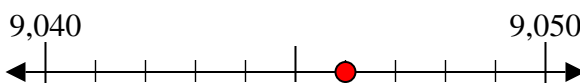
8) 507



9) 6,212



10) 9,046



Respuestas

Ej. 50

1. 20

2. 20

3. 30

4. 40

5. 180

6. 890

7. 290

8. 510

9. 6,210

10. 9,050