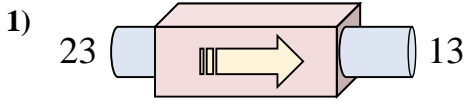
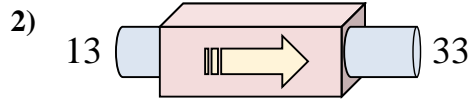




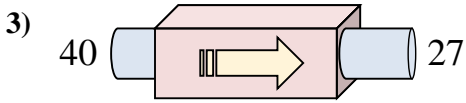
Determinar cuál regla está usando la máquina de funciones.



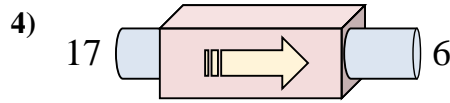
- A. Restar 10
- B. Subtract 10
- C. Add 5
- D. Subtract 15



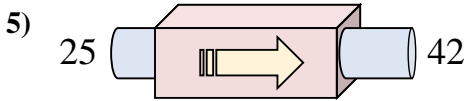
- A. Subtract 21
- B. Subtract 16
- C. Add 19
- D. Sumar 20



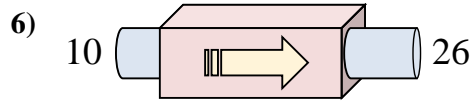
- A. Subtract 14
- B. Add 14
- C. Subtract 11
- D. Restar 13



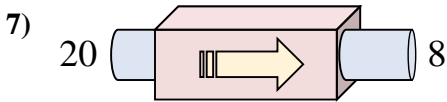
- A. Restar 11
- B. Add 10
- C. Subtract 12
- D. Subtract 15



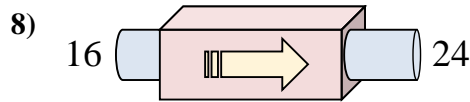
- A. Sumar 17
- B. Add 12
- C. Add 16
- D. Add 13



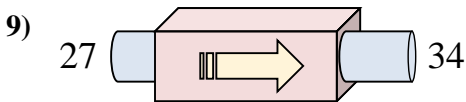
- A. Sumar 16
- B. Subtract 18
- C. Add 12
- D. Subtract 11



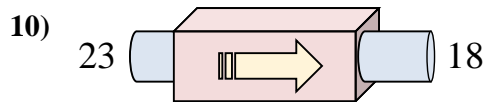
- A. Restar 12
- B. Subtract 8
- C. Add 8
- D. Subtract 12



- A. Add 11
- B. Sumar 8
- C. Add 13
- D. Add 4



- A. Subtract 7
- B. Add 5
- C. Sumar 7
- D. Add 3



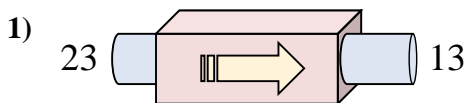
- A. Add 3
- B. Restar 5
- C. Add 9
- D. Subtract 2

Respuestas

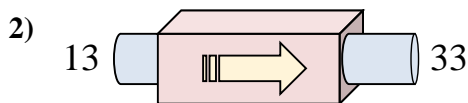
1. _____
2. _____
3. _____
4. _____
5. _____
6. _____
7. _____
8. _____
9. _____
10. _____



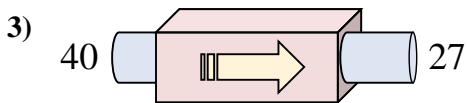
Determinar cuál regla está usando la máquina de funciones.



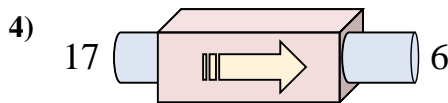
- A. Restar 10
- B. Subtract 10
- C. Add 5
- D. Subtract 15



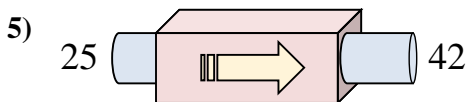
- A. Subtract 21
- B. Subtract 16
- C. Add 19
- D. Sumar 20



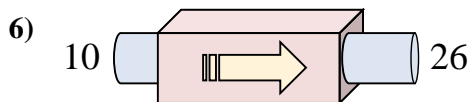
- A. Subtract 14
- B. Add 14
- C. Subtract 11
- D. Restar 13



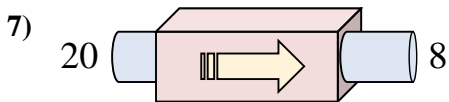
- A. Restar 11
- B. Add 10
- C. Subtract 12
- D. Subtract 15



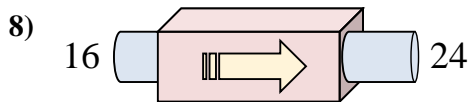
- A. Sumar 17
- B. Add 12
- C. Add 16
- D. Add 13



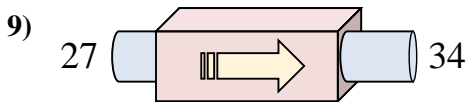
- A. Sumar 16
- B. Subtract 18
- C. Add 12
- D. Subtract 11



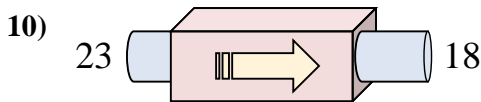
- A. Restar 12
- B. Subtract 8
- C. Add 8
- D. Subtract 12



- A. Add 11
- B. Sumar 8
- C. Add 13
- D. Add 4



- A. Subtract 7
- B. Add 5
- C. Sumar 7
- D. Add 3



- A. Add 3
- B. Restar 5
- C. Add 9
- D. Subtract 2

Respuestas

- 1. **A**
- 2. **D**
- 3. **D**
- 4. **A**
- 5. **A**
- 6. **A**
- 7. **A**
- 8. **B**
- 9. **C**
- 10. **B**