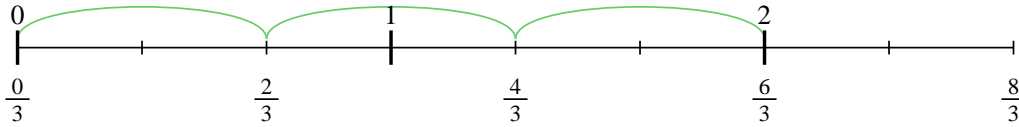


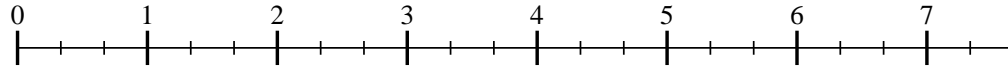


Usa la recta numérica para resolver cada problema. El primero ya está marcado como ejemplo.

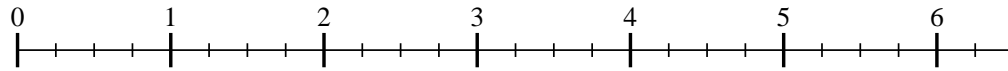
1) $2 \div \frac{2}{3}$



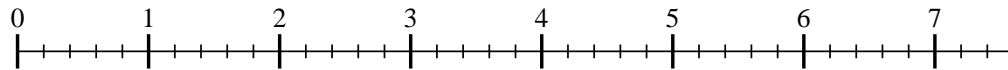
2) $7 \div \frac{2}{3}$



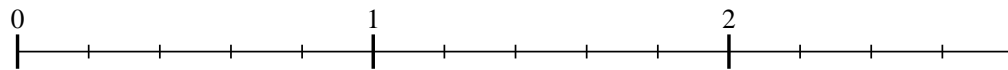
3) $6 \div \frac{3}{4}$



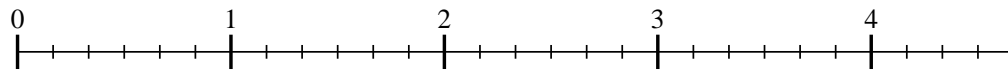
4) $7 \div \frac{2}{5}$



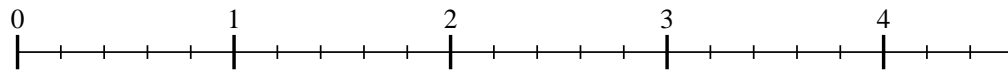
5) $2 \div \frac{3}{5}$



6) $4 \div \frac{5}{6}$



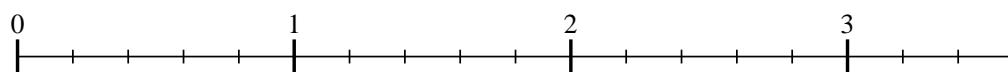
7) $4 \div \frac{2}{5}$



8) $7 \div \frac{3}{6}$



9) $3 \div \frac{2}{5}$



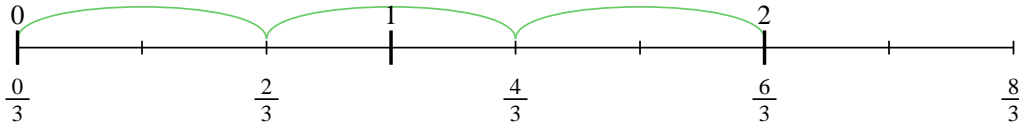
Respuestas

- 1. _____
- 2. _____
- 3. _____
- 4. _____
- 5. _____
- 6. _____
- 7. _____
- 8. _____
- 9. _____

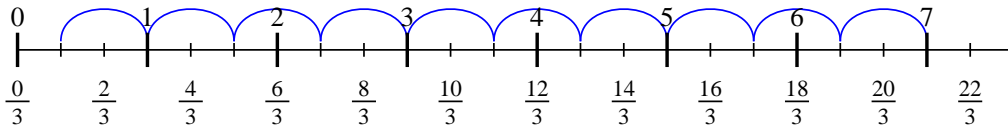


Usa la recta numérica para resolver cada problema. El primero ya está marcado como ejemplo.

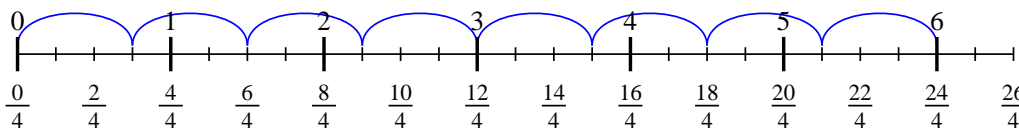
1) $2 \div \frac{2}{3}$



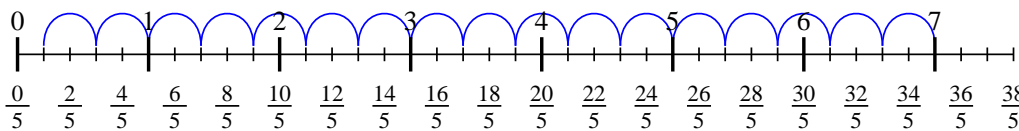
2) $7 \div \frac{2}{3}$



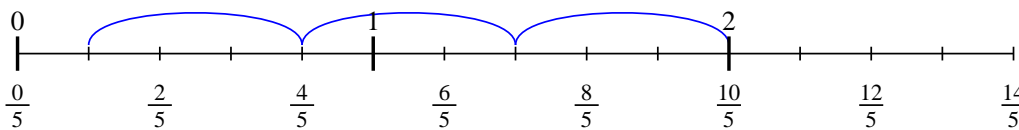
3) $6 \div \frac{3}{4}$



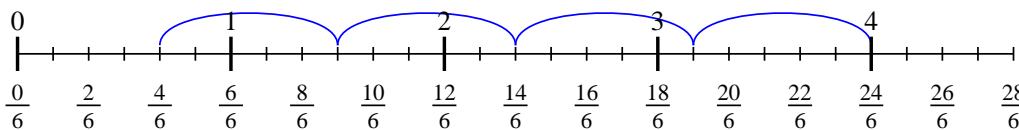
4) $7 \div \frac{2}{5}$



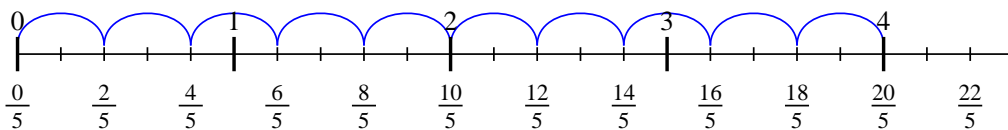
5) $2 \div \frac{3}{5}$



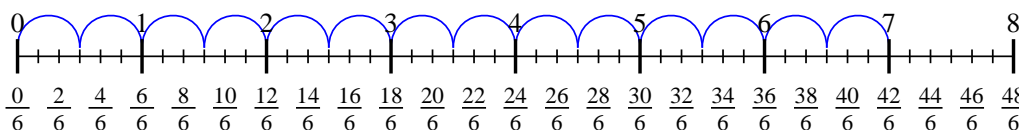
6) $4 \div \frac{5}{6}$



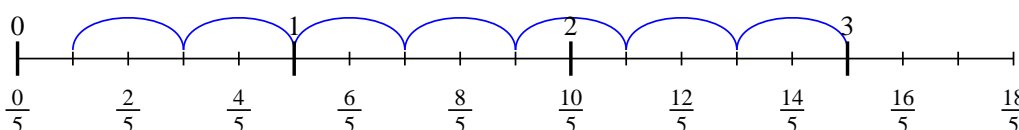
7) $4 \div \frac{2}{5}$



8) $7 \div \frac{3}{6}$



9) $3 \div \frac{2}{5}$



Respuestas

1. 3
2. $10 \frac{1}{2}$
3. 8
4. $17 \frac{1}{2}$
5. $3 \frac{1}{3}$
6. $4 \frac{4}{5}$
7. 10
8. 14
9. $7 \frac{1}{2}$