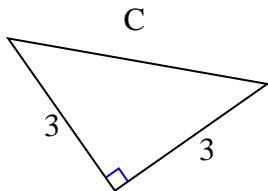




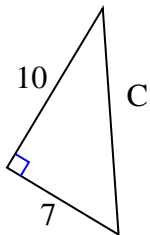
Encuentra el valor de 'C', redondea tu respuesta al centésimo más cercano.

Respuestas

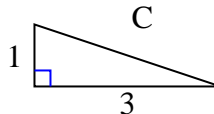
1)



2)



3)



1. _____

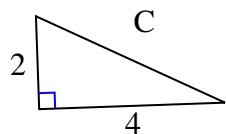
2. _____

3. _____

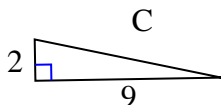
4. _____

5. _____

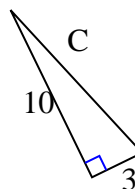
4)



5)



6)



6. _____

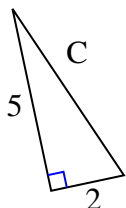
7. _____

8. _____

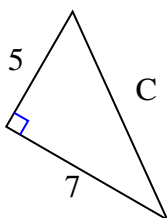
9. _____

10. _____

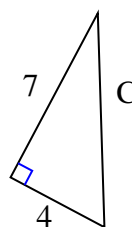
7)



8)



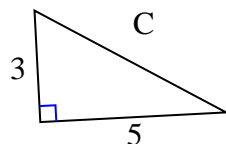
9)



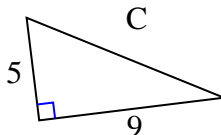
11. _____

12. _____

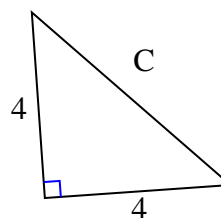
10)



11)

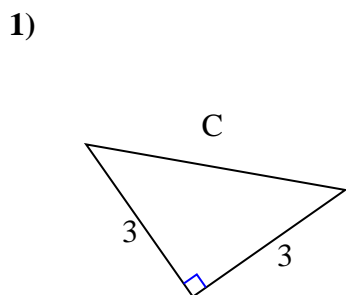


12)



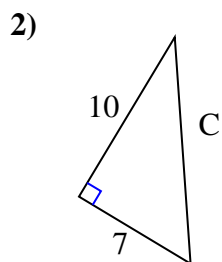


Encuentra el valor de 'C', redondea tu respuesta al centésimo más cercano.

Respuestas

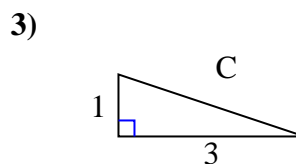
$$9 + 9 = 18$$

$$\sqrt{18} = 4.24$$



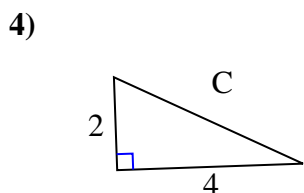
$$100 + 49 = 149$$

$$\sqrt{149} = 12.21$$



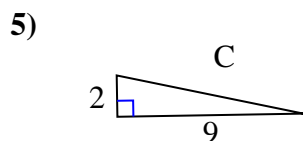
$$1 + 9 = 10$$

$$\sqrt{10} = 3.16$$



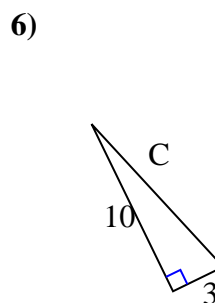
$$4 + 16 = 20$$

$$\sqrt{20} = 4.47$$



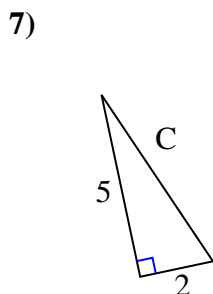
$$4 + 81 = 85$$

$$\sqrt{85} = 9.22$$



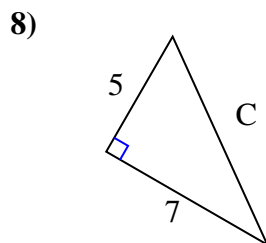
$$100 + 9 = 109$$

$$\sqrt{109} = 10.44$$



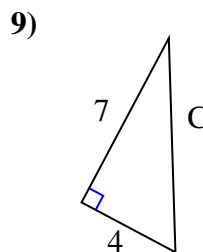
$$25 + 4 = 29$$

$$\sqrt{29} = 5.39$$



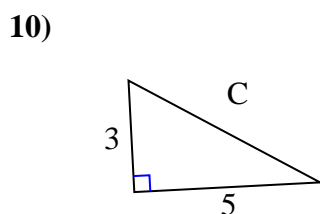
$$25 + 49 = 74$$

$$\sqrt{74} = 8.6$$



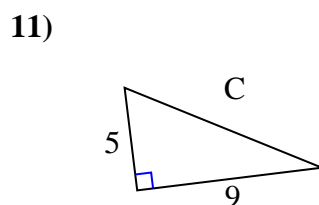
$$49 + 16 = 65$$

$$\sqrt{65} = 8.06$$



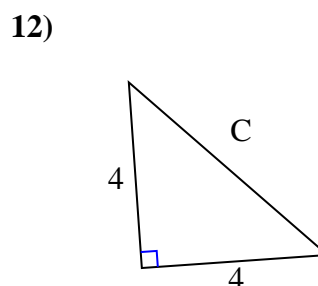
$$9 + 25 = 34$$

$$\sqrt{34} = 5.83$$



$$25 + 81 = 106$$

$$\sqrt{106} = 10.3$$



$$16 + 16 = 32$$

$$\sqrt{32} = 5.66$$

1. 4.242. 12.213. 3.164. 4.475. 9.226. 10.447. 5.398. 8.69. 8.0610. 5.8311. 10.312. 5.66