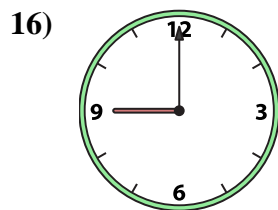
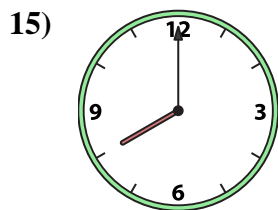
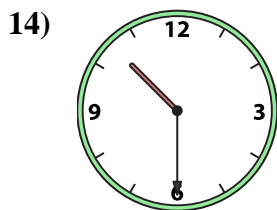
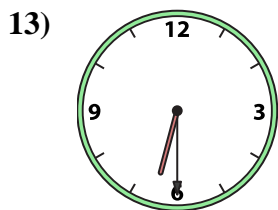

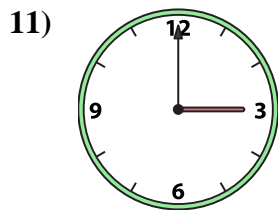
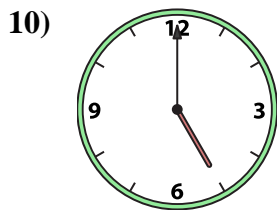
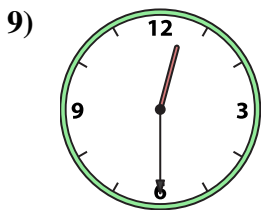
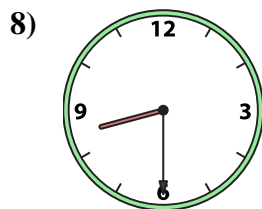
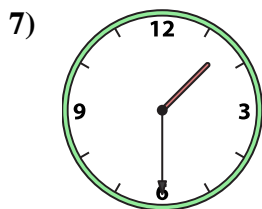
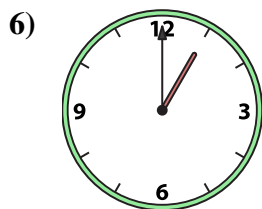
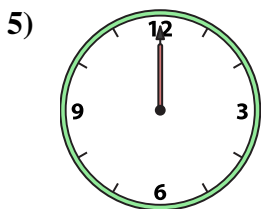
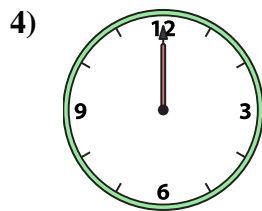
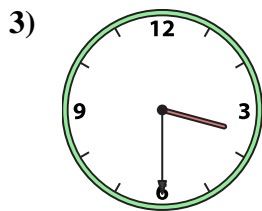
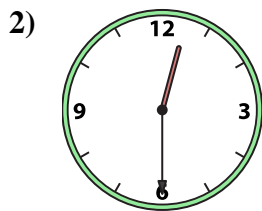





Emparejar el reloj analógico con el reloj digital correspondiente.

Respuestas



A. 3:30

B. 9:00

C. 12:00

D. 12:00

E. 10:30

F. 12:30

G. 8:00

H. 11:00

I. 5:00

J. 1:30

K. 12:30

L. 4:00

M. 3:00

N. 6:30

O. 8:30

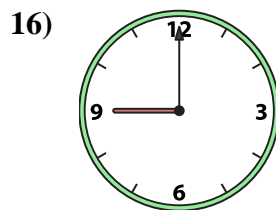
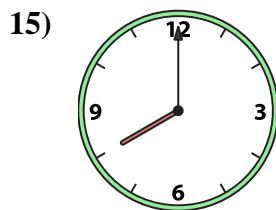
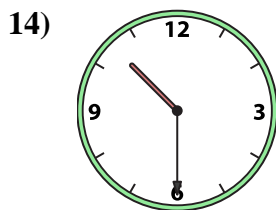
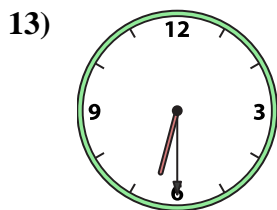
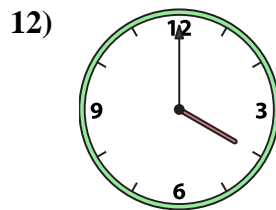
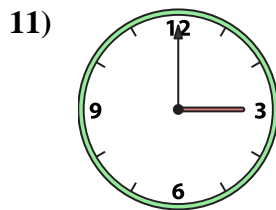
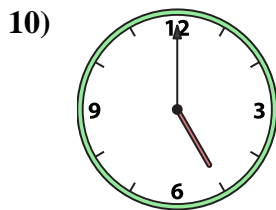
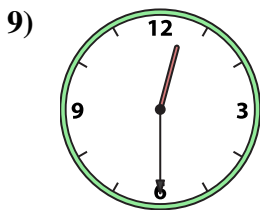
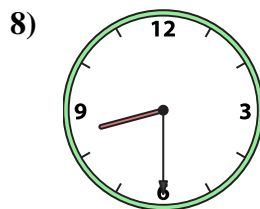
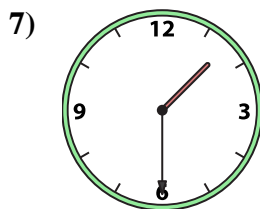
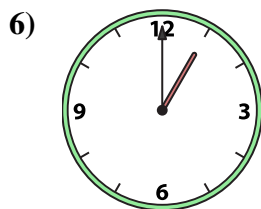
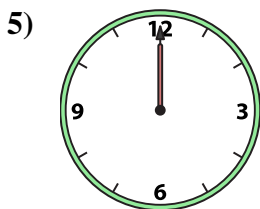
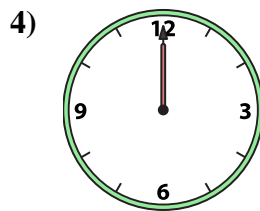
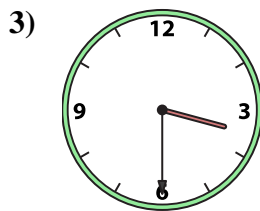
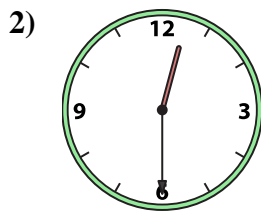
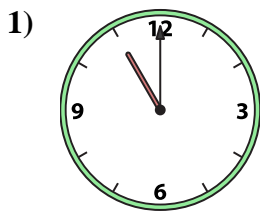
P. 1:00

1. _____
2. _____
3. _____
4. _____
5. _____
6. _____
7. _____
8. _____
9. _____
10. _____
11. _____
12. _____
13. _____
14. _____
15. _____
16. _____



Emparejar el reloj analógico con el reloj digital correspondiente.

Respuestas



A. 3:30

B. 9:00

C. 12:00

D. 12:00

E. 10:30

F. 12:30

G. 8:00

H. 11:00

I. 5:00

J. 1:30

K. 12:30

L. 4:00

M. 3:00

N. 6:30

O. 8:30

P. 1:00

- 1. **H**
- 2. **F**
- 3. **A**
- 4. **C**
- 5. **D**
- 6. **P**
- 7. **J**
- 8. **O**
- 9. **K**
- 10. **I**
- 11. **M**
- 12. **L**
- 13. **N**
- 14. **E**
- 15. **G**
- 16. **B**