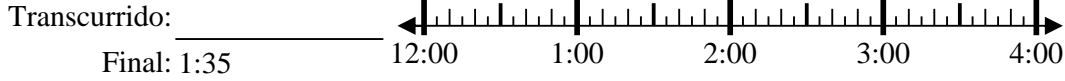


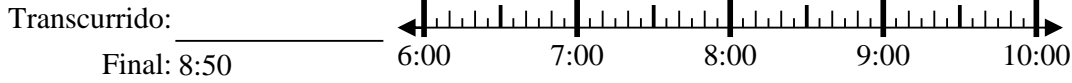


Resuelve cada problema.

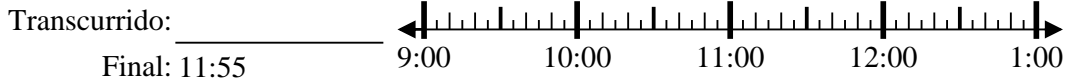
1) Inicio: 12:10



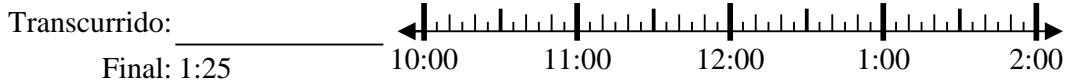
2) Inicio: 6:40



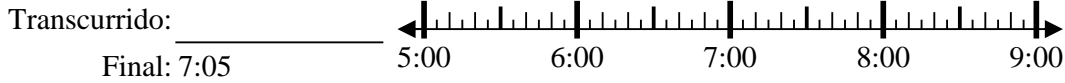
3) Inicio: 9:05



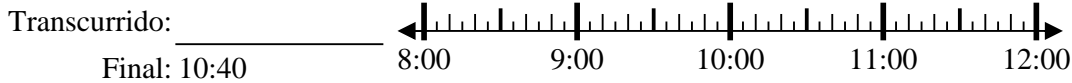
4) Inicio: 10:45



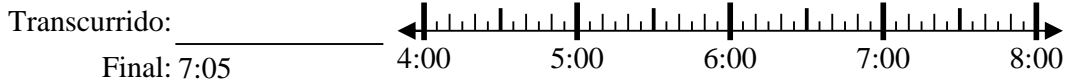
5) Inicio: 5:35



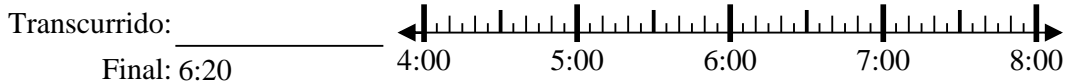
6) Inicio: 8:15



7) Inicio: 4:10



8) Inicio: 4:00



Respuestas

1. _____

2. _____

3. _____

4. _____

5. _____

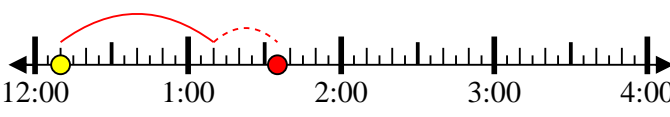
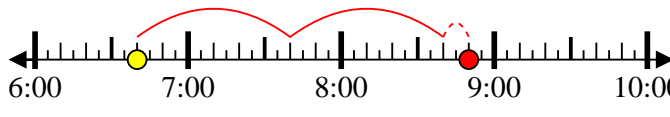
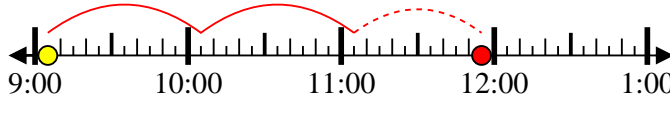


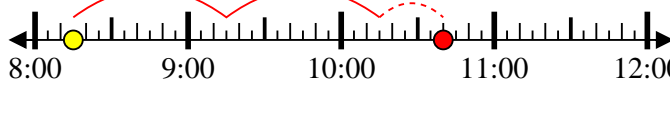

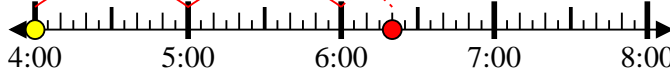
6. _____

7. _____

8. _____



Resuelve cada problema.

- 1) Inicio: 12:10
 Transcurrido: 1 hr y 25 mins
 Final: 1:35

- 2) Inicio: 6:40
 Transcurrido: 2 hrs y 10 mins
 Final: 8:50

- 3) Inicio: 9:05
 Transcurrido: 2 hrs y 50 mins
 Final: 11:55

- 4) Inicio: 10:45
 Transcurrido: 2 hrs y 40 mins
 Final: 1:25

- 5) Inicio: 5:35
 Transcurrido: 1 hr y 30 mins
 Final: 7:05

- 6) Inicio: 8:15
 Transcurrido: 2 hrs y 25 mins
 Final: 10:40

- 7) Inicio: 4:10
 Transcurrido: 2 hrs y 55 mins
 Final: 7:05

- 8) Inicio: 4:00
 Transcurrido: 2 hrs y 20 mins
 Final: 6:20


Respuestas

1. 1 hr y 25 mins
2. 2 hrs y 10 mins
3. 2 hrs y 50 mins
4. 2 hrs y 40 mins
5. 1 hr y 30 mins
6. 2 hrs y 25 mins
7. 2 hrs y 55 mins
8. 2 hrs y 20 mins