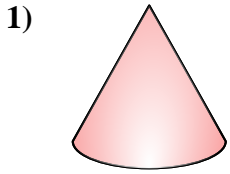


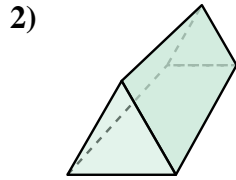


Determinar cuál de las opciones describe mejor la figura mostrada.

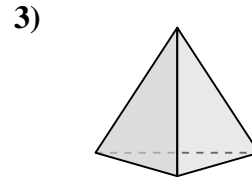
**Respuestas**



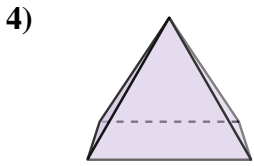
- A. sphere
- B. cone
- C. triangular pyramid
- D. cylinder



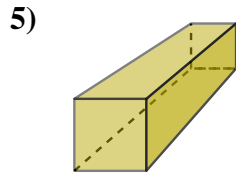
- A. cone
- B. triangular prism
- C. triangular pyramid
- D. rectangular pyramid



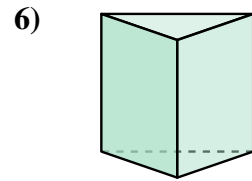
- A. triangular pyramid
- B. cone
- C. sphere
- D. triangular prism



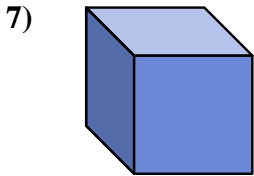
- A. cylinder
- B. cone
- C. triangular pyramid
- D. rectangular pyramid




- A. triangular pyramid
- B. triangular prism
- C. cone
- D. rectangular prism



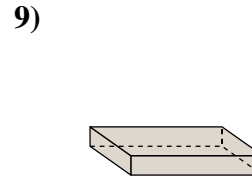
- A. triangular pyramid
- B. triangular prism
- C. rectangular prism
- D. rectangular pyramid



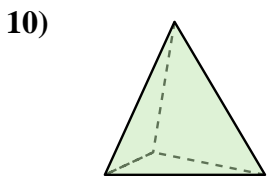
- A. triangular pyramid
- B. rectangular pyramid
- C. triangular prism
- D. cube



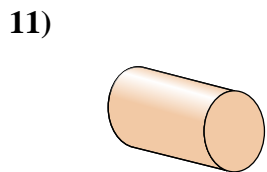
- A. rectangular pyramid
- B. sphere
- C. cube
- D. triangular pyramid



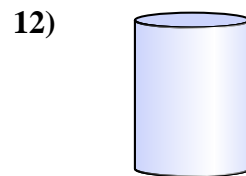
- A. triangular pyramid
- B. cube
- C. rectangular prism
- D. cone



- A. triangular prism
- B. triangular pyramid
- C. sphere
- D. rectangular pyramid



- A. cone
- B. triangular prism
- C. cylinder
- D. triangular pyramid



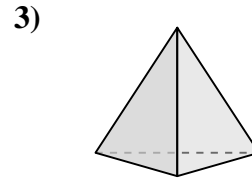
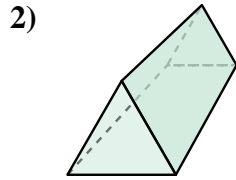
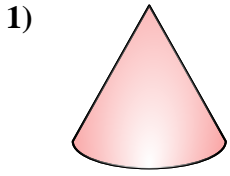
- A. rectangular prism
- B. triangular pyramid
- C. sphere
- D. cylinder

- 1. \_\_\_\_\_
- 2. \_\_\_\_\_
- 3. \_\_\_\_\_
- 4. \_\_\_\_\_
- 5. \_\_\_\_\_
- 6. \_\_\_\_\_
- 7. \_\_\_\_\_
- 8. \_\_\_\_\_
- 9. \_\_\_\_\_
- 10. \_\_\_\_\_
- 11. \_\_\_\_\_
- 12. \_\_\_\_\_



Determinar cuál de las opciones describe mejor la figura mostrada.

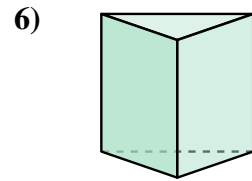
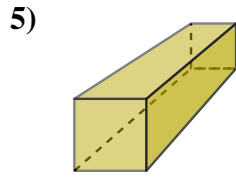
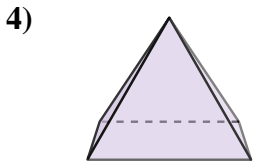
**Respuestas**



- 1) A. sphere
- B. cone
- C. triangular pyramid
- D. cylinder

- 2) A. cone
- B. triangular prism
- C. triangular pyramid
- D. rectangular pyramid

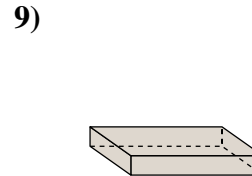
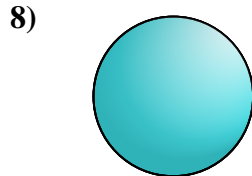
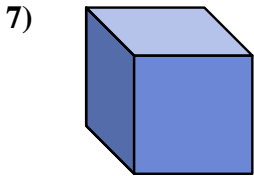
- 3) A. triangular pyramid
- B. cone
- C. sphere
- D. triangular prism



- 4) A. cylinder
- B. cone
- C. triangular pyramid
- D. rectangular pyramid

- 5) A. triangular pyramid
- B. triangular prism
- C. cone
- D. rectangular prism

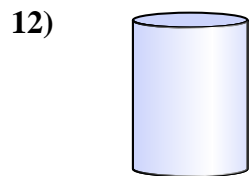

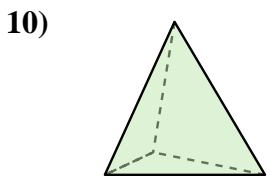
- 6) A. triangular pyramid
- B. triangular prism
- C. rectangular prism
- D. rectangular pyramid



- 7) A. triangular pyramid
- B. rectangular pyramid
- C. triangular prism
- D. cube

- 8) A. rectangular pyramid
- B. sphere
- C. cube
- D. triangular pyramid

- 9) A. triangular pyramid
- B. cube
- C. rectangular prism
- D. cone



- 10) A. triangular prism
- B. triangular pyramid
- C. sphere
- D. rectangular pyramid

- 11) A. cone
- B. triangular prism
- C. cylinder
- D. triangular pyramid

- 12) A. rectangular prism
- B. triangular pyramid
- C. sphere
- D. cylinder

- 1. **B**
- 2. **B**
- 3. **A**
- 4. **D**
- 5. **D**
- 6. **B**
- 7. **D**
- 8. **B**
- 9. **C**
- 10. **B**
- 11. **C**
- 12. **D**