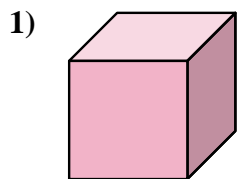


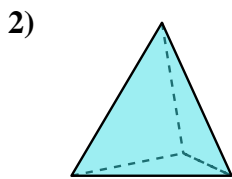


Determinar cuál de las opciones describe mejor la figura mostrada.

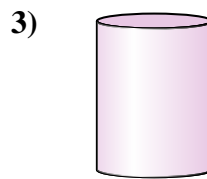
Respuestas



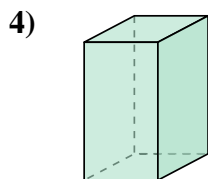
- A. cylinder
- B. triangular pyramid
- C. triangular prism
- D. cube



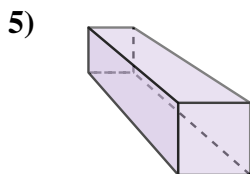
- A. rectangular pyramid
- B. triangular pyramid
- C. triangular prism
- D. rectangular prism



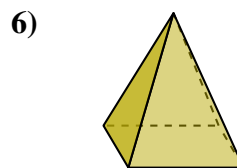
- A. cylinder
- B. sphere
- C. cone
- D. cube



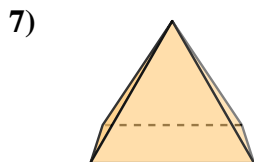
- A. cylinder
- B. rectangular pyramid
- C. sphere
- D. rectangular prism



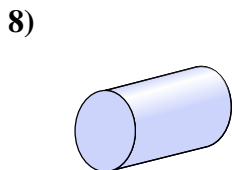
- A. rectangular prism
- B. cylinder
- C. cube
- D. sphere



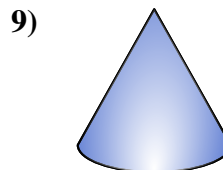
- A. rectangular pyramid
- B. triangular prism
- C. sphere
- D. cone



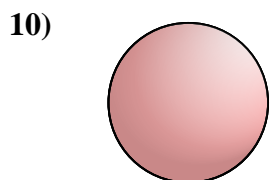
- A. cone
- B. triangular prism
- C. rectangular pyramid
- D. sphere



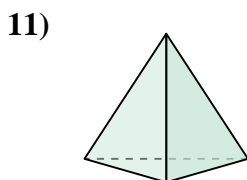
- A. triangular pyramid
- B. cylinder
- C. rectangular pyramid
- D. sphere



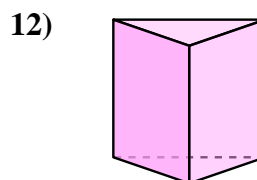
- A. cone
- B. cylinder
- C. triangular pyramid
- D. sphere



- A. cylinder
- B. triangular prism
- C. sphere
- D. cube



- A. sphere
- B. triangular pyramid
- C. rectangular pyramid
- D. rectangular prism



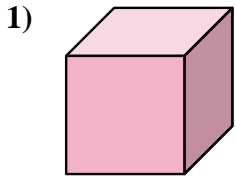
- A. triangular prism
- B. cylinder
- C. rectangular prism
- D. triangular pyramid

- 1. _____
- 2. _____
- 3. _____
- 4. _____
- 5. _____
- 6. _____
- 7. _____
- 8. _____
- 9. _____
- 10. _____
- 11. _____
- 12. _____

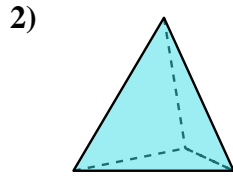


Determinar cuál de las opciones describe mejor la figura mostrada.

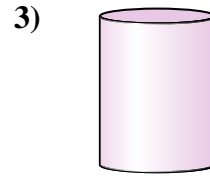
Respuestas



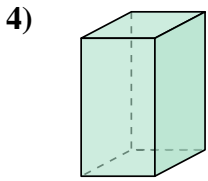
- A. cylinder
- B. triangular pyramid
- C. triangular prism
- D. cube



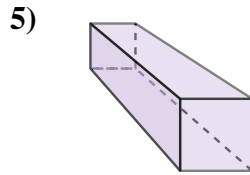
- A. rectangular pyramid
- B. triangular pyramid
- C. triangular prism
- D. rectangular prism



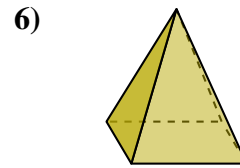
- A. cylinder
- B. sphere
- C. cone
- D. cube



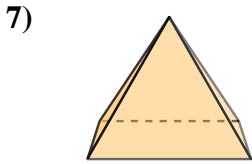
- A. cylinder
- B. rectangular pyramid
- C. sphere
- D. rectangular prism



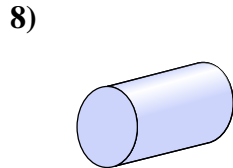
- A. rectangular prism
- B. cylinder
- C. cube
- D. sphere



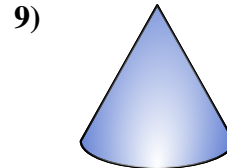
- A. rectangular pyramid
- B. triangular prism
- C. sphere
- D. cone



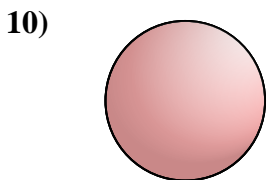
- A. cone
- B. triangular prism
- C. rectangular pyramid
- D. sphere



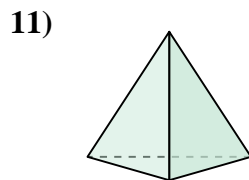
- A. triangular pyramid
- B. cylinder
- C. rectangular pyramid
- D. sphere



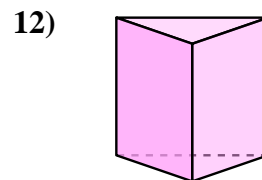
- A. cone
- B. cylinder
- C. triangular pyramid
- D. sphere



- A. cylinder
- B. triangular prism
- C. sphere
- D. cube



- A. sphere
- B. triangular pyramid
- C. rectangular pyramid
- D. rectangular prism



- A. triangular prism
- B. cylinder
- C. rectangular prism
- D. triangular pyramid

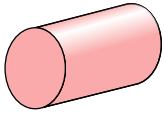
- 1. **D**
- 2. **B**
- 3. **A**
- 4. **D**
- 5. **A**
- 6. **A**
- 7. **C**
- 8. **B**
- 9. **A**
- 10. **C**
- 11. **B**
- 12. **A**



Determinar cuál de las opciones describe mejor la figura mostrada.

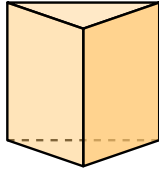
Respuestas

1)



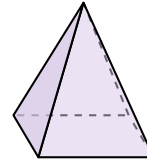
- A. sphere
- B. triangular pyramid
- C. rectangular pyramid
- D. cylinder

2)




- A. triangular prism
- B. cone
- C. triangular pyramid
- D. rectangular prism

3)



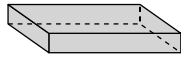
- A. rectangular pyramid
- B. sphere
- C. rectangular prism
- D. triangular prism

4)



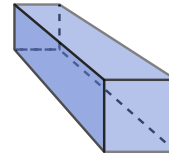
- A. triangular pyramid
- B. cylinder
- C. triangular prism
- D. sphere

5)



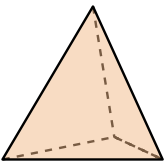
- A. rectangular pyramid
- B. sphere
- C. rectangular prism
- D. triangular prism

6)



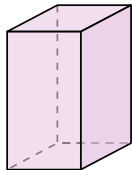
- A. cube
- B. cone
- C. triangular pyramid
- D. rectangular prism

7)



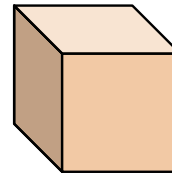
- A. triangular pyramid
- B. triangular prism
- C. cone
- D. rectangular pyramid

8)



- A. cube
- B. cylinder
- C. rectangular pyramid
- D. rectangular prism

9)



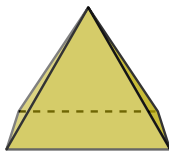
- A. cone
- B. cube
- C. triangular prism
- D. rectangular pyramid

10)




- A. cylinder
- B. sphere
- C. triangular pyramid
- D. cone

11)



- A. rectangular pyramid
- B. rectangular prism
- C. sphere
- D. cube

12)



- A. cone
- B. triangular pyramid
- C. triangular prism
- D. sphere

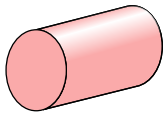
- 1. _____
- 2. _____
- 3. _____
- 4. _____
- 5. _____
- 6. _____
- 7. _____
- 8. _____
- 9. _____
- 10. _____
- 11. _____
- 12. _____



Determinar cuál de las opciones describe mejor la figura mostrada.

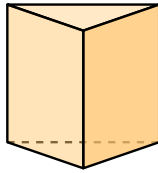
Respuestas

1)



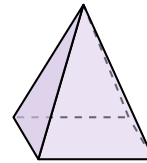
- A. sphere
- B. triangular pyramid
- C. rectangular pyramid
- D. cylinder

2)




- A. triangular prism
- B. cone
- C. triangular pyramid
- D. rectangular prism

3)



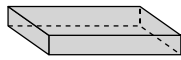
- A. rectangular pyramid
- B. sphere
- C. rectangular prism
- D. triangular prism

4)



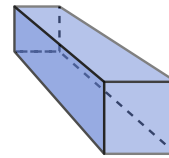
- A. triangular pyramid
- B. cylinder
- C. triangular prism
- D. sphere

5)



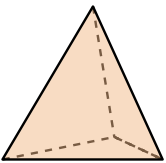
- A. rectangular pyramid
- B. sphere
- C. rectangular prism
- D. triangular prism

6)



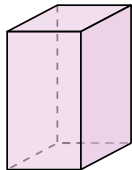
- A. cube
- B. cone
- C. triangular pyramid
- D. rectangular prism

7)



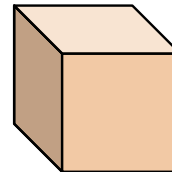
- A. triangular pyramid
- B. triangular prism
- C. cone
- D. rectangular pyramid

8)



- A. cube
- B. cylinder
- C. rectangular pyramid
- D. rectangular prism

9)



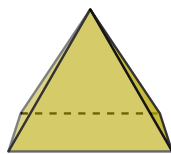
- A. cone
- B. cube
- C. triangular prism
- D. rectangular pyramid

10)




- A. cylinder
- B. sphere
- C. triangular pyramid
- D. cone

11)



- A. rectangular pyramid
- B. rectangular prism
- C. sphere
- D. cube

12)



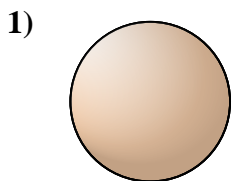
- A. cone
- B. triangular pyramid
- C. triangular prism
- D. sphere

- 1. **D**
- 2. **A**
- 3. **A**
- 4. **B**
- 5. **C**
- 6. **D**
- 7. **A**
- 8. **D**
- 9. **B**
- 10. **D**
- 11. **A**
- 12. **D**

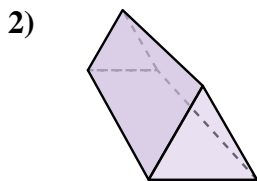


Determinar cuál de las opciones describe mejor la figura mostrada.

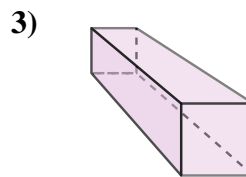
Respuestas



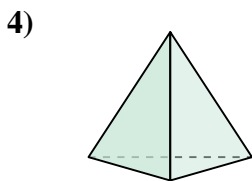
- A. triangular pyramid
- B. sphere
- C. rectangular pyramid
- D. rectangular prism



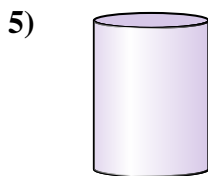
- A. triangular pyramid
- B. cone
- C. triangular prism
- D. cube



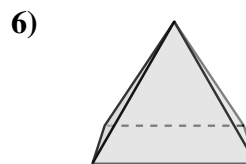
- A. cube
- B. triangular prism
- C. rectangular prism
- D. rectangular pyramid



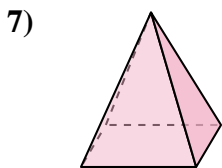
- A. triangular pyramid
- B. sphere
- C. triangular prism
- D. cube




- A. rectangular prism
- B. rectangular pyramid
- C. cylinder
- D. triangular pyramid



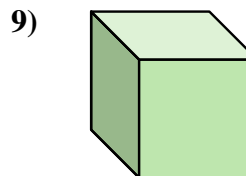
- A. cone
- B. triangular pyramid
- C. rectangular pyramid
- D. cylinder



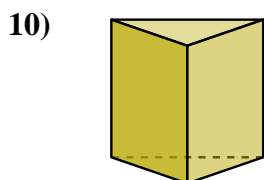
- A. triangular pyramid
- B. cube
- C. rectangular prism
- D. rectangular pyramid



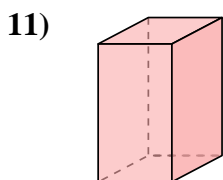
- A. rectangular pyramid
- B. cube
- C. triangular prism
- D. cone



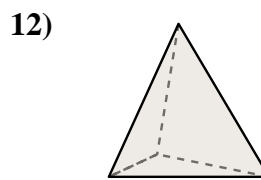
- A. cylinder
- B. rectangular prism
- C. triangular prism
- D. cube



- A. cylinder
- B. sphere
- C. cone
- D. triangular prism



- A. triangular prism
- B. cube
- C. rectangular prism
- D. cone



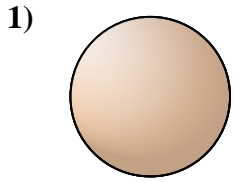
- A. sphere
- B. triangular prism
- C. cube
- D. triangular pyramid

- 1. _____
- 2. _____
- 3. _____
- 4. _____
- 5. _____
- 6. _____
- 7. _____
- 8. _____
- 9. _____
- 10. _____
- 11. _____
- 12. _____

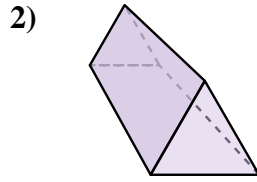


Determinar cuál de las opciones describe mejor la figura mostrada.

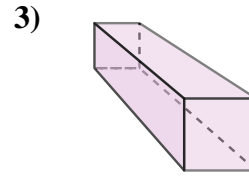
Respuestas



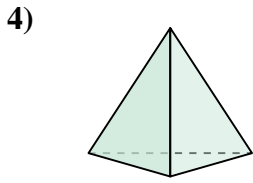
- 1) A. triangular pyramid
 B. sphere
 C. rectangular pyramid
 D. rectangular prism



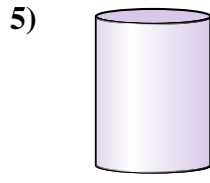
- 2) A. triangular pyramid
 B. cone
 C. triangular prism
 D. cube



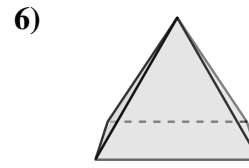
- 3) A. cube
 B. triangular prism
 C. rectangular prism
 D. rectangular pyramid



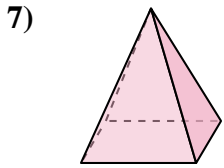
- 4) A. triangular pyramid
 B. sphere
 C. triangular prism
 D. cube




- 5) A. rectangular prism
 B. rectangular pyramid
 C. cylinder
 D. triangular pyramid



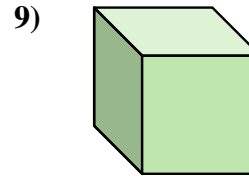
- 6) A. cone
 B. triangular pyramid
 C. rectangular pyramid
 D. cylinder



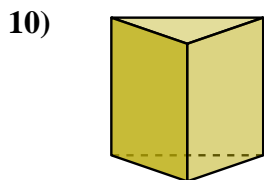
- 7) A. triangular pyramid
 B. cube
 C. rectangular prism
 D. rectangular pyramid



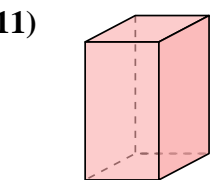
- 8) A. rectangular pyramid
 B. cube
 C. triangular prism
 D. cone



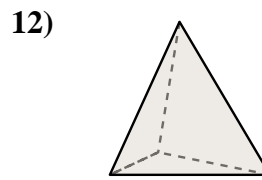
- 9) A. cylinder
 B. rectangular prism
 C. triangular prism
 D. cube



- 10) A. cylinder
 B. sphere
 C. cone
 D. triangular prism



- 11) A. triangular prism
 B. cube
 C. rectangular prism
 D. cone



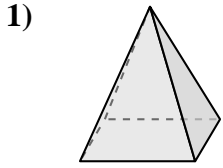
- 12) A. sphere
 B. triangular prism
 C. cube
 D. triangular pyramid

1. **B**
 2. **C**
 3. **C**
 4. **A**
 5. **C**
 6. **C**
 7. **D**
 8. **D**
 9. **D**
 10. **D**
 11. **C**
 12. **D**




Determinar cuál de las opciones describe mejor la figura mostrada.

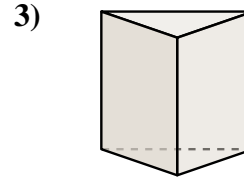
Respuestas



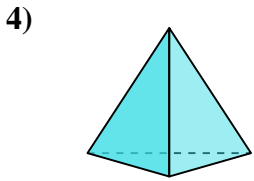
- A. sphere
- B. rectangular prism
- C. rectangular pyramid
- D. cube



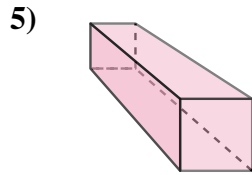
- A. cylinder
- B. rectangular pyramid
- C. rectangular prism
- D. sphere



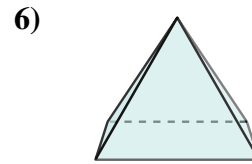
- A. triangular prism
- B. cylinder
- C. sphere
- D. cube



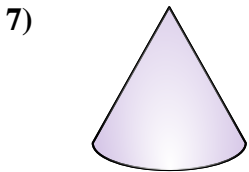
- A. triangular pyramid
- B. cube
- C. rectangular pyramid
- D. sphere



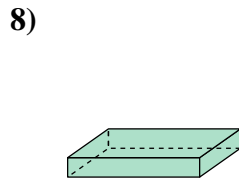
- A. rectangular prism
- B. sphere
- C. rectangular pyramid
- D. triangular pyramid



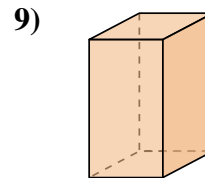
- A. sphere
- B. cube
- C. rectangular pyramid
- D. triangular prism



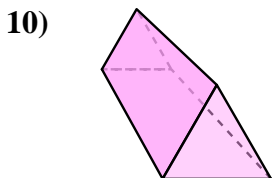
- A. cube
- B. cone
- C. triangular pyramid
- D. sphere



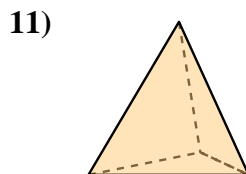
- A. cylinder
- B. rectangular prism
- C. sphere
- D. cube



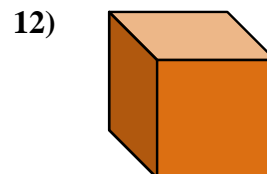
- A. cone
- B. cylinder
- C. triangular prism
- D. rectangular prism



- A. rectangular pyramid
- B. sphere
- C. triangular prism
- D. cylinder



- A. cube
- B. cylinder
- C. cone
- D. triangular pyramid



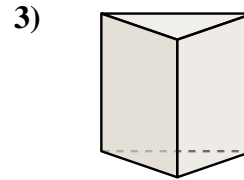

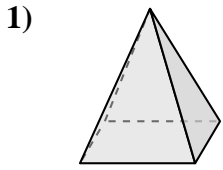
- A. cube
- B. rectangular prism
- C. rectangular pyramid
- D. triangular pyramid

- 1. _____
- 2. _____
- 3. _____
- 4. _____
- 5. _____
- 6. _____
- 7. _____
- 8. _____
- 9. _____
- 10. _____
- 11. _____
- 12. _____



Determinar cuál de las opciones describe mejor la figura mostrada.

Respuestas



- 1) A. sphere
- B. rectangular prism
- C. rectangular pyramid
- D. cube

- 2) A. cylinder
- B. rectangular pyramid
- C. rectangular prism
- D. sphere

- 3) A. triangular prism
- B. cylinder
- C. sphere
- D. cube

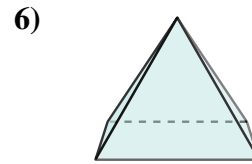
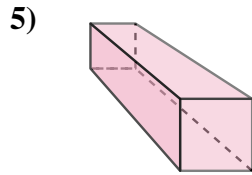
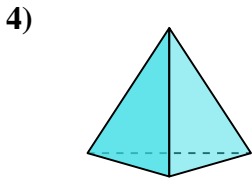
1. **C**

2. **D**

3. **A**

4. **A**

5. **A**



- 4) A. triangular pyramid
- B. cube
- C. rectangular pyramid
- D. sphere

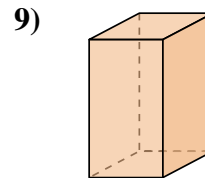
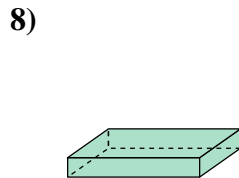
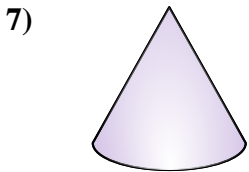
- 5) A. rectangular prism
- B. sphere
- C. rectangular pyramid
- D. triangular pyramid

- 6) A. sphere
- B. cube
- C. rectangular pyramid
- D. triangular prism

6. **C**

7. **B**

8. **B**



- 7) A. cube
- B. cone
- C. triangular pyramid
- D. sphere

- 8) A. cylinder
- B. rectangular prism
- C. sphere
- D. cube

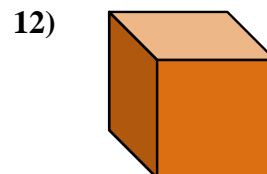
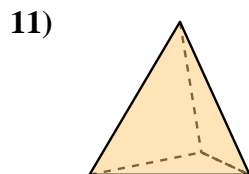
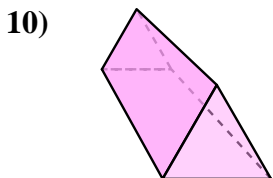
- 9) A. cone
- B. cylinder
- C. triangular prism
- D. rectangular prism

9. **D**

10. **C**

11. **D**

12. **A**



- 10) A. rectangular pyramid
- B. sphere
- C. triangular prism
- D. cylinder

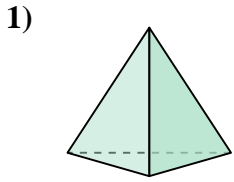
- 11) A. cube
- B. cylinder
- C. cone
- D. triangular pyramid

- 12) A. cube
- B. rectangular prism
- C. rectangular pyramid
- D. triangular pyramid

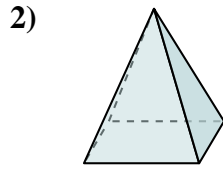


Determinar cuál de las opciones describe mejor la figura mostrada.

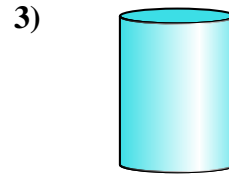
Respuestas



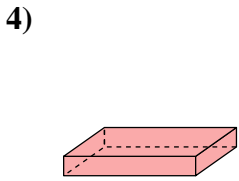
- A. triangular pyramid
- B. sphere
- C. cylinder
- D. rectangular pyramid



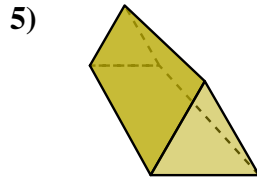
- A. triangular pyramid
- B. cone
- C. cube
- D. rectangular pyramid



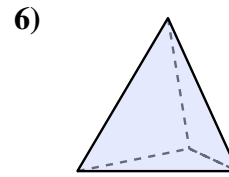
- A. rectangular pyramid
- B. rectangular prism
- C. cylinder
- D. sphere



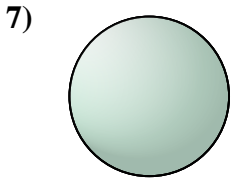
- A. rectangular prism
- B. rectangular pyramid
- C. triangular pyramid
- D. cone



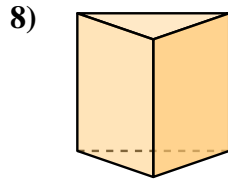
- A. rectangular pyramid
- B. rectangular prism
- C. triangular prism
- D. triangular pyramid



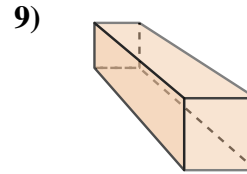
- A. triangular pyramid
- B. rectangular prism
- C. triangular prism
- D. cube



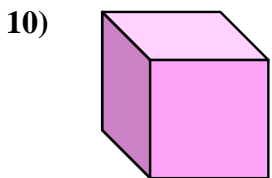
- A. triangular prism
- B. rectangular prism
- C. sphere
- D. cube



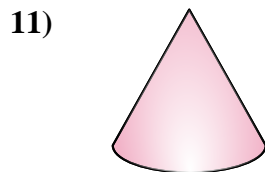
- A. cone
- B. triangular prism
- C. cube
- D. rectangular prism



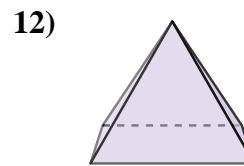
- A. cylinder
- B. sphere
- C. rectangular prism
- D. rectangular pyramid



- A. rectangular pyramid
- B. cube
- C. triangular prism
- D. cone



- A. rectangular pyramid
- B. sphere
- C. triangular prism
- D. cone



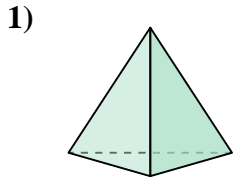
- A. triangular prism
- B. triangular pyramid
- C. cube
- D. rectangular pyramid

- 1. _____
- 2. _____
- 3. _____
- 4. _____
- 5. _____
- 6. _____
- 7. _____
- 8. _____
- 9. _____
- 10. _____
- 11. _____
- 12. _____

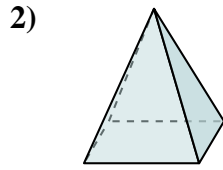


Determinar cuál de las opciones describe mejor la figura mostrada.

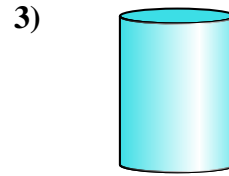
Respuestas



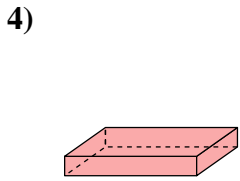
- A. triangular pyramid
- B. sphere
- C. cylinder
- D. rectangular pyramid



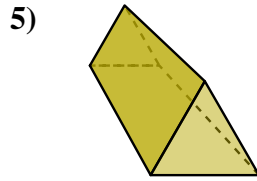
- A. triangular pyramid
- B. cone
- C. cube
- D. rectangular pyramid



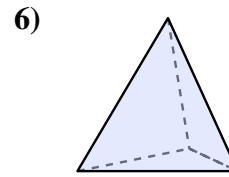
- A. rectangular pyramid
- B. rectangular prism
- C. cylinder
- D. sphere



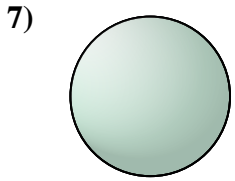
- A. rectangular prism
- B. rectangular pyramid
- C. triangular pyramid
- D. cone



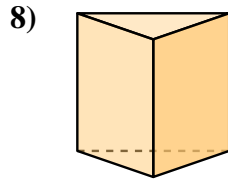
- A. rectangular pyramid
- B. rectangular prism
- C. triangular prism
- D. triangular pyramid



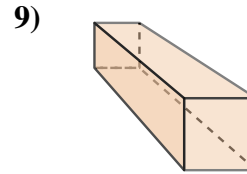
- A. triangular pyramid
- B. rectangular prism
- C. triangular prism
- D. cube



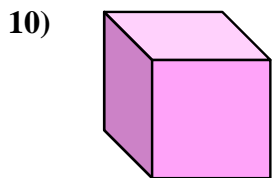
- A. triangular prism
- B. rectangular prism
- C. sphere
- D. cube



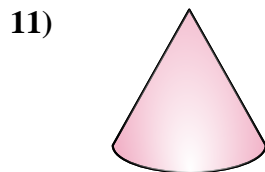
- A. cone
- B. triangular prism
- C. cube
- D. rectangular prism



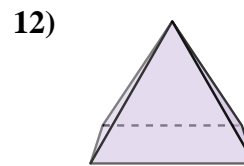
- A. cylinder
- B. sphere
- C. rectangular prism
- D. rectangular pyramid



- A. rectangular pyramid
- B. cube
- C. triangular prism
- D. cone



- A. rectangular pyramid
- B. sphere
- C. triangular prism
- D. cone



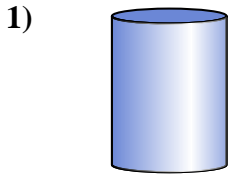
- A. triangular prism
- B. triangular pyramid
- C. cube
- D. rectangular pyramid

- 1. **A**
- 2. **D**
- 3. **C**
- 4. **A**
- 5. **C**
- 6. **A**
- 7. **C**
- 8. **B**
- 9. **C**
- 10. **B**
- 11. **D**
- 12. **D**

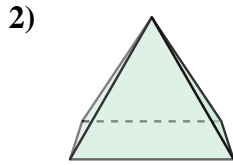


Determinar cuál de las opciones describe mejor la figura mostrada.

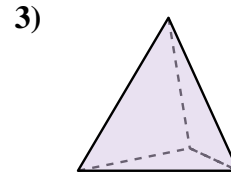
Respuestas



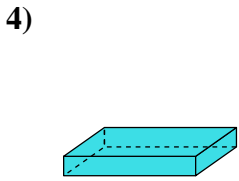
- A. rectangular prism
- B. cylinder
- C. cone
- D. sphere



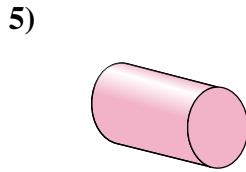
- A. cylinder
- B. triangular prism
- C. rectangular pyramid
- D. triangular pyramid



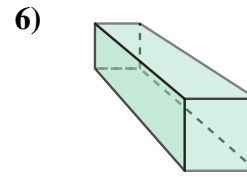
- A. cone
- B. cylinder
- C. sphere
- D. triangular pyramid



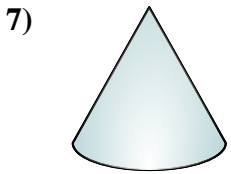
- A. triangular prism
- B. cylinder
- C. rectangular prism
- D. sphere




- A. cylinder
- B. cube
- C. rectangular prism
- D. rectangular pyramid



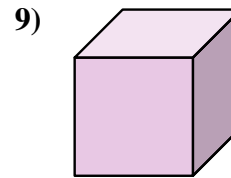
- A. triangular pyramid
- B. rectangular prism
- C. cube
- D. cone



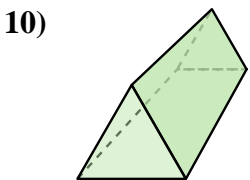
- A. sphere
- B. cylinder
- C. cone
- D. cube



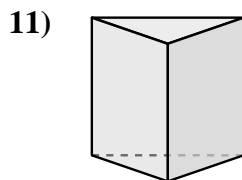
- A. cube
- B. sphere
- C. cone
- D. cylinder



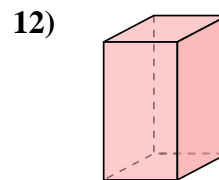
- A. triangular pyramid
- B. cube
- C. triangular prism
- D. rectangular prism



- A. triangular pyramid
- B. cone
- C. triangular prism
- D. sphere



- A. triangular prism
- B. triangular pyramid
- C. cylinder
- D. rectangular prism



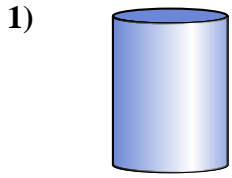
- A. sphere
- B. cube
- C. triangular prism
- D. rectangular prism

- 1. _____
- 2. _____
- 3. _____
- 4. _____
- 5. _____
- 6. _____
- 7. _____
- 8. _____
- 9. _____
- 10. _____
- 11. _____
- 12. _____

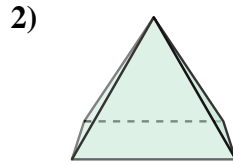


Determinar cuál de las opciones describe mejor la figura mostrada.

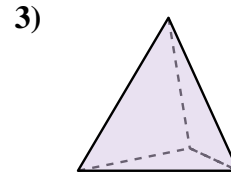
Respuestas



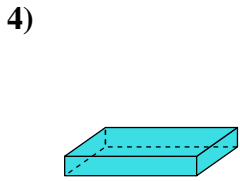
- A. rectangular prism
- B. cylinder
- C. cone
- D. sphere



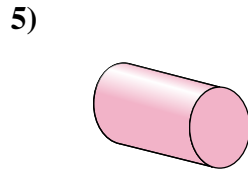
- A. cylinder
- B. triangular prism
- C. rectangular pyramid
- D. triangular pyramid



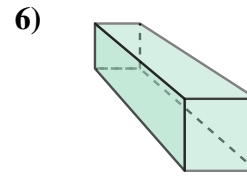
- A. cone
- B. cylinder
- C. sphere
- D. triangular pyramid



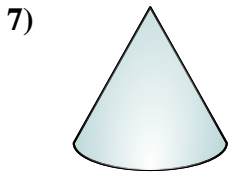
- A. triangular prism
- B. cylinder
- C. rectangular prism
- D. sphere



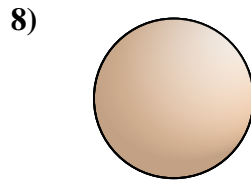
- A. cylinder
- B. cube
- C. rectangular prism
- D. rectangular pyramid



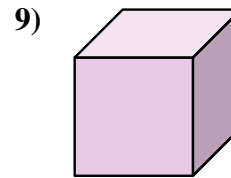
- A. triangular pyramid
- B. rectangular prism
- C. cube
- D. cone



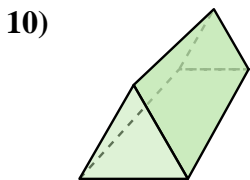
- A. sphere
- B. cylinder
- C. cone
- D. cube



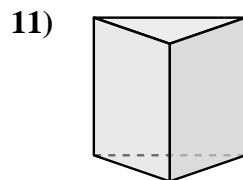
- A. cube
- B. sphere
- C. cone
- D. cylinder



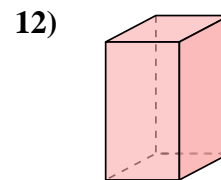
- A. triangular pyramid
- B. cube
- C. triangular prism
- D. rectangular prism



- A. triangular pyramid
- B. cone
- C. triangular prism
- D. sphere



- A. triangular prism
- B. triangular pyramid
- C. cylinder
- D. rectangular prism



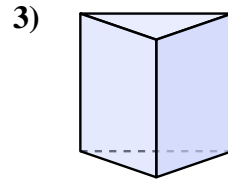
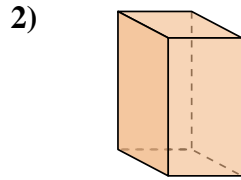
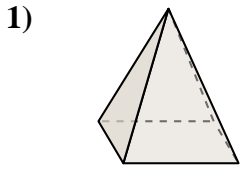
- A. sphere
- B. cube
- C. triangular prism
- D. rectangular prism

- 1. **B**
- 2. **C**
- 3. **D**
- 4. **C**
- 5. **A**
- 6. **B**
- 7. **C**
- 8. **B**
- 9. **B**
- 10. **C**
- 11. **A**
- 12. **D**



Determinar cuál de las opciones describe mejor la figura mostrada.

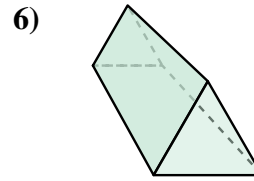
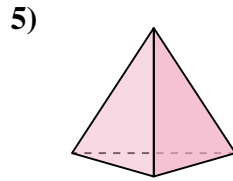
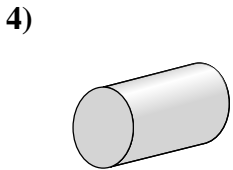
Respuestas



- A. rectangular pyramid
- B. triangular prism
- C. rectangular prism
- D. cube

- A. cone
- B. triangular prism
- C. rectangular pyramid
- D. rectangular prism

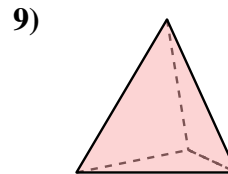
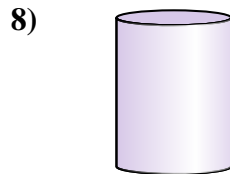
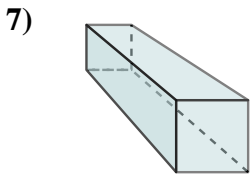
- A. cube
- B. cone
- C. triangular prism
- D. cylinder



- A. rectangular prism
- B. rectangular pyramid
- C. cylinder
- D. sphere

- A. cube
- B. triangular pyramid
- C. rectangular prism
- D. cylinder

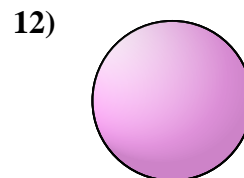
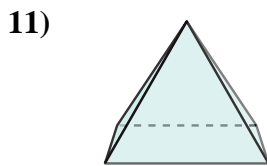
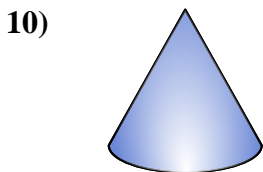
- A. cone
- B. sphere
- C. triangular prism
- D. cylinder



- A. rectangular pyramid
- B. cube
- C. rectangular prism
- D. triangular prism

- A. triangular prism
- B. cube
- C. cylinder
- D. cone

- A. cylinder
- B. cone
- C. triangular pyramid
- D. cube



- A. cylinder
- B. rectangular pyramid
- C. cone
- D. rectangular prism

- A. triangular pyramid
- B. cone
- C. rectangular prism
- D. rectangular pyramid

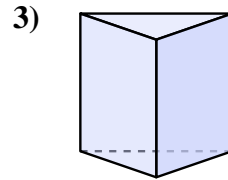
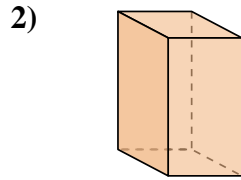
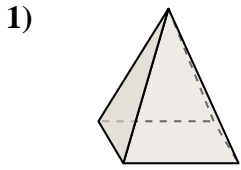
- A. triangular pyramid
- B. rectangular prism
- C. cone
- D. sphere

- 1. _____
- 2. _____
- 3. _____
- 4. _____
- 5. _____
- 6. _____
- 7. _____
- 8. _____
- 9. _____
- 10. _____
- 11. _____
- 12. _____



Determinar cuál de las opciones describe mejor la figura mostrada.

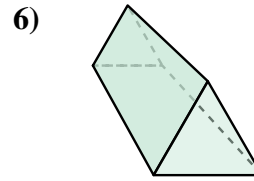
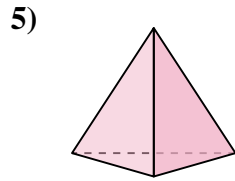
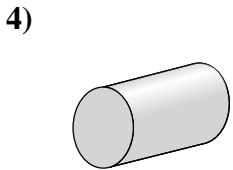
Respuestas



- 1) A. rectangular pyramid
- B. triangular prism
- C. rectangular prism
- D. cube

- 2) A. cone
- B. triangular prism
- C. rectangular pyramid
- D. rectangular prism

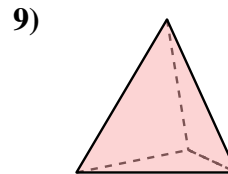
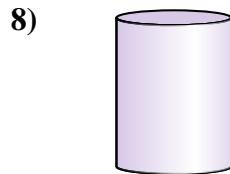
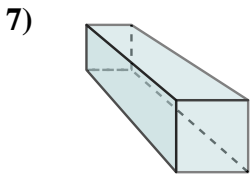
- 3) A. cube
- B. cone
- C. triangular prism
- D. cylinder



- 4) A. rectangular prism
- B. rectangular pyramid
- C. cylinder
- D. sphere

- 5) A. cube
- B. triangular pyramid
- C. rectangular prism
- D. cylinder

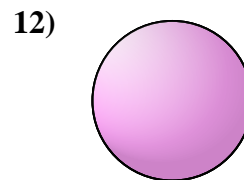
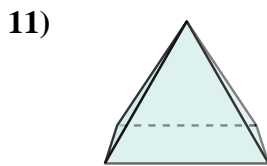
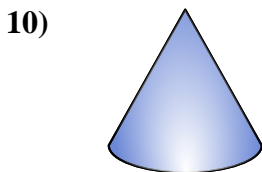
- 6) A. cone
- B. sphere
- C. triangular prism
- D. cylinder



- 7) A. rectangular pyramid
- B. cube
- C. rectangular prism
- D. triangular prism

- 8) A. triangular prism
- B. cube
- C. cylinder
- D. cone

- 9) A. cylinder
- B. cone
- C. triangular pyramid
- D. cube



- 10) A. cylinder
- B. rectangular pyramid
- C. cone
- D. rectangular prism

- 11) A. triangular pyramid
- B. cone
- C. rectangular prism
- D. rectangular pyramid

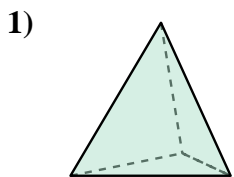
- 12) A. triangular pyramid
- B. rectangular prism
- C. cone
- D. sphere

- 1. **A**
- 2. **D**
- 3. **C**
- 4. **C**
- 5. **B**
- 6. **C**
- 7. **C**
- 8. **C**
- 9. **C**
- 10. **C**
- 11. **D**
- 12. **D**

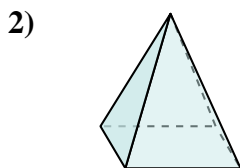


Determinar cuál de las opciones describe mejor la figura mostrada.

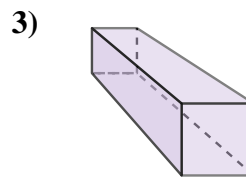
Respuestas



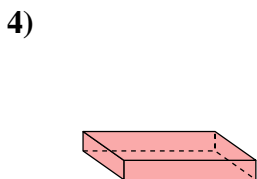
- A. triangular pyramid
- B. triangular prism
- C. rectangular prism
- D. cube



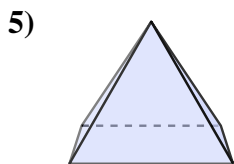
- A. cube
- B. triangular prism
- C. cone
- D. rectangular pyramid



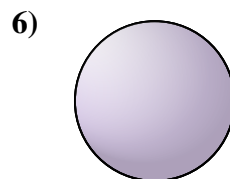
- A. triangular prism
- B. cylinder
- C. rectangular prism
- D. cone



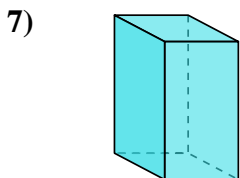
- A. cone
- B. triangular pyramid
- C. cylinder
- D. rectangular prism



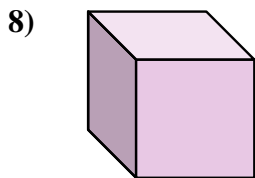
- A. sphere
- B. triangular pyramid
- C. cylinder
- D. rectangular pyramid



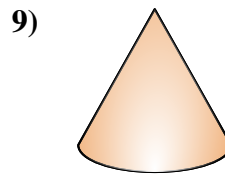
- A. cone
- B. triangular prism
- C. rectangular pyramid
- D. sphere



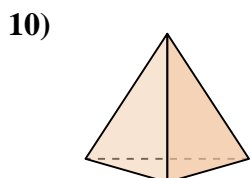
- A. cube
- B. triangular prism
- C. rectangular prism
- D. cone



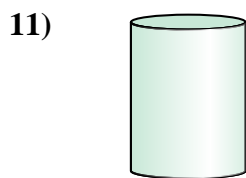
- A. cylinder
- B. cube
- C. rectangular pyramid
- D. triangular pyramid



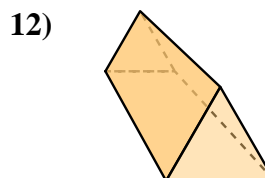
- A. cylinder
- B. rectangular prism
- C. triangular pyramid
- D. cone



- A. cone
- B. triangular pyramid
- C. sphere
- D. triangular prism



- A. cylinder
- B. cube
- C. triangular pyramid
- D. triangular prism



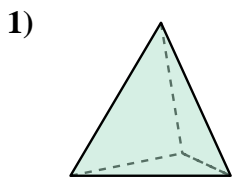
- A. cube
- B. rectangular pyramid
- C. triangular prism
- D. rectangular prism

- 1. _____
- 2. _____
- 3. _____
- 4. _____
- 5. _____
- 6. _____
- 7. _____
- 8. _____
- 9. _____
- 10. _____
- 11. _____
- 12. _____

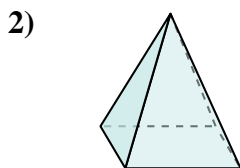


Determinar cuál de las opciones describe mejor la figura mostrada.

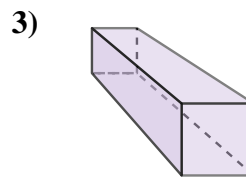
Respuestas



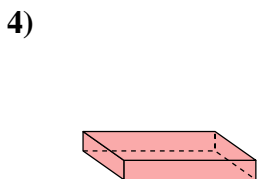
- A. triangular pyramid
- B. triangular prism
- C. rectangular prism
- D. cube



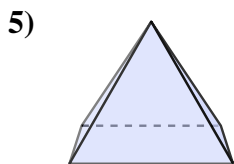
- A. cube
- B. triangular prism
- C. cone
- D. rectangular pyramid



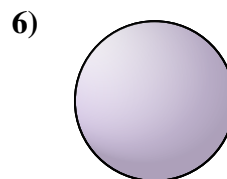
- A. triangular prism
- B. cylinder
- C. rectangular prism
- D. cone



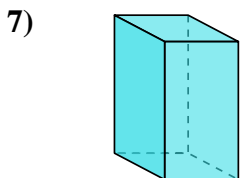
- A. cone
- B. triangular pyramid
- C. cylinder
- D. rectangular prism



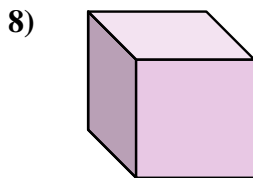
- A. sphere
- B. triangular pyramid
- C. cylinder
- D. rectangular pyramid



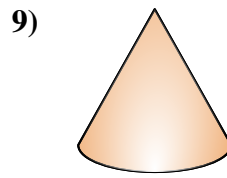
- A. cone
- B. triangular prism
- C. rectangular pyramid
- D. sphere



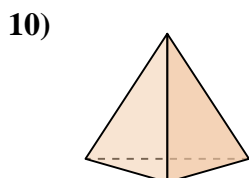
- A. cube
- B. triangular prism
- C. rectangular prism
- D. cone



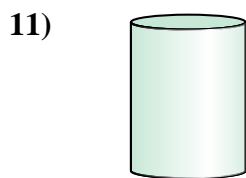
- A. cylinder
- B. cube
- C. rectangular pyramid
- D. triangular pyramid



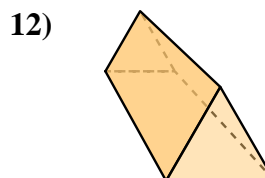
- A. cylinder
- B. rectangular prism
- C. triangular pyramid
- D. cone



- A. cone
- B. triangular pyramid
- C. sphere
- D. triangular prism



- A. cylinder
- B. cube
- C. triangular pyramid
- D. triangular prism



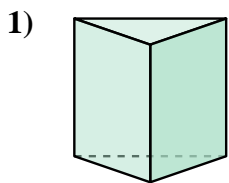
- A. cube
- B. rectangular pyramid
- C. triangular prism
- D. rectangular prism

- 1. **A**
- 2. **D**
- 3. **C**
- 4. **D**
- 5. **D**
- 6. **D**
- 7. **C**
- 8. **B**
- 9. **D**
- 10. **B**
- 11. **A**
- 12. **C**

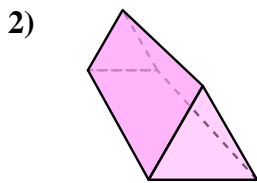


Determinar cuál de las opciones describe mejor la figura mostrada.

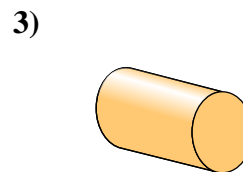
Respuestas



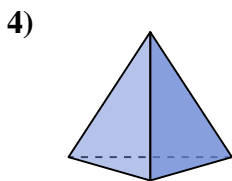
- A. cylinder
- B. cube
- C. triangular pyramid
- D. triangular prism



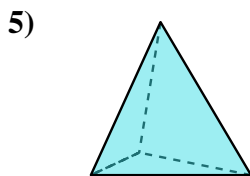
- A. triangular pyramid
- B. triangular prism
- C. cylinder
- D. sphere



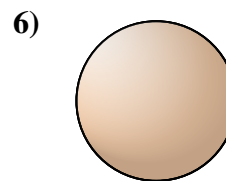
- A. rectangular prism
- B. rectangular pyramid
- C. cylinder
- D. cone



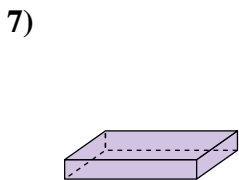
- A. rectangular prism
- B. sphere
- C. triangular pyramid
- D. cone



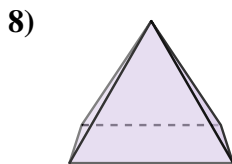
- A. cone
- B. triangular pyramid
- C. rectangular prism
- D. cube



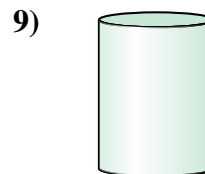
- A. rectangular pyramid
- B. sphere
- C. rectangular prism
- D. cube



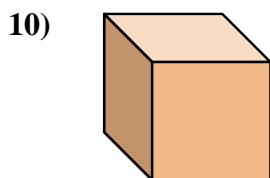
- A. rectangular prism
- B. cone
- C. cube
- D. triangular prism



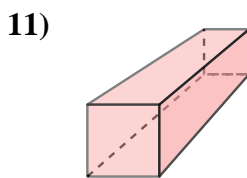
- A. sphere
- B. rectangular pyramid
- C. cylinder
- D. triangular prism



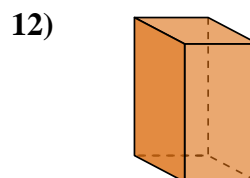
- A. cone
- B. triangular pyramid
- C. sphere
- D. cylinder



- A. rectangular pyramid
- B. sphere
- C. cube
- D. cone



- A. cone
- B. rectangular prism
- C. cube
- D. rectangular pyramid



- A. sphere
- B. rectangular prism
- C. cylinder
- D. cube

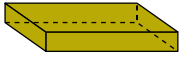
- 1. _____
- 2. _____
- 3. _____
- 4. _____
- 5. _____
- 6. _____
- 7. _____
- 8. _____
- 9. _____
- 10. _____
- 11. _____
- 12. _____



Determinar cuál de las opciones describe mejor la figura mostrada.

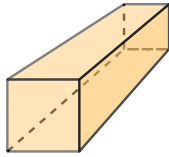
Respuestas

1)



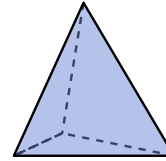
- A. cube
- B. cylinder
- C. triangular prism
- D. rectangular prism

2)



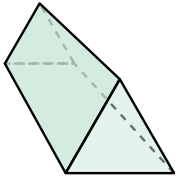
- A. cone
- B. cube
- C. rectangular prism
- D. triangular prism

3)



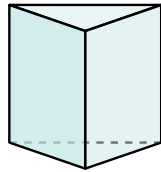
- A. cone
- B. rectangular pyramid
- C. cylinder
- D. triangular pyramid

4)



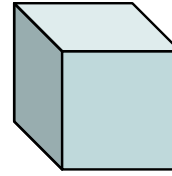
- A. rectangular pyramid
- B. rectangular prism
- C. triangular prism
- D. cube

5)



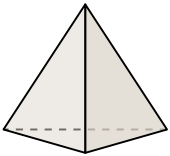
- A. rectangular prism
- B. cube
- C. cone
- D. triangular prism

6)




- A. rectangular pyramid
- B. cone
- C. cylinder
- D. cube

7)



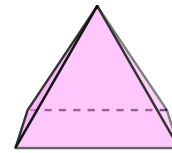
- A. triangular pyramid
- B. cone
- C. rectangular prism
- D. cylinder

8)



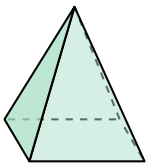
- A. sphere
- B. cylinder
- C. rectangular pyramid
- D. cube

9)



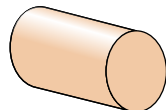
- A. triangular prism
- B. cylinder
- C. rectangular pyramid
- D. cube

10)




- A. rectangular pyramid
- B. rectangular prism
- C. triangular prism
- D. sphere

11)



- A. triangular pyramid
- B. sphere
- C. cylinder
- D. cube

12)



- A. rectangular pyramid
- B. triangular prism
- C. cube
- D. cylinder

- 1. **D**
- 2. **C**
- 3. **D**
- 4. **C**
- 5. **D**
- 6. **D**
- 7. **A**
- 8. **A**
- 9. **C**
- 10. **A**
- 11. **C**
- 12. **D**