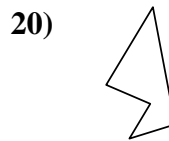
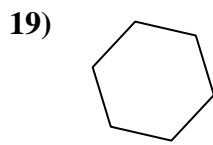
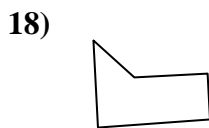
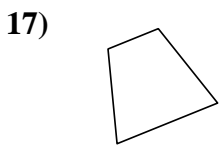
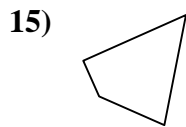
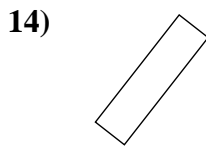
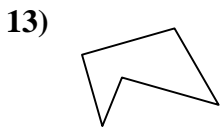
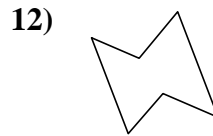
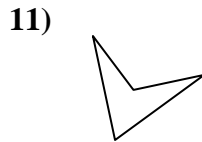
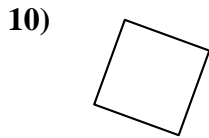
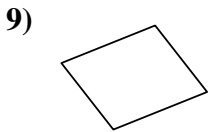
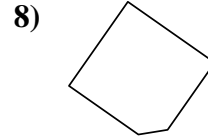
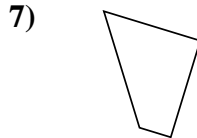
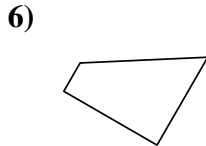
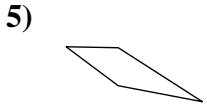
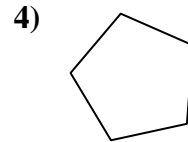
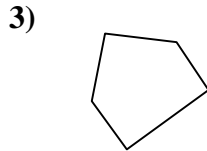
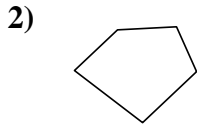
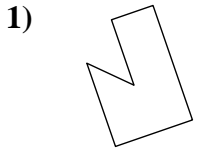




Determinar si la forma mostrada es un cuadrilátero (si) o no (no).

Respuestas

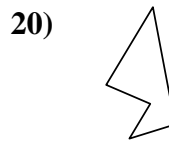
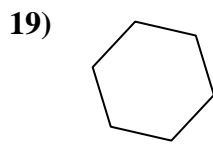
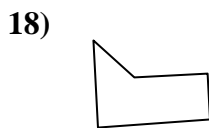
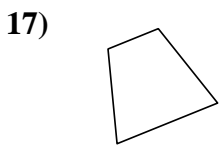
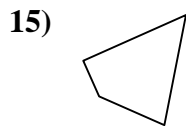
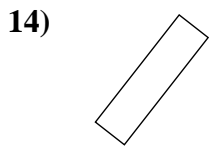
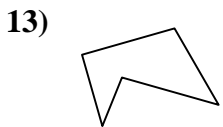
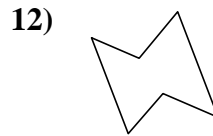
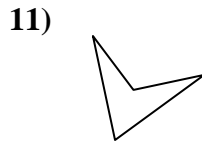
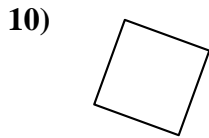
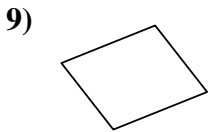
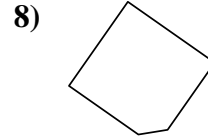
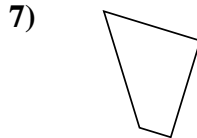
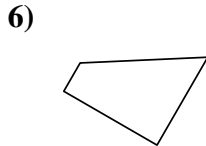
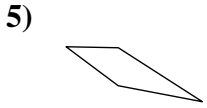
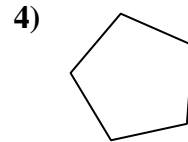
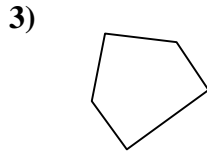
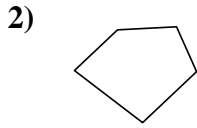
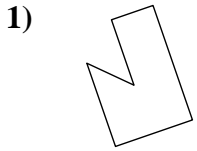


- 1. _____
- 2. _____
- 3. _____
- 4. _____
- 5. _____
- 6. _____
- 7. _____
- 8. _____
- 9. _____
- 10. _____
- 11. _____
- 12. _____
- 13. _____
- 14. _____
- 15. _____
- 16. _____
- 17. _____
- 18. _____
- 19. _____
- 20. _____



Determinar si la forma mostrada es un cuadrilátero (si) o no (no).

Respuestas



1. **no**

2. **no**

3. **no**

4. **no**

5. **si**

6. **si**

7. **si**

8. **no**

9. **si**

10. **si**

11. **si**

12. **no**

13. **no**

14. **si**

15. **si**

16. **si**

17. **si**

18. **no**

19. **no**

20. **no**