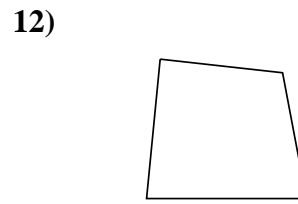
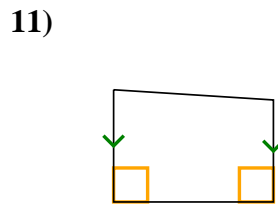
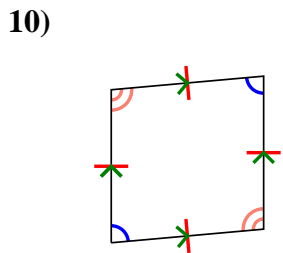
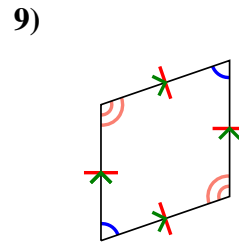
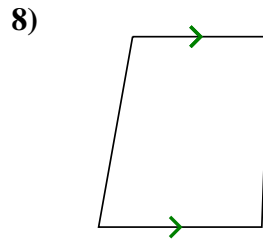
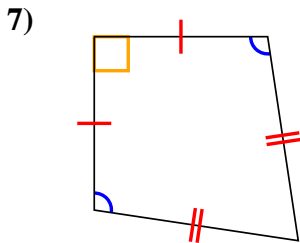
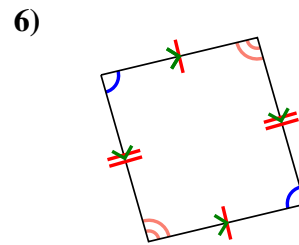
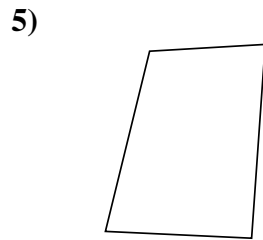
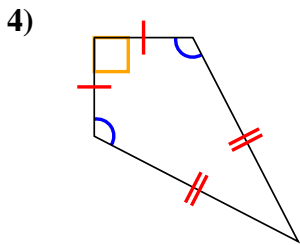
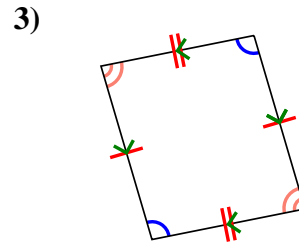
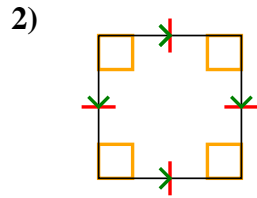
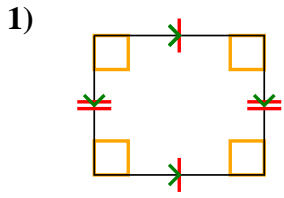




Determina si la figura mostrada es un Cuadrilátero, Cometa, Trapezoide, Paralelogramo, Romboide, Rectángulo o Cuadrado (Puede ser más que una)

Respuestas

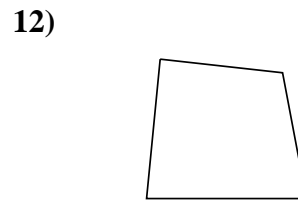
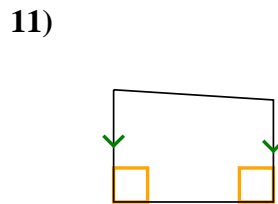
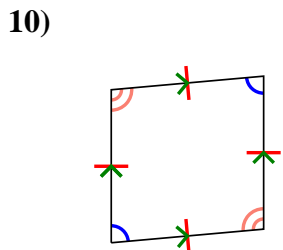
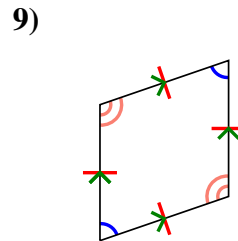
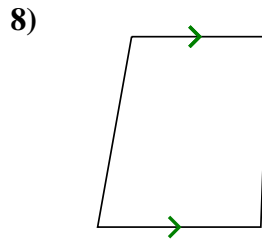
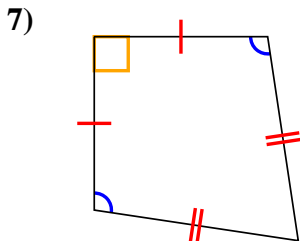
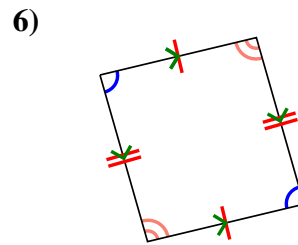
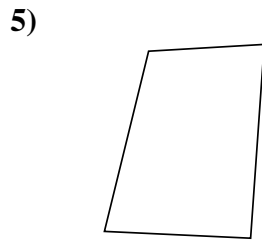
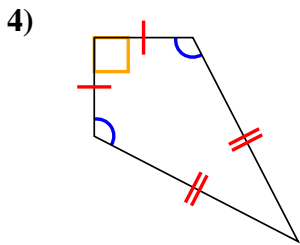
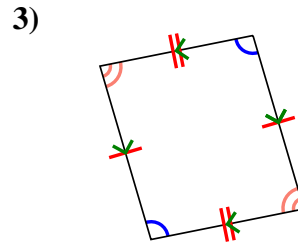
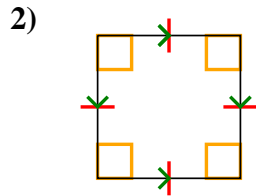
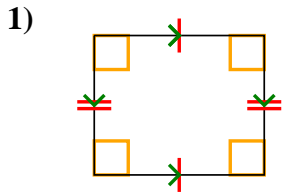


1. _____
2. _____
3. _____
4. _____
5. _____
6. _____
7. _____
8. _____
9. _____
10. _____
11. _____
12. _____



Determina si la figura mostrada es un Cuadrilátero, Cometa, Trapezoide, Paralelogramo, Romboide, Rectángulo o Cuadrado (Puede ser más que una)

Respuestas



1. **Q,P,R**

2. **Q,P,H,R,S**

3. **Q,P**

4. **Q,K**

5. **Q**

6. **Q,P**

7. **Q,K**

8. **Q,T**

9. **Q,P,H**

10. **Q,P,H**

11. **Q,T**

12. **Q**