




Nombre: _____

Resuelve cada problema.


Resuestas

1) 1:30

A.




B.




2) 8:15

A.




B.



3) 1:45

A.




B.




4) 12:45

A.




B.




5) 4:00

A.



B.




6) 10:45

A.




B.




7) 6:00

A.



B.




8) 2:45

A.



B.




9) 4:30

A.




B.




10) 7:15

A.



B.



11) 9:45

A.




B.




12) 8:00

A.



B.



1. _____

2. _____

3. _____

4. _____

5. _____

6. _____

7. _____

8. _____

9. _____

10. _____

11. _____

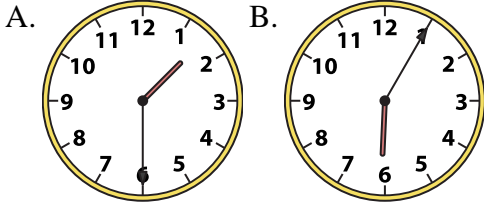
12. _____



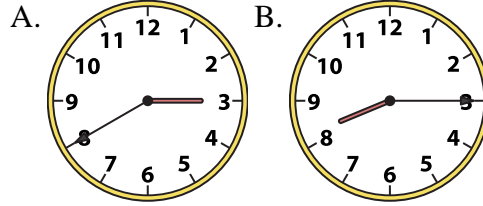
Resuelve cada problema.

Respuestas

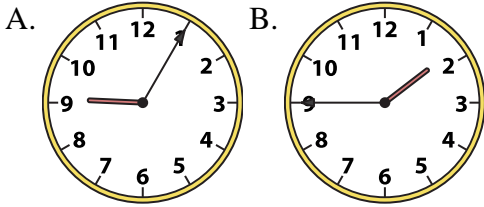
1) 1:30



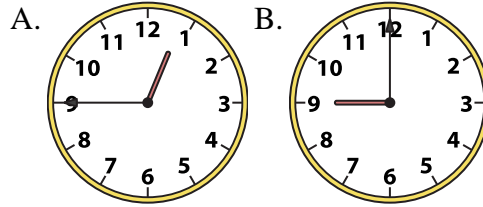
2) 8:15



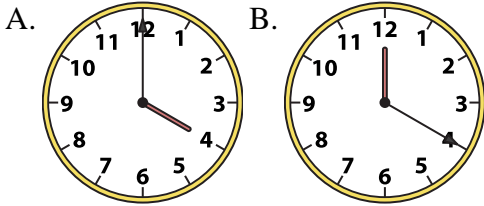
3) 1:45



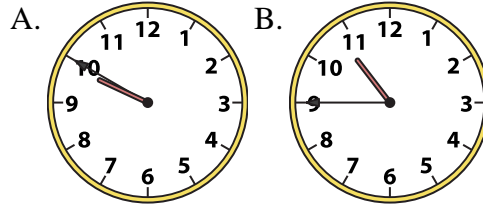
4) 12:45



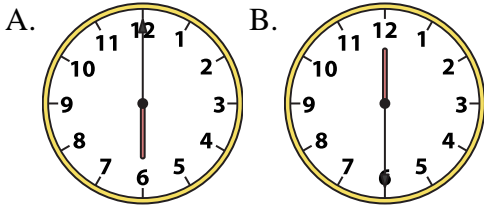
5) 4:00



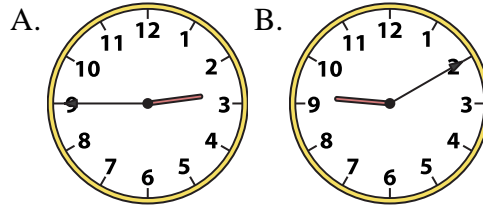
6) 10:45



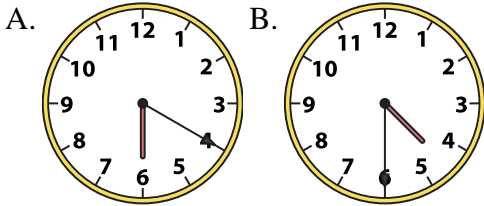
7) 6:00



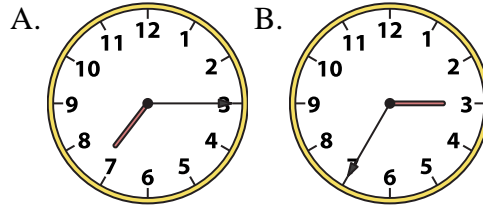
8) 2:45



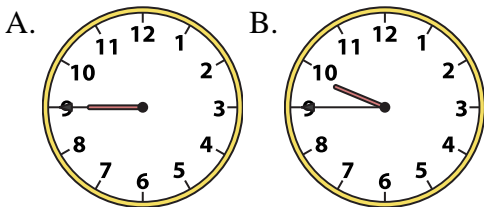
9) 4:30



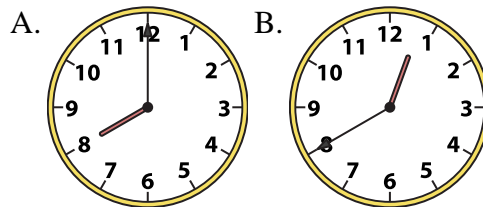
10) 7:15



11) 9:45



12) 8:00

1. **A** 2. **B** 3. **B** 4. **A** 5. **A** 6. **B** 7. **A** 8. **A** 9. **B** 10. **A** 11. **B** 12. **A**