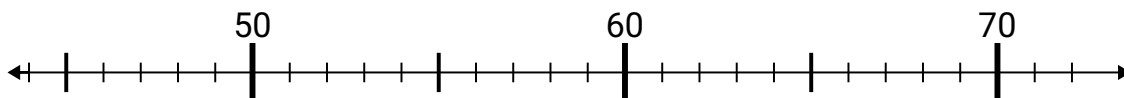




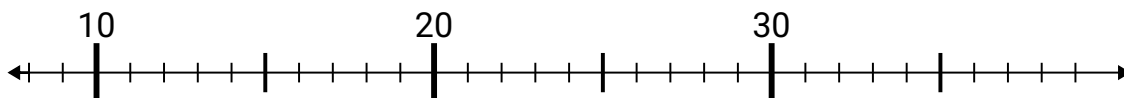
Utilice las rectas numéricas para resolver cada problema.

**Respuestas**

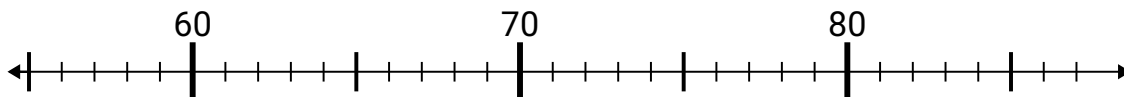
1)  $66 - 11 =$



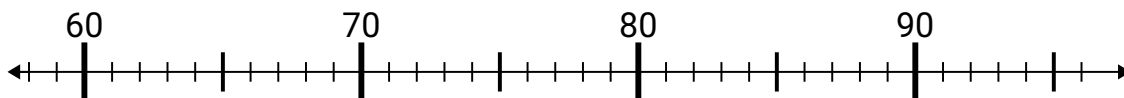
2)  $30 - 22 =$



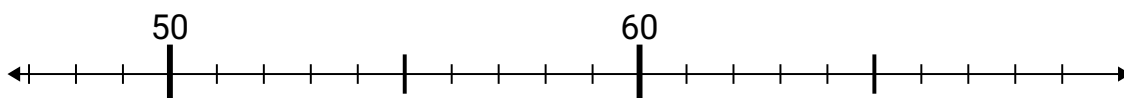
3)  $84 - 19 =$



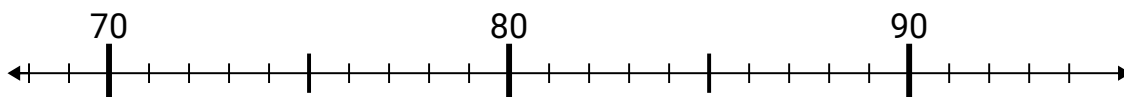
4)  $61 + 25 =$



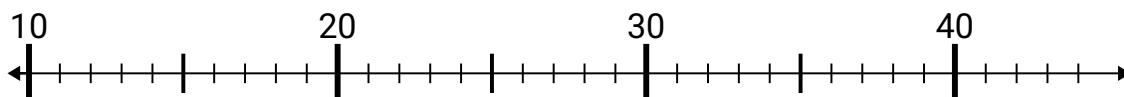
5)  $48 + 7 =$



6)  $78 + 9 =$



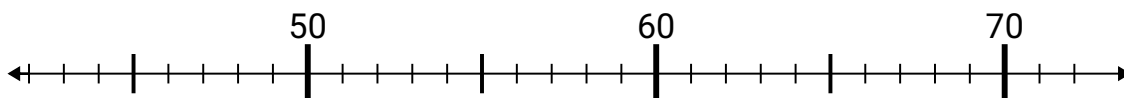
7)  $19 - 2 =$



8)  $38 - 9 =$



9)  $62 - 2 =$



10)  $68 + 16 =$



1. \_\_\_\_\_

2. \_\_\_\_\_

3. \_\_\_\_\_

4. \_\_\_\_\_

5. \_\_\_\_\_

6. \_\_\_\_\_

7. \_\_\_\_\_

8. \_\_\_\_\_

9. \_\_\_\_\_

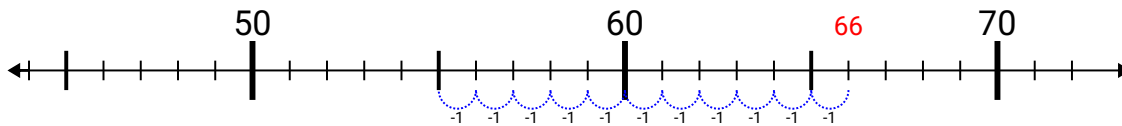
10. \_\_\_\_\_



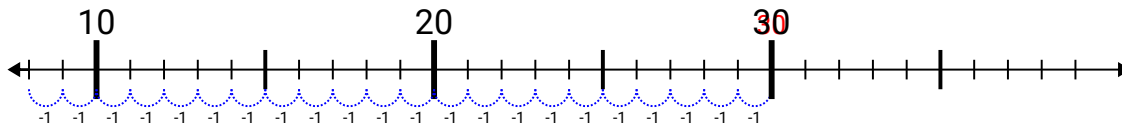
Utilice las rectas numéricas para resolver cada problema.

**Respuestas**

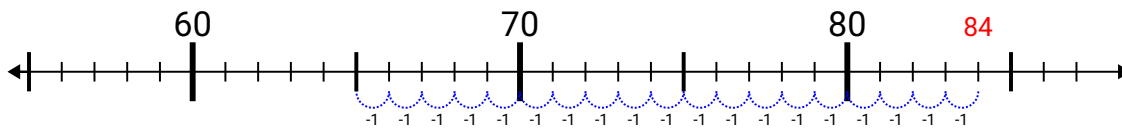
1)  $66 - 11 =$



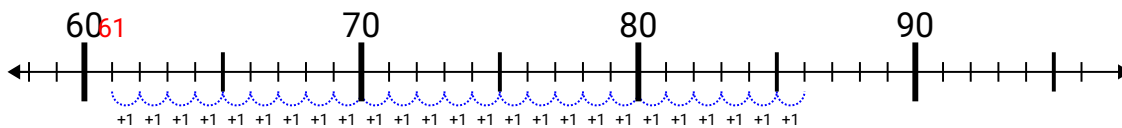
2)  $30 - 22 =$



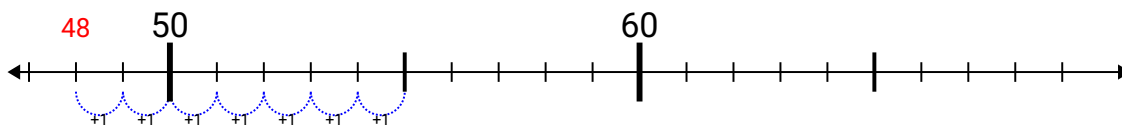
3)  $84 - 19 =$



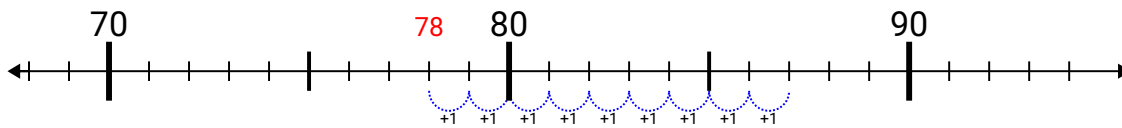
4)  $61 + 25 =$



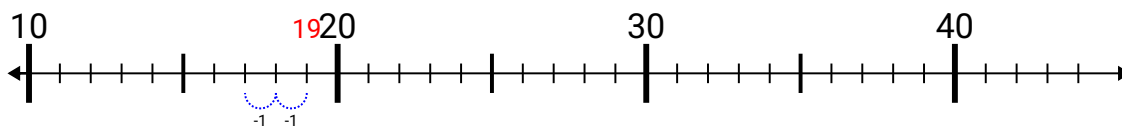
5)  $48 + 7 =$



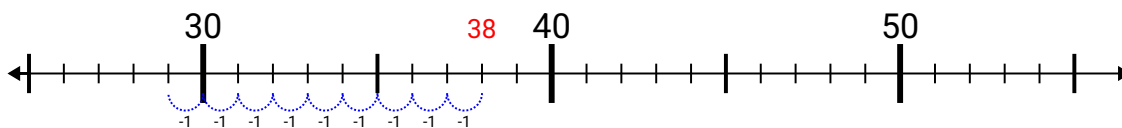
6)  $78 + 9 =$



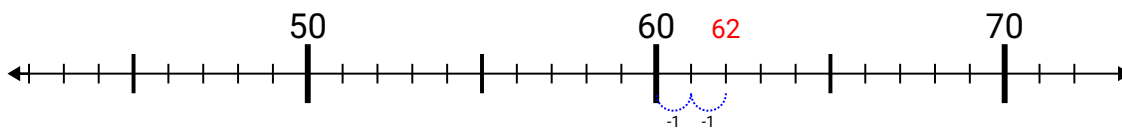
7)  $19 - 2 =$



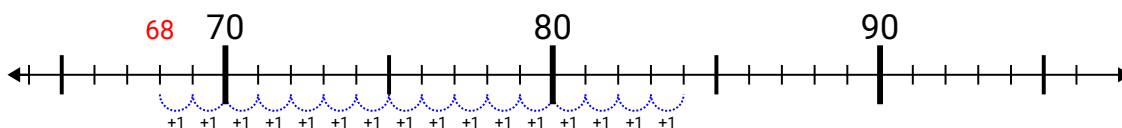
8)  $38 - 9 =$



9)  $62 - 2 =$



10)  $68 + 16 =$



1. 55
2. 8
3. 65
4. 86
5. 55
6. 87
7. 17
8. 29
9. 60
10. 84