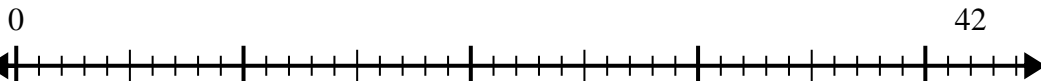


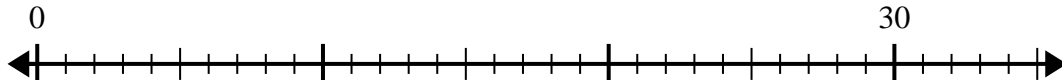


Usa la recta numérica para resolver el problema de división.

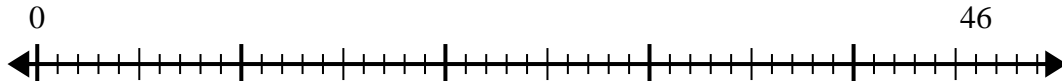
1) $42 \div 5 =$



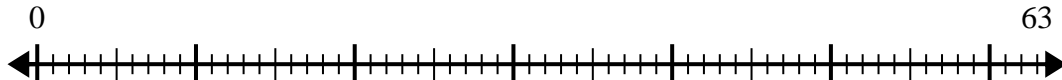
2) $30 \div 4 =$



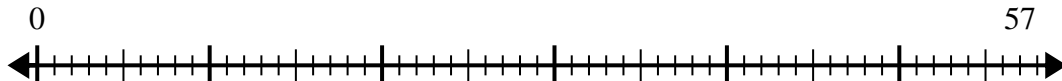
3) $46 \div 6 =$



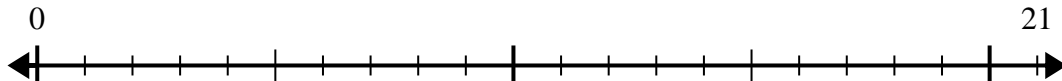
4) $63 \div 8 =$



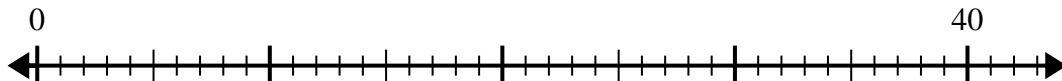
5) $57 \div 7 =$



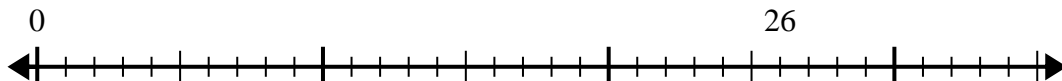
6) $21 \div 5 =$



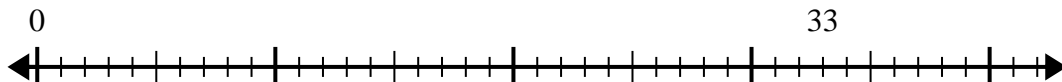
7) $40 \div 7 =$



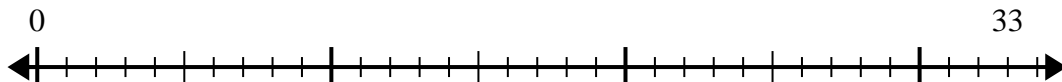
8) $26 \div 8 =$



9) $33 \div 5 =$



10) $33 \div 4 =$



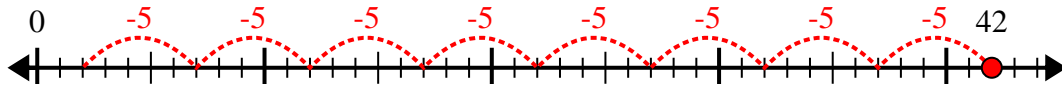
Respuestas

- 1. _____
- 2. _____
- 3. _____
- 4. _____
- 5. _____
- 6. _____
- 7. _____
- 8. _____
- 9. _____
- 10. _____

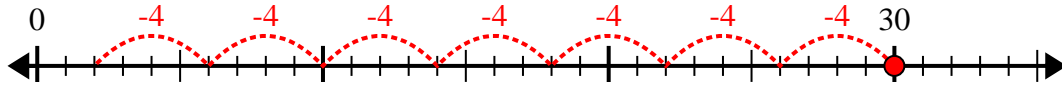


Usa la recta numérica para resolver el problema de división.

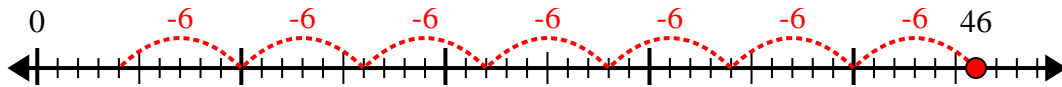
1) $42 \div 5 =$



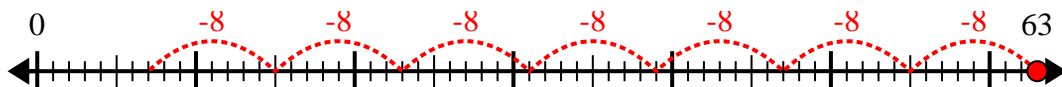
2) $30 \div 4 =$



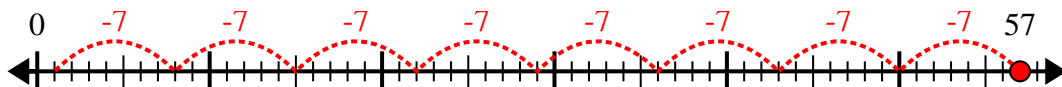
3) $46 \div 6 =$



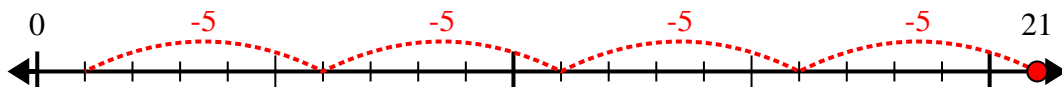
4) $63 \div 8 =$



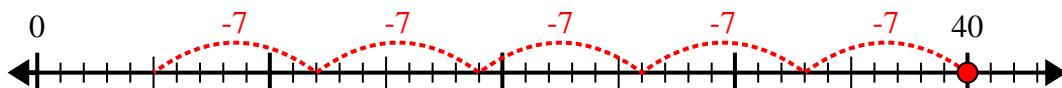
5) $57 \div 7 =$



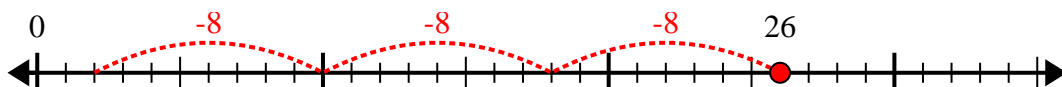
6) $21 \div 5 =$



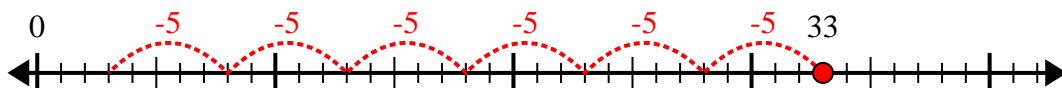
7) $40 \div 7 =$



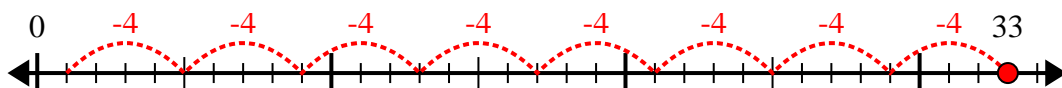
8) $26 \div 8 =$



9) $33 \div 5 =$



10) $33 \div 4 =$



Respuestas

1. 8r2

2. 7r2

3. 7r4

4. 7r7

5. 8r1

6. 4r1

7. 5r5

8. 3r2

9. 6r3

10. 8r1