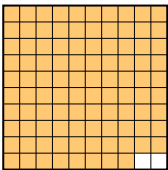
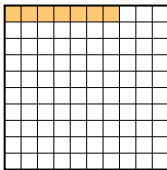

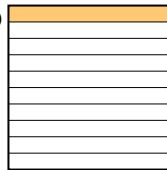




Pon las cajas en orden de la menor a la mayor basado en la cantidad sombreada.



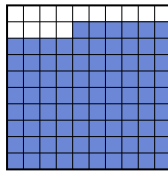
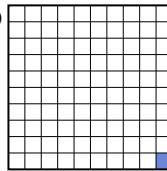
Respuestas

Ej) A  B  C  D 

menor 0.07 - B
0.1 - D
0.4 - C
mayor 0.98 - A


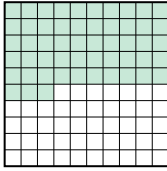

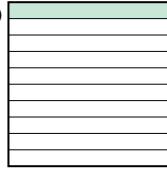
Ej. **B,D,C,A**

1. _____
2. _____
3. _____
4. _____
5. _____
6. _____
7. _____
8. _____

1) A  B  C  D 

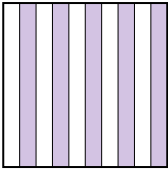
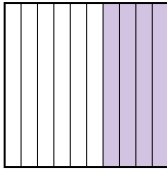
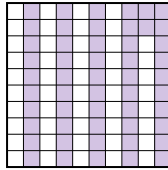
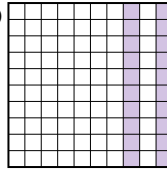
menor _____

mayor _____

2) A  B  C  D 

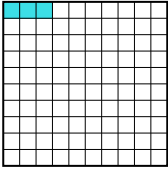
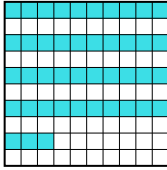


menor _____

mayor _____

3) A  B  C  D 

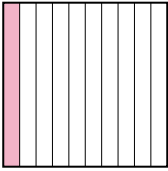
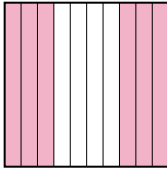
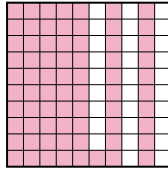
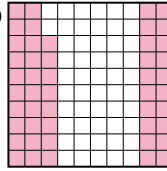
menor _____

mayor _____

4) A  B  C  D 

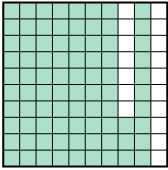
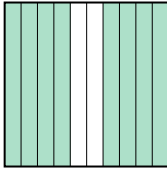
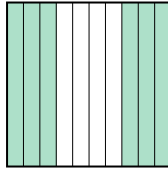
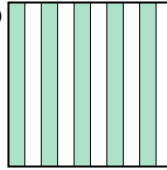
menor _____

mayor _____

5) A  B  C  D 

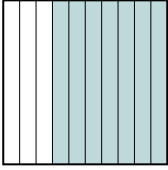
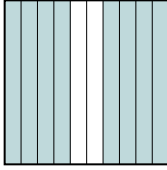
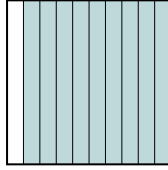
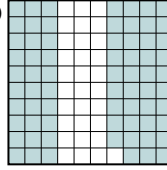
menor _____

mayor _____

6) A  B  C  D 


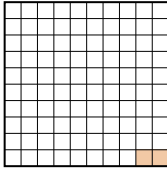
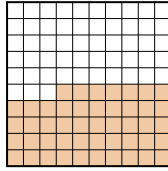
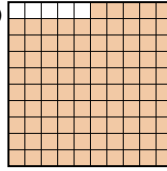
menor _____

mayor _____

7) A  B  C  D 

menor _____

mayor _____

8) A  B  C  D 

menor _____

mayor _____



Pon las cajas en orden de la menor a la mayor basado en la cantidad sombreada.

Ej)	A	B	C	D	menor <u>0.07 - B</u> <u>0.1 - D</u> <u>0.4 - C</u> mayor <u>0.98 - A</u>
1)	A	B	C	D	menor <u>0.01 - D</u> <u>0.3 - A</u> <u>0.86 - C</u> mayor <u>0.9 - B</u>
2)	A	B	C	D	menor <u>0.1 - D</u> <u>0.5 - A</u> <u>0.53 - B</u> mayor <u>0.8 - C</u>
3)	A	B	C	D	menor <u>0.2 - D</u> <u>0.4 - B</u> <u>0.5 - A</u> mayor <u>0.52 - C</u>
4)	A	B	C	D	menor <u>0.03 - A</u> <u>0.2 - C</u> <u>0.43 - B</u> mayor <u>0.9 - D</u>
5)	A	B	C	D	menor <u>0.1 - A</u> <u>0.48 - D</u> <u>0.6 - B</u> mayor <u>0.71 - C</u>
6)	A	B	C	D	menor <u>0.5 - D</u> <u>0.6 - C</u> <u>0.8 - B</u> mayor <u>0.83 - A</u>
7)	A	B	C	D	menor <u>0.69 - D</u> <u>0.7 - A</u> <u>0.8 - B</u> mayor <u>0.9 - C</u>
8)	A	B	C	D	menor <u>0.02 - B</u> <u>0.47 - C</u> <u>0.7 - A</u> mayor <u>0.95 - D</u>

Respuestas

- Ej. B,D,C,A
1. D,A,C,B
2. D,A,B,C
3. D,B,A,C
4. A,C,B,D
5. A,D,B,C
6. D,C,B,A
7. D,A,B,C
8. B,C,A,D