



Determina cual gráfica pertenece a la tabla.

Respuestas

1)

Gente	
	6,000
	10,000
	2,000
	8,000
	3,000

2)

Gente	
	6,000
	8,000
	2,000
	3,000
	10,000

3)

Gente	
	6,000
	10,000
	8,000
	3,000
	2,000

4)

Gente	
	6,000
	10,000
	3,000
	8,000
	2,000

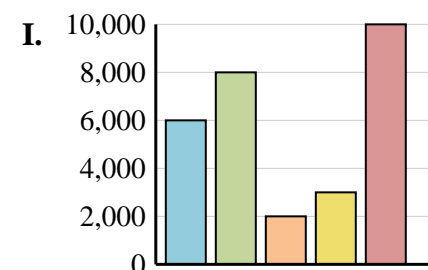
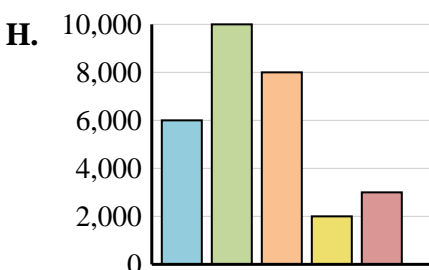
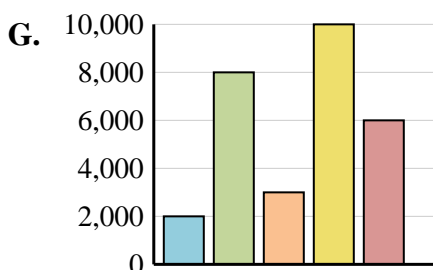
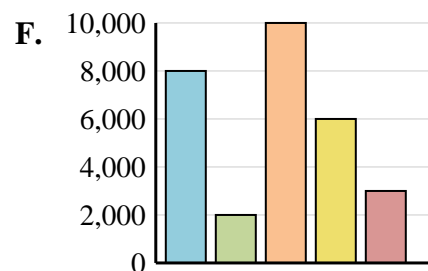
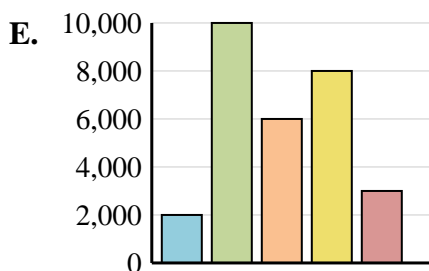
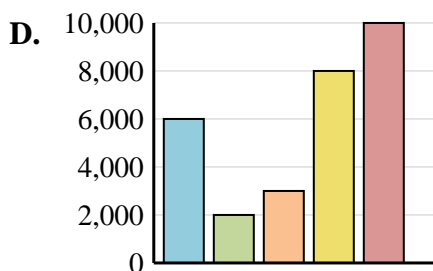
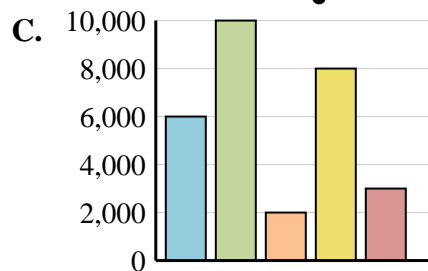
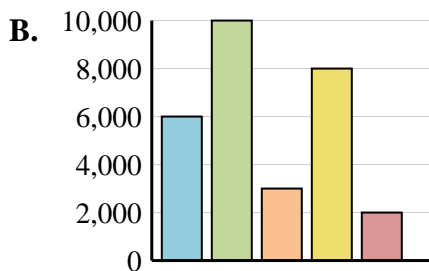
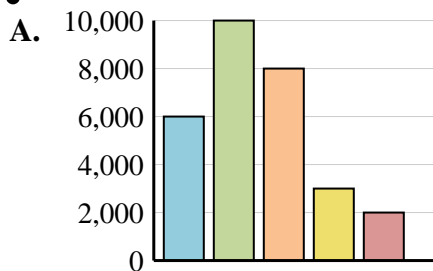
5)

Gente	
	6,000
	2,000
	3,000
	8,000
	10,000

6)

Gente	
	2,000
	10,000
	6,000
	8,000
	3,000

1. _____
2. _____
3. _____
4. _____
5. _____
6. _____





Determina cual gráfica pertenece a la tabla.

Respuestas

1)

Gente	
	6,000
	10,000
	2,000
	8,000
	3,000

2)

Gente	
	6,000
	8,000
	2,000
	3,000
	10,000

3)

Gente	
	6,000
	10,000
	8,000
	3,000
	2,000

4)

Gente	
	6,000
	10,000
	3,000
	8,000
	2,000

5)

Gente	
	6,000
	2,000
	3,000
	8,000
	10,000

6)

Gente	
	2,000
	10,000
	6,000
	8,000
	3,000

- 1. **C**
- 2. **I**
- 3. **A**
- 4. **B**
- 5. **D**
- 6. **E**

