



Determina cual gráfica pertenece a la tabla.

Respuestas

1)

Gente	
	6,000
	5,000
	3,000
	9,000
	1,000

2)

Gente	
	3,000
	6,000
	5,000
	1,000
	9,000

3)

Gente	
	6,000
	1,000
	3,000
	5,000
	9,000

4)

Gente	
	9,000
	6,000
	1,000
	3,000
	5,000

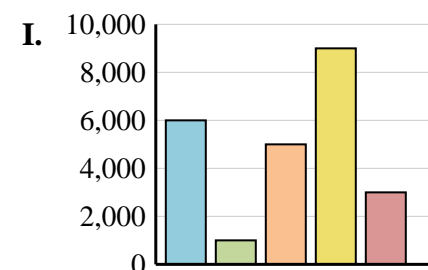
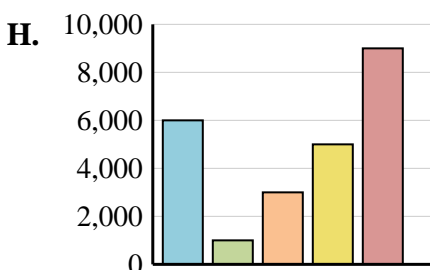
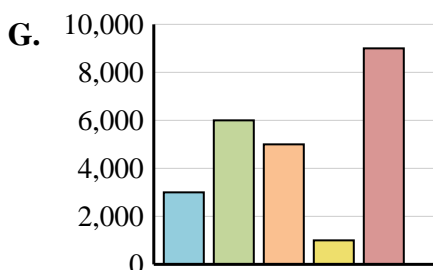
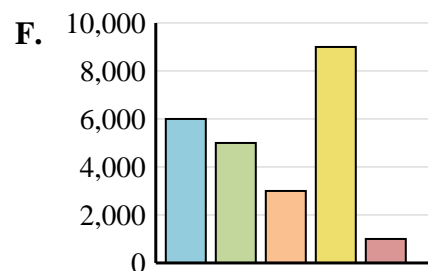
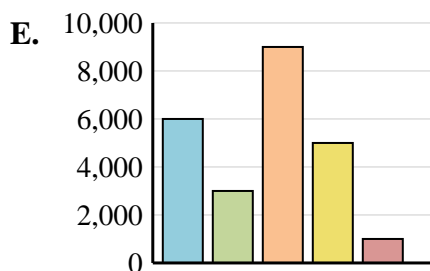
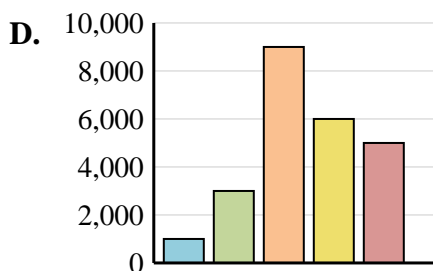
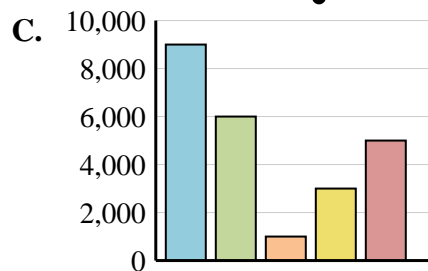
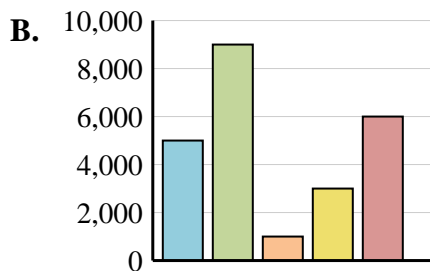
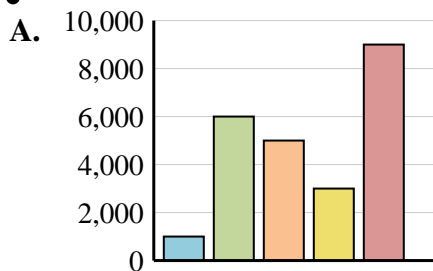
5)

Gente	
	1,000
	3,000
	9,000
	6,000
	5,000

6)

Gente	
	6,000
	3,000
	9,000
	5,000
	1,000

1. \_\_\_\_\_
2. \_\_\_\_\_
3. \_\_\_\_\_
4. \_\_\_\_\_
5. \_\_\_\_\_
6. \_\_\_\_\_





Determina cual gráfica pertenece a la tabla.

Respuestas

1)

Gente	
	6,000
	5,000
	3,000
	9,000
	1,000

2)

Gente	
	3,000
	6,000
	5,000
	1,000
	9,000

3)

Gente	
	6,000
	1,000
	3,000
	5,000
	9,000

4)

Gente	
	9,000
	6,000
	1,000
	3,000
	5,000

5)

Gente	
	1,000
	3,000
	9,000
	6,000
	5,000

6)

Gente	
	6,000
	3,000
	9,000
	5,000
	1,000

1. **F**
2. **G**
3. **H**
4. **C**
5. **D**
6. **E**

