



Determina cual gráfica pertenece a la tabla.

Respuestas

1)

Gente	
	1,000
	2,000
	10,000
	5,000
	4,000

2)

Gente	
	4,000
	10,000
	5,000
	1,000
	2,000

3)

Gente	
	4,000
	10,000
	5,000
	2,000
	1,000

4)

Gente	
	5,000
	10,000
	1,000
	2,000
	4,000

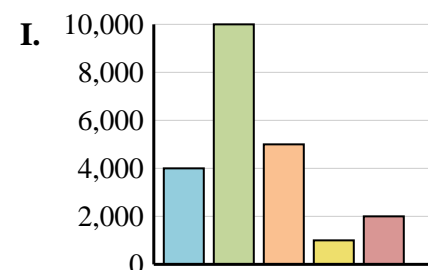
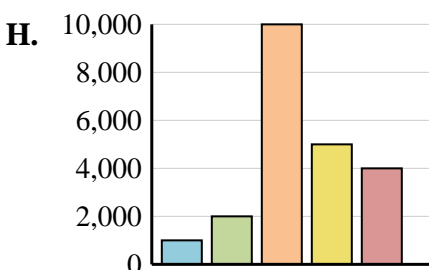
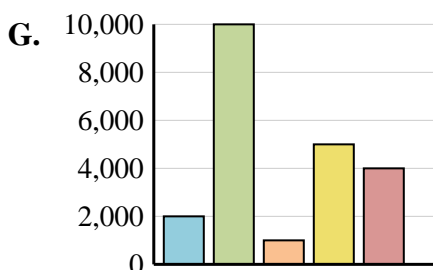
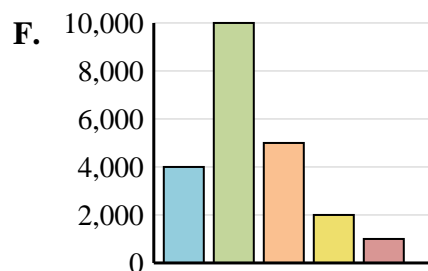
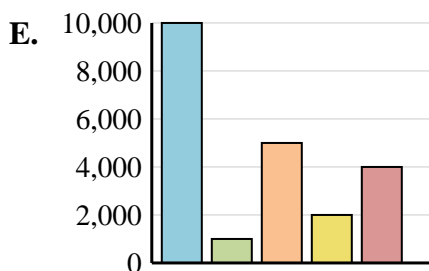
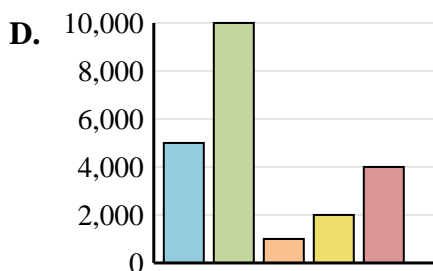
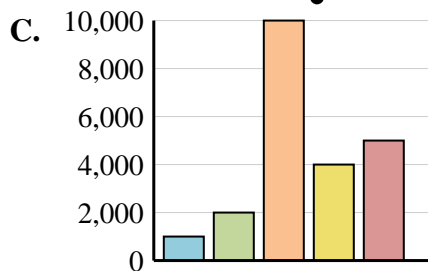
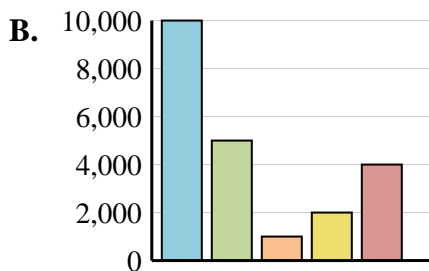
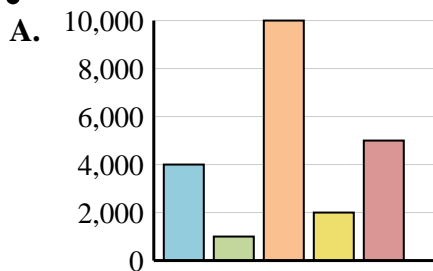
5)

Gente	
	10,000
	5,000
	1,000
	2,000
	4,000

6)

Gente	
	10,000
	1,000
	5,000
	2,000
	4,000

- 1. \_\_\_\_\_
- 2. \_\_\_\_\_
- 3. \_\_\_\_\_
- 4. \_\_\_\_\_
- 5. \_\_\_\_\_
- 6. \_\_\_\_\_





Determina cual gráfica pertenece a la tabla.

Respuestas

1)

Gente	
	1,000
	2,000
	10,000
	5,000
	4,000

2)

Gente	
	4,000
	10,000
	5,000
	1,000
	2,000

3)

Gente	
	4,000
	10,000
	5,000
	2,000
	1,000

4)

Gente	
	5,000
	10,000
	1,000
	2,000
	4,000

5)

Gente	
	10,000
	5,000
	1,000
	2,000
	4,000

6)

Gente	
	10,000
	1,000
	5,000
	2,000
	4,000

- 1.     **H**
- 2.     **I**
- 3.     **F**
- 4.     **D**
- 5.     **B**
- 6.     **E**

