



Determina cual gráfica pertenece a la tabla.

Respuestas

1)

Gente	
	6,000
	9,000
	8,000
	4,000
	7,000

2)

Gente	
	9,000
	8,000
	4,000
	7,000
	6,000

3)

Gente	
	4,000
	9,000
	8,000
	6,000
	7,000

4)

Gente	
	8,000
	7,000
	4,000
	6,000
	9,000

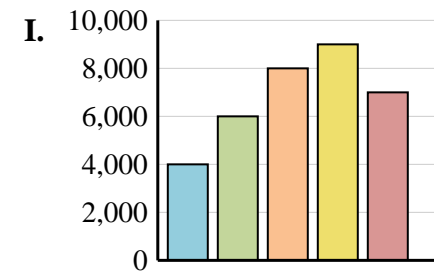
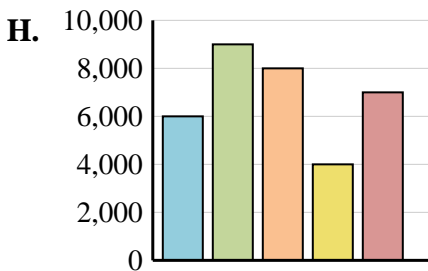
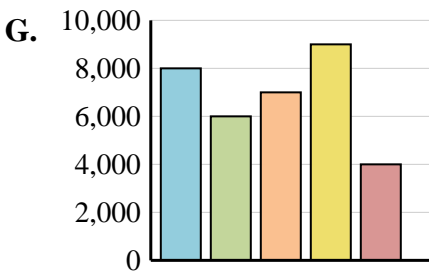
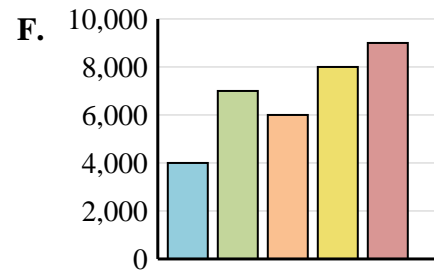
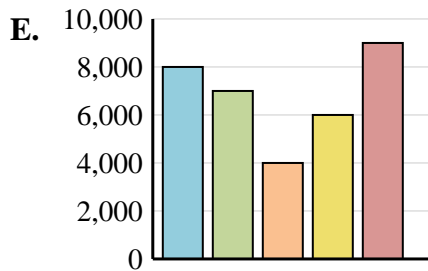
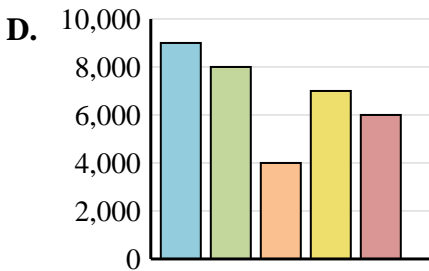
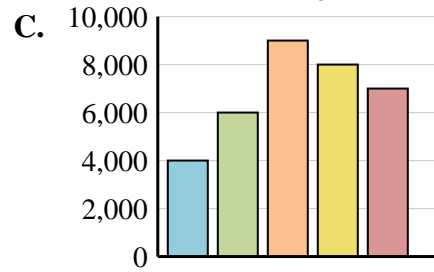
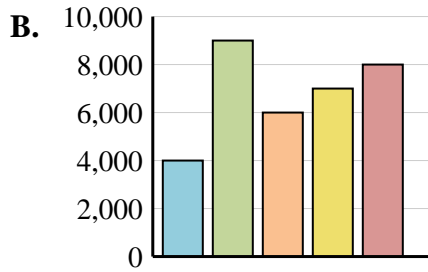
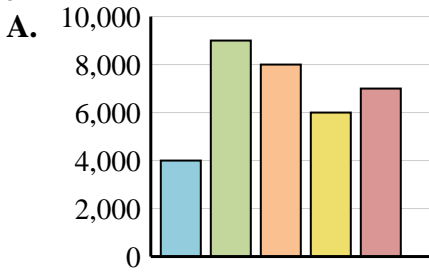
5)

Gente	
	8,000
	6,000
	7,000
	9,000
	4,000

6)

Gente	
	4,000
	9,000
	6,000
	7,000
	8,000

1. _____
2. _____
3. _____
4. _____
5. _____
6. _____





Determina cual gráfica pertenece a la tabla.

Respuestas

1)

Gente	
	6,000
	9,000
	8,000
	4,000
	7,000

2)

Gente	
	9,000
	8,000
	4,000
	7,000
	6,000

3)

Gente	
	4,000
	9,000
	8,000
	6,000
	7,000

4)

Gente	
	8,000
	7,000
	4,000
	6,000
	9,000

5)

Gente	
	8,000
	6,000
	7,000
	9,000
	4,000

6)

Gente	
	4,000
	9,000
	6,000
	7,000
	8,000

- 1. **H**
- 2. **D**
- 3. **A**
- 4. **E**
- 5. **G**
- 6. **B**

