



Determina cual gráfica pertenece a la tabla.

Respuestas

1)

| Gente | |
|-------|--------|
| | 1,000 |
| | 6,000 |
| | 3,000 |
| | 9,000 |
| | 10,000 |

2)

| Gente | |
|-------|--------|
| | 10,000 |
| | 3,000 |
| | 1,000 |
| | 6,000 |
| | 9,000 |

3)

| Gente | |
|-------|--------|
| | 10,000 |
| | 1,000 |
| | 6,000 |
| | 9,000 |
| | 3,000 |

4)

| Gente | |
|-------|--------|
| | 10,000 |
| | 6,000 |
| | 3,000 |
| | 1,000 |
| | 9,000 |

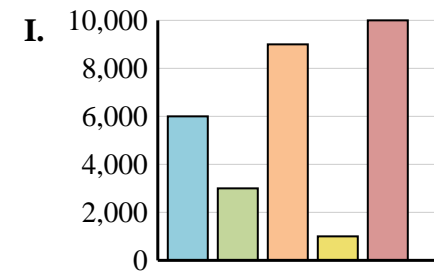
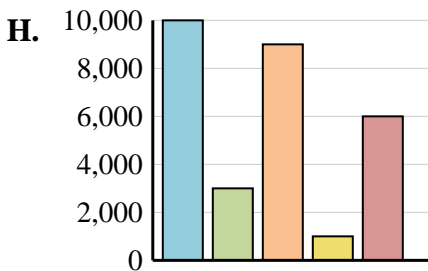
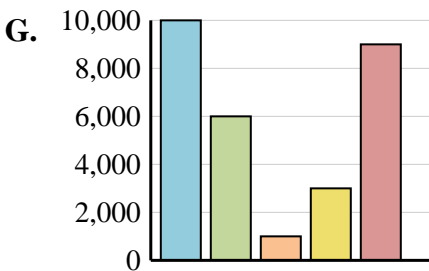
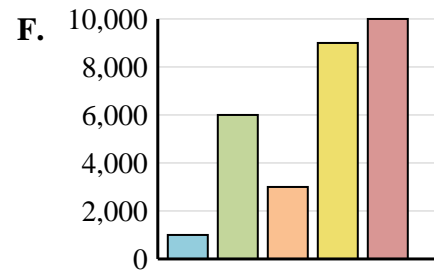
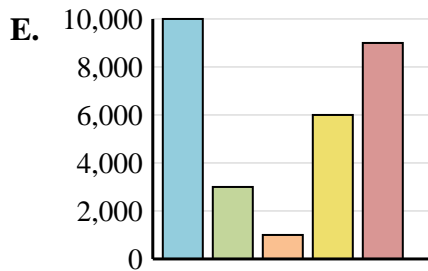
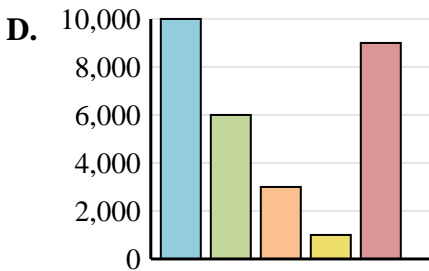
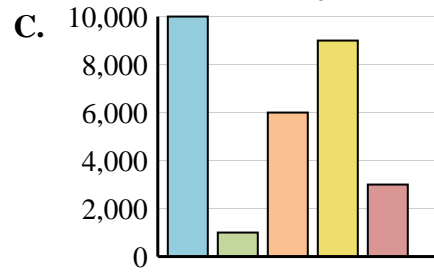
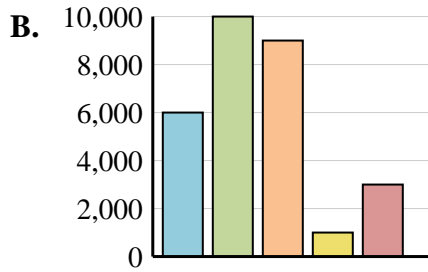
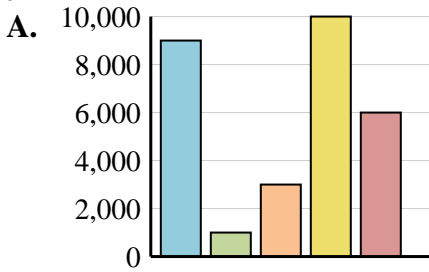
5)

| Gente | |
|-------|--------|
| | 10,000 |
| | 6,000 |
| | 1,000 |
| | 3,000 |
| | 9,000 |

6)

| Gente | |
|-------|--------|
| | 10,000 |
| | 3,000 |
| | 9,000 |
| | 1,000 |
| | 6,000 |

1. _____
2. _____
3. _____
4. _____
5. _____
6. _____





Determina cual gráfica pertenece a la tabla.

Respuestas

1)

| Gente | |
|-------|--------|
| | 1,000 |
| | 6,000 |
| | 3,000 |
| | 9,000 |
| | 10,000 |

2)

| Gente | |
|-------|--------|
| | 10,000 |
| | 3,000 |
| | 1,000 |
| | 6,000 |
| | 9,000 |

3)

| Gente | |
|-------|--------|
| | 10,000 |
| | 1,000 |
| | 6,000 |
| | 9,000 |
| | 3,000 |

4)

| Gente | |
|-------|--------|
| | 10,000 |
| | 6,000 |
| | 3,000 |
| | 1,000 |
| | 9,000 |

5)

| Gente | |
|-------|--------|
| | 10,000 |
| | 6,000 |
| | 1,000 |
| | 3,000 |
| | 9,000 |

6)

| Gente | |
|-------|--------|
| | 10,000 |
| | 3,000 |
| | 9,000 |
| | 1,000 |
| | 6,000 |

- 1. **F**
- 2. **E**
- 3. **C**
- 4. **D**
- 5. **G**
- 6. **H**

