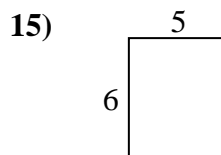
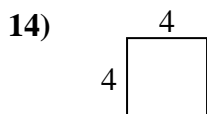
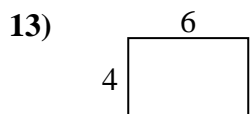
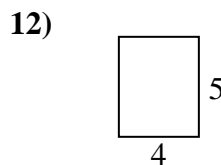
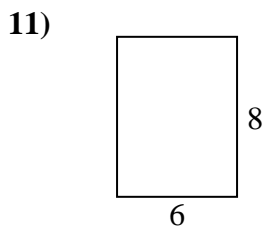
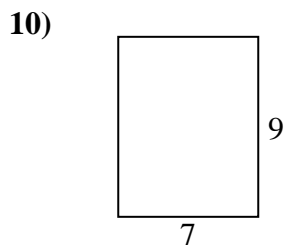
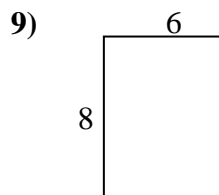
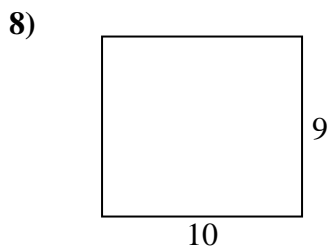
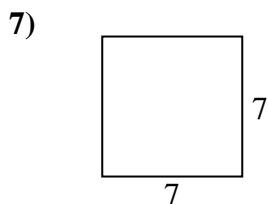
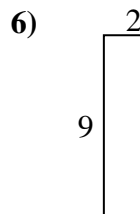
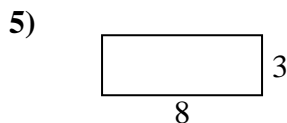
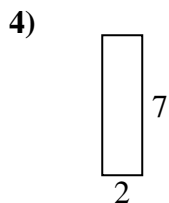
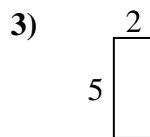
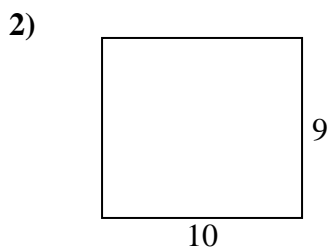
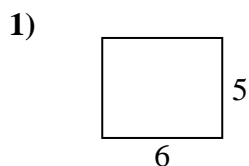




Encuentra el perímetro de cada figura. Cada figura está en pulgadas. No a escala.

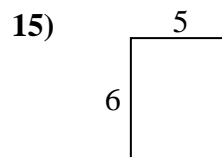
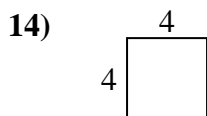
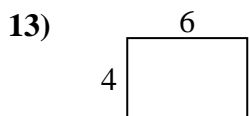
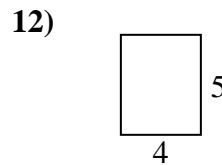
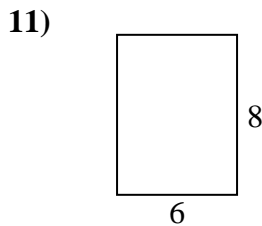
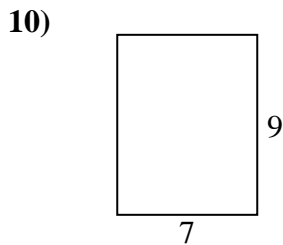
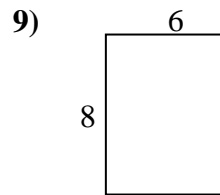
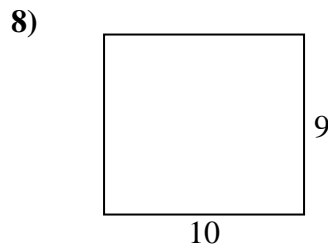
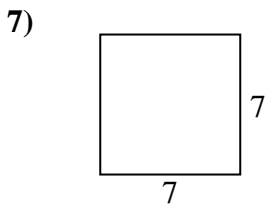
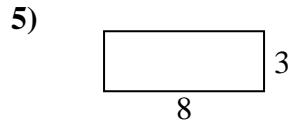
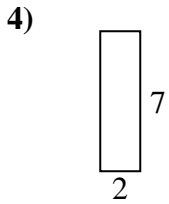
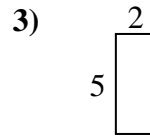
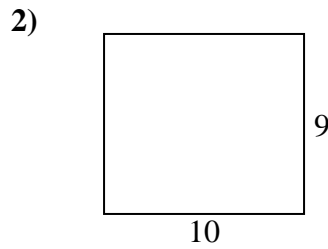
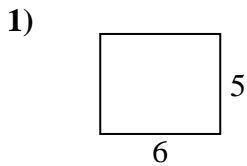


Respuestas

1. _____
2. _____
3. _____
4. _____
5. _____
6. _____
7. _____
8. _____
9. _____
10. _____
11. _____
12. _____
13. _____
14. _____
15. _____



Encuentra el perímetro de cada figura. Cada figura está en pulgadas. No a escala.



Respuestas

| | | |
|-----|-----------|-----------|
| 1. | <u>22</u> | <u>30</u> |
| 2. | <u>38</u> | <u>90</u> |
| 3. | <u>14</u> | <u>10</u> |
| 4. | <u>18</u> | <u>14</u> |
| 5. | <u>22</u> | <u>24</u> |
| 6. | <u>22</u> | <u>18</u> |
| 7. | <u>28</u> | <u>49</u> |
| 8. | <u>38</u> | <u>90</u> |
| 9. | <u>28</u> | <u>48</u> |
| 10. | <u>32</u> | <u>63</u> |
| 11. | <u>28</u> | <u>48</u> |
| 12. | <u>18</u> | <u>20</u> |
| 13. | <u>20</u> | <u>24</u> |
| 14. | <u>16</u> | <u>16</u> |
| 15. | <u>22</u> | <u>30</u> |