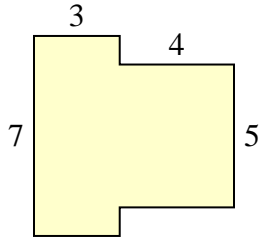




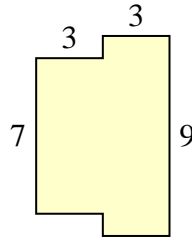
Encuentra el área total de cada figura. La medida está en milímetros (mm). No a escala.

**Respuestas**

1)



2)



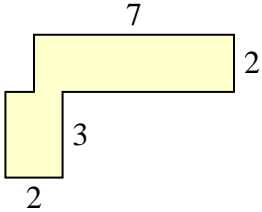
1. \_\_\_\_\_

2. \_\_\_\_\_

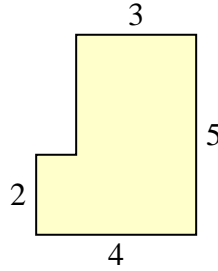
3. \_\_\_\_\_

4. \_\_\_\_\_

3)



4)



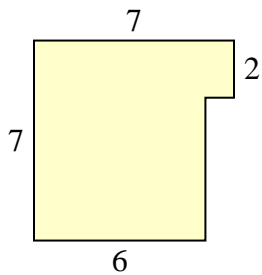
5. \_\_\_\_\_

6. \_\_\_\_\_

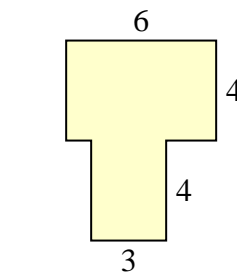
7. \_\_\_\_\_

8. \_\_\_\_\_

5)



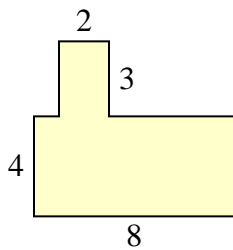
6)



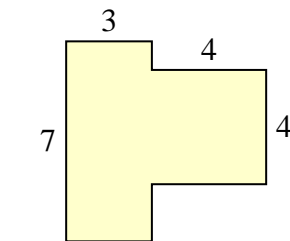
9. \_\_\_\_\_

10. \_\_\_\_\_

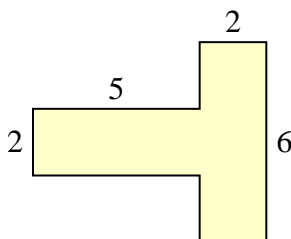
7)



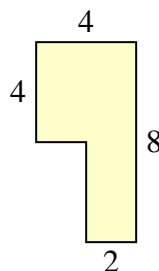
8)



9)

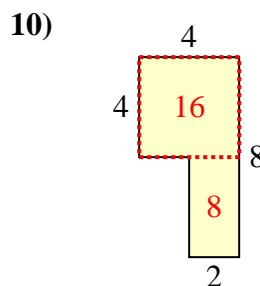
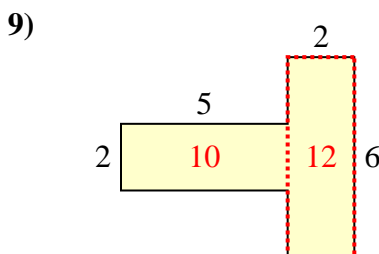
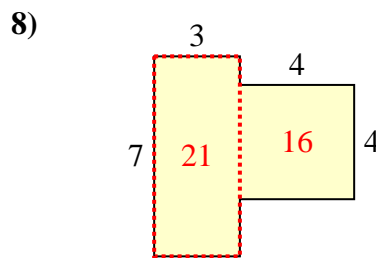
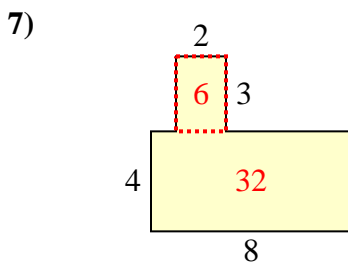
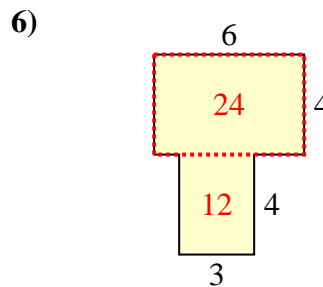
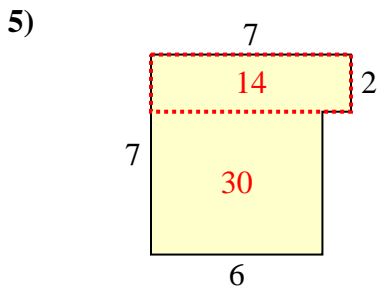
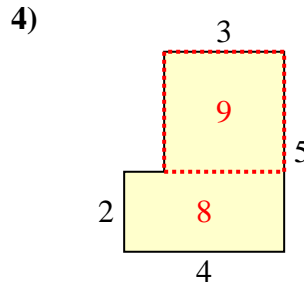
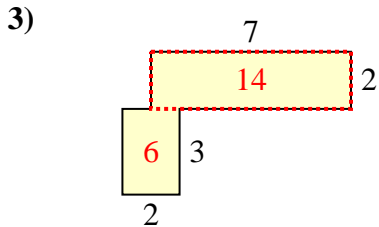
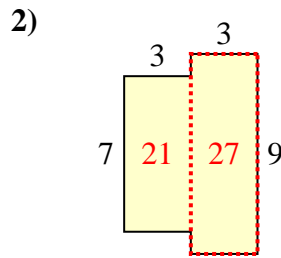
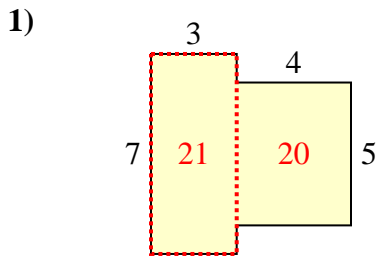


10)





Encuentra el área total de cada figura. La medida está en milímetros (mm). No a escala.



**Respuestas**

1. 41 mm<sup>2</sup>
2. 48 mm<sup>2</sup>
3. 20 mm<sup>2</sup>
4. 17 mm<sup>2</sup>
5. 44 mm<sup>2</sup>
6. 36 mm<sup>2</sup>
7. 38 mm<sup>2</sup>
8. 37 mm<sup>2</sup>
9. 22 mm<sup>2</sup>
10. 24 mm<sup>2</sup>