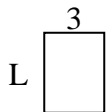




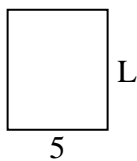
Determina el valor de 'L'. Las longitudes están en cm (no a escala).

Respuestas

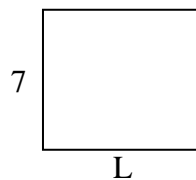
1) perímetro = 14



2) perímetro = 22



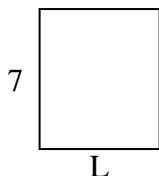
3) perímetro = 30



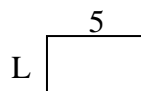
4) perímetro = 24



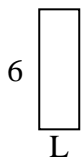
5) perímetro = 26




6) perímetro = 16




7) perímetro = 16



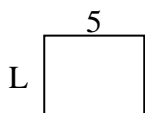
8) perímetro = 32



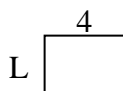
9) perímetro = 26




10) perímetro = 18



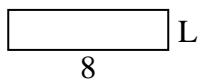
11) perímetro = 14



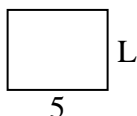
12) perímetro = 24



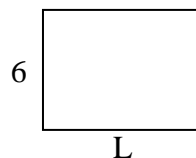
13) perímetro = 20



14) perímetro = 18



15) perímetro = 28

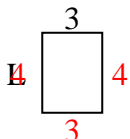


1. _____
2. _____
3. _____
4. _____
5. _____
6. _____
7. _____
8. _____
9. _____
10. _____
11. _____
12. _____
13. _____
14. _____
15. _____

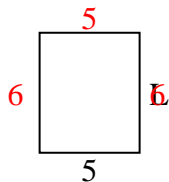


Determina el valor de 'L'. Las longitudes están en cm (no a escala).

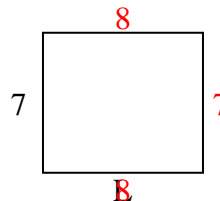
1) perímetro = 14



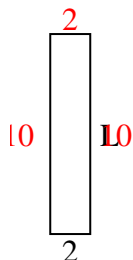
2) perímetro = 22



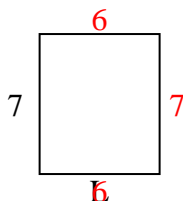
3) perímetro = 30



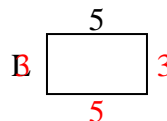
4) perímetro = 24



5) perímetro = 26



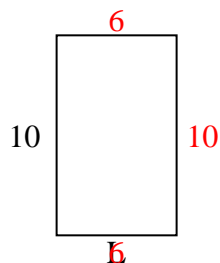
6) perímetro = 16



7) perímetro = 16



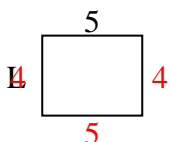
8) perímetro = 32



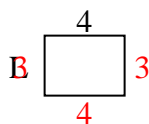
9) perímetro = 26



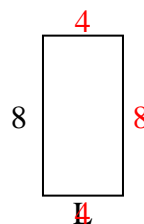
10) perímetro = 18



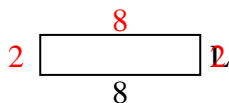
11) perímetro = 14



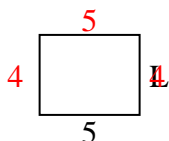
12) perímetro = 24



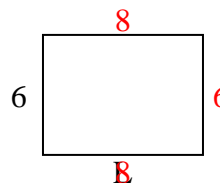
13) perímetro = 20



14) perímetro = 18



15) perímetro = 28

**Respuestas**1. 4 cm2. 6 cm3. 8 cm4. 10 cm5. 6 cm6. 3 cm7. 2 cm8. 6 cm9. 4 cm10. 4 cm11. 3 cm12. 4 cm13. 2 cm14. 4 cm15. 8 cm