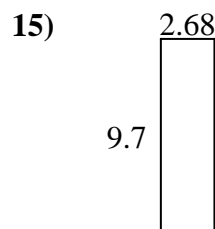
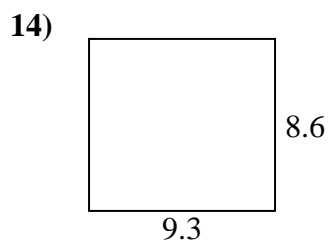
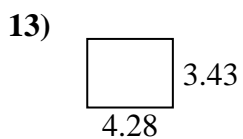
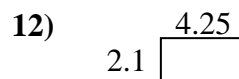
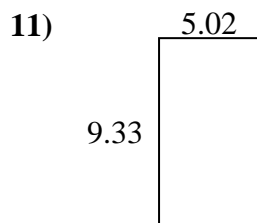
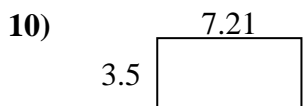
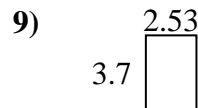
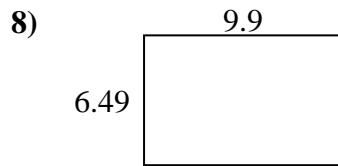
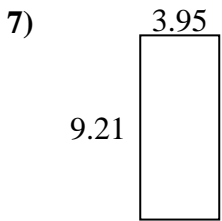
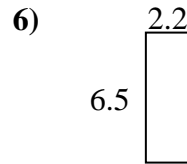
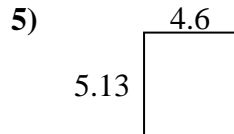
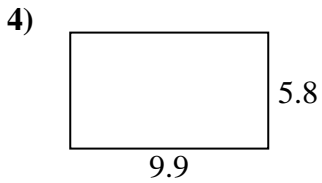
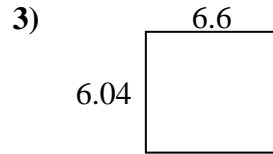
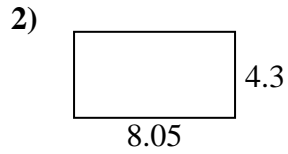
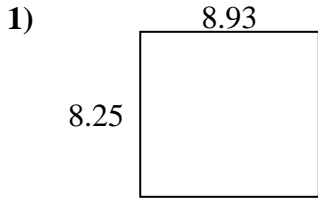




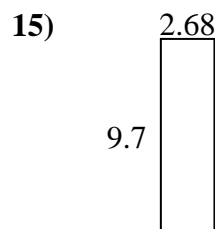
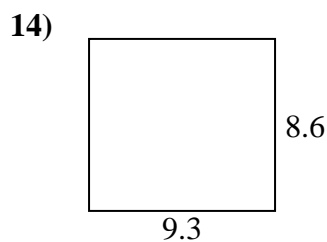
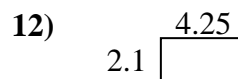
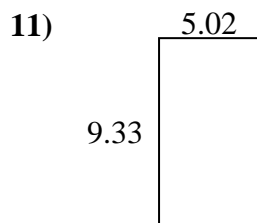
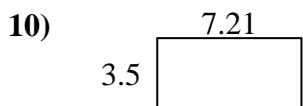
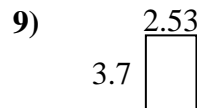
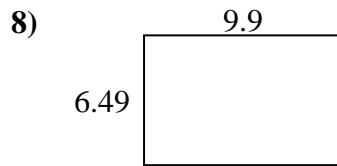
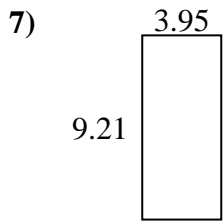
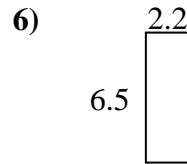
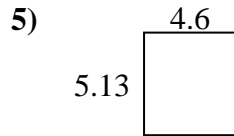
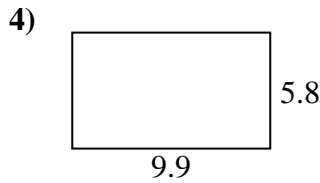
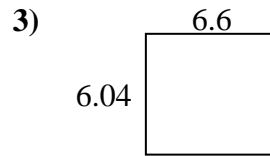
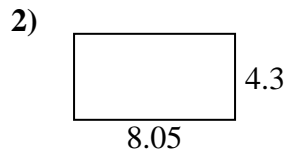
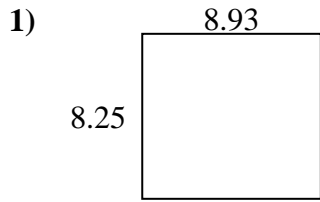
Encuentra el perímetro y el área de cada figura. Responde con la décima más cercana.

Respuestas

1. _____
2. _____
3. _____
4. _____
5. _____
6. _____
7. _____
8. _____
9. _____
10. _____
11. _____
12. _____
13. _____
14. _____
15. _____



Encuentra el perímetro y el área de cada figura. Responde con la décima más cercana.

Respuestas

1.	<u>73.7</u>	<u>34.4</u>
2.	<u>34.6</u>	<u>24.7</u>
3.	<u>39.9</u>	<u>25.3</u>
4.	<u>57.4</u>	<u>31.4</u>
5.	<u>23.6</u>	<u>19.5</u>
6.	<u>14.3</u>	<u>17.4</u>
7.	<u>36.4</u>	<u>26.3</u>
8.	<u>64.3</u>	<u>32.8</u>
9.	<u>9.4</u>	<u>12.5</u>
10.	<u>25.2</u>	<u>21.4</u>
11.	<u>46.8</u>	<u>28.7</u>
12.	<u>8.9</u>	<u>12.7</u>
13.	<u>14.7</u>	<u>15.4</u>
14.	<u>80.0</u>	<u>35.8</u>
15.	<u>26.0</u>	<u>24.8</u>