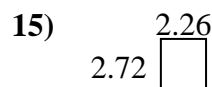
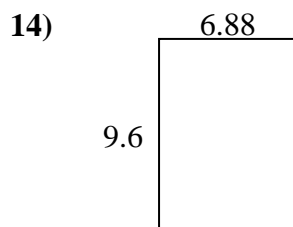
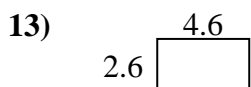
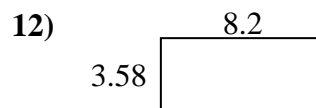
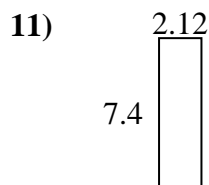
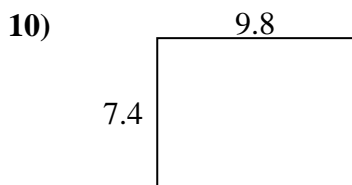
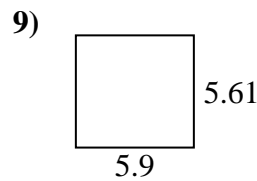
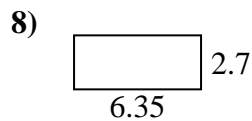
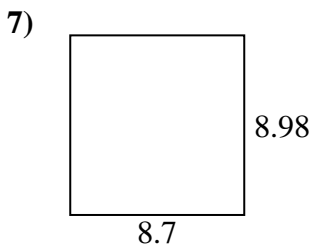
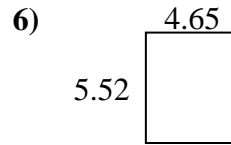
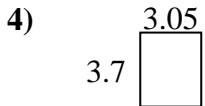
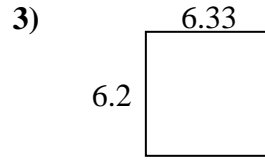
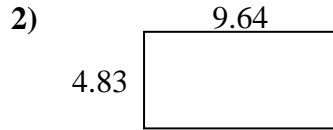
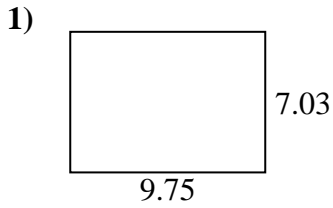




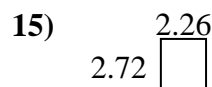
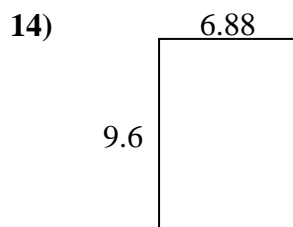
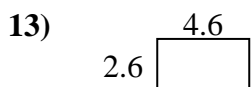
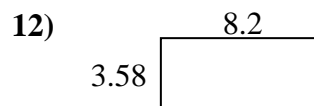
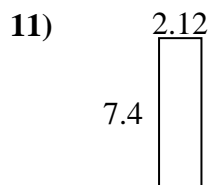
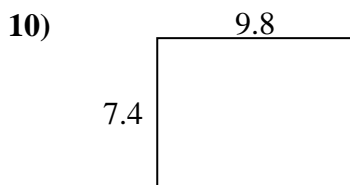
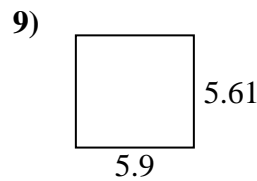
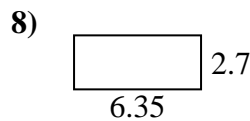
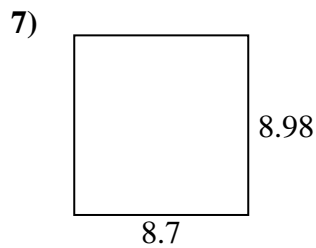
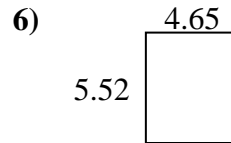
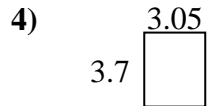
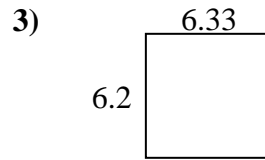
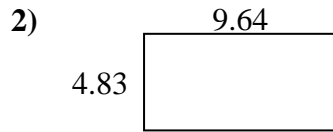
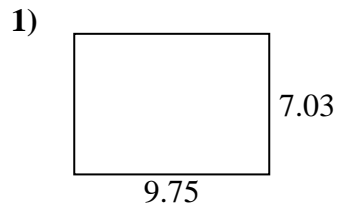
Encuentra el perímetro y el área de cada figura. Responde con la décima más cercana.

**Respuestas**

1. \_\_\_\_\_
2. \_\_\_\_\_
3. \_\_\_\_\_
4. \_\_\_\_\_
5. \_\_\_\_\_
6. \_\_\_\_\_
7. \_\_\_\_\_
8. \_\_\_\_\_
9. \_\_\_\_\_
10. \_\_\_\_\_
11. \_\_\_\_\_
12. \_\_\_\_\_
13. \_\_\_\_\_
14. \_\_\_\_\_
15. \_\_\_\_\_



Encuentra el perímetro y el área de cada figura. Responde con la décima más cercana.

**Respuestas**

1.	<b>68.5</b>	<b>33.6</b>
2.	<b>46.6</b>	<b>28.9</b>
3.	<b>39.2</b>	<b>25.1</b>
4.	<b>11.3</b>	<b>13.5</b>
5.	<b>23.8</b>	<b>22.8</b>
6.	<b>25.7</b>	<b>20.3</b>
7.	<b>78.1</b>	<b>35.4</b>
8.	<b>17.1</b>	<b>18.1</b>
9.	<b>33.1</b>	<b>23.0</b>
10.	<b>72.5</b>	<b>34.4</b>
11.	<b>15.7</b>	<b>19.0</b>
12.	<b>29.4</b>	<b>23.6</b>
13.	<b>12.0</b>	<b>14.4</b>
14.	<b>66.0</b>	<b>33.0</b>
15.	<b>6.1</b>	<b>10.0</b>