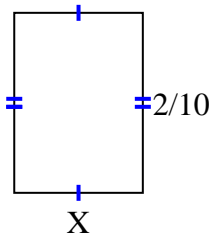




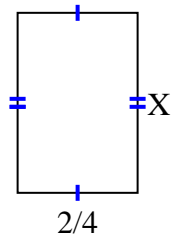
Encuentra el valor de X de cada figura. Cada figura está en centímetros (cm). No a escala.

Respuestas

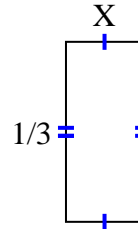
1) $area = \frac{2}{70} \text{ cm}^2$



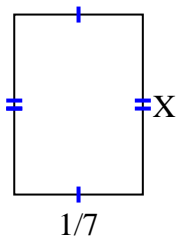
2) $area = \frac{12}{32} \text{ cm}^2$



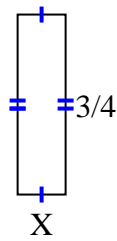
3) $area = \frac{1}{21} \text{ cm}^2$



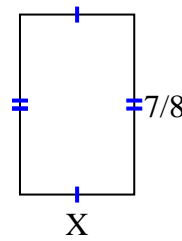
4) $area = \frac{2}{70} \text{ cm}^2$



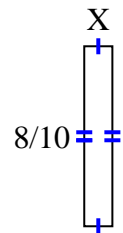
5) $area = \frac{3}{20} \text{ cm}^2$



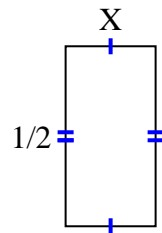
6) $area = \frac{35}{72} \text{ cm}^2$



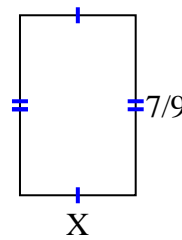
7) $area = \frac{8}{80} \text{ cm}^2$



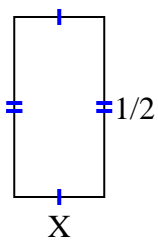
8) $area = \frac{2}{16} \text{ cm}^2$



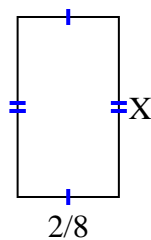
9) $area = \frac{14}{36} \text{ cm}^2$



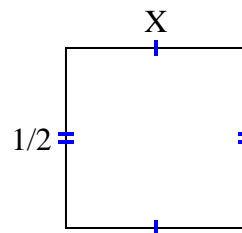
10) $area = \frac{1}{8} \text{ cm}^2$



11) $area = \frac{8}{72} \text{ cm}^2$



12) $area = \frac{1}{4} \text{ cm}^2$



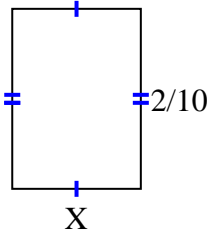
1. _____
2. _____
3. _____
4. _____
5. _____
6. _____
7. _____
8. _____
9. _____
10. _____
11. _____
12. _____



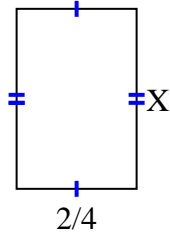
Encuentra el valor de X de cada figura. Cada figura está en centímetros (cm). No a escala.

Respuestas

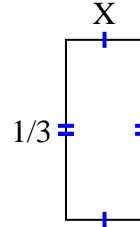
1) $\text{area} = \frac{2}{70} \text{ cm}^2$



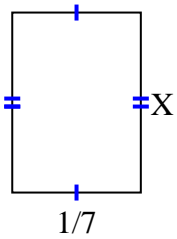
2) $\text{area} = \frac{12}{32} \text{ cm}^2$



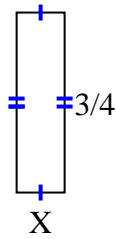
3) $\text{area} = \frac{1}{21} \text{ cm}^2$



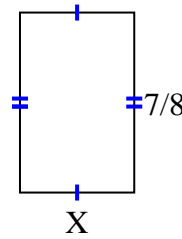
4) $\text{area} = \frac{2}{70} \text{ cm}^2$



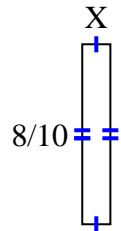
5) $\text{area} = \frac{3}{20} \text{ cm}^2$



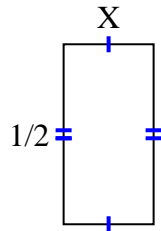
6) $\text{area} = \frac{35}{72} \text{ cm}^2$



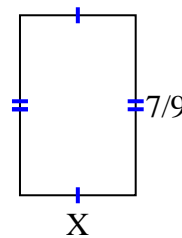
7) $\text{area} = \frac{8}{80} \text{ cm}^2$



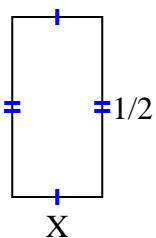
8) $\text{area} = \frac{2}{16} \text{ cm}^2$



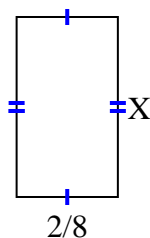
9) $\text{area} = \frac{14}{36} \text{ cm}^2$



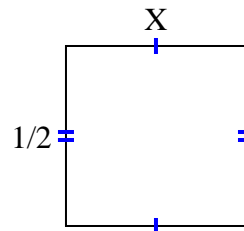
10) $\text{area} = \frac{1}{8} \text{ cm}^2$



11) $\text{area} = \frac{8}{72} \text{ cm}^2$



12) $\text{area} = \frac{1}{4} \text{ cm}^2$



1. $\frac{1}{7}$

2. $\frac{6}{8}$

3. $\frac{1}{7}$

4. $\frac{2}{10}$

5. $\frac{1}{5}$

6. $\frac{5}{9}$

7. $\frac{1}{8}$

8. $\frac{2}{8}$

9. $\frac{2}{4}$

10. $\frac{1}{4}$

11. $\frac{4}{9}$

12. $\frac{1}{2}$