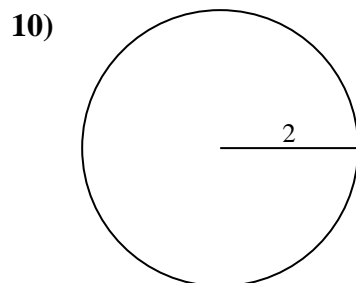
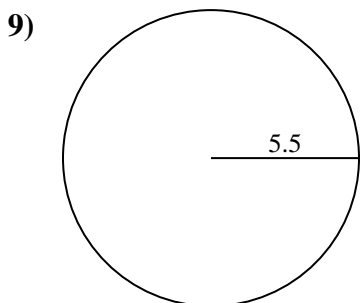
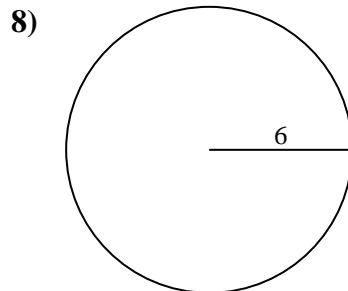
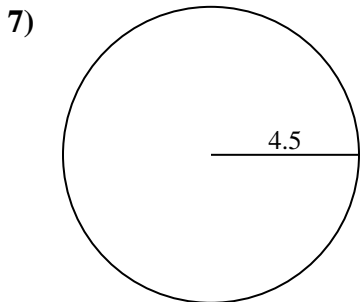
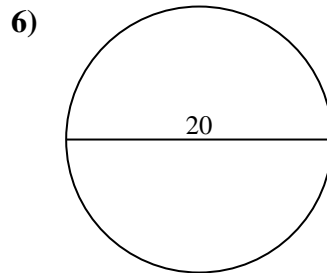
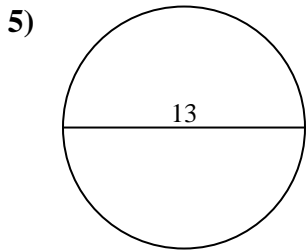
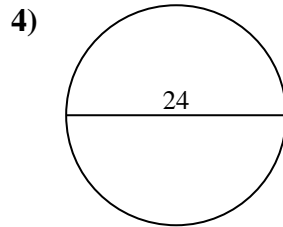
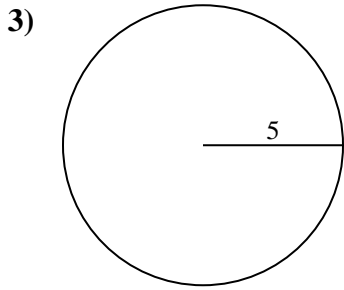
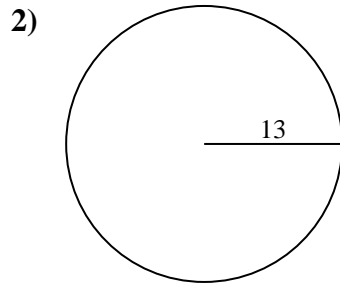
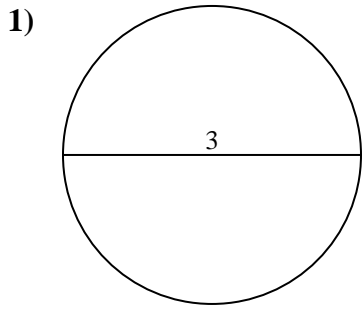




Encuentra la circunferencia de cada círculo. Los círculos no están a escala.

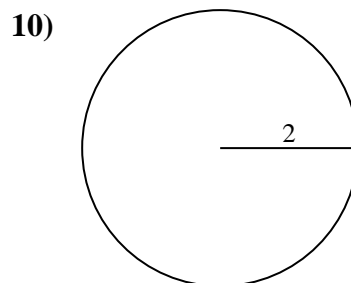
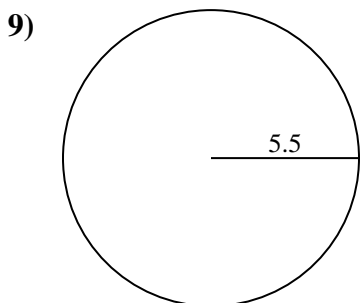
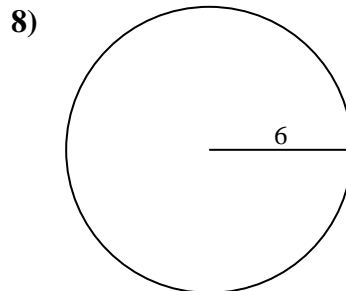
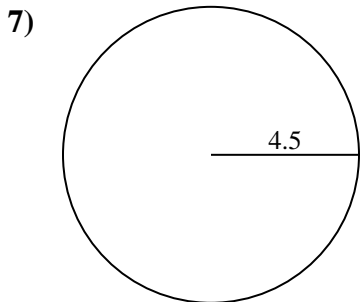
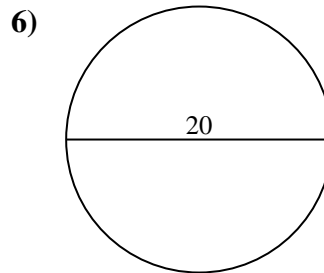
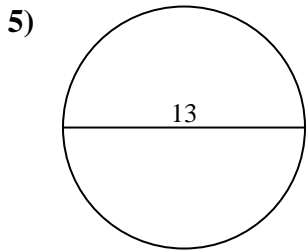
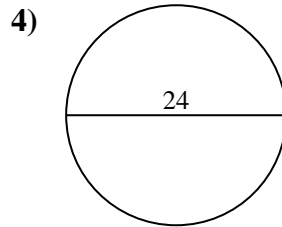
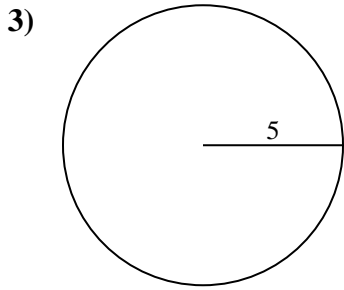
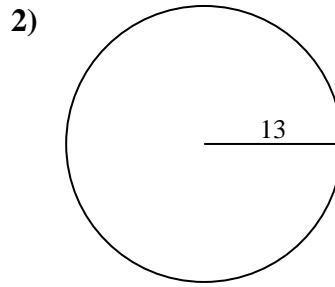
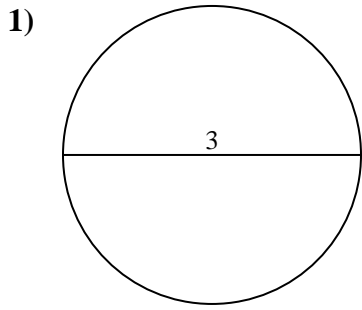


**Respuestas**

- 1. \_\_\_\_\_
- 2. \_\_\_\_\_
- 3. \_\_\_\_\_
- 4. \_\_\_\_\_
- 5. \_\_\_\_\_
- 6. \_\_\_\_\_
- 7. \_\_\_\_\_
- 8. \_\_\_\_\_
- 9. \_\_\_\_\_
- 10. \_\_\_\_\_



Encuentra la circunferencia de cada círculo. Los círculos no están a escala.



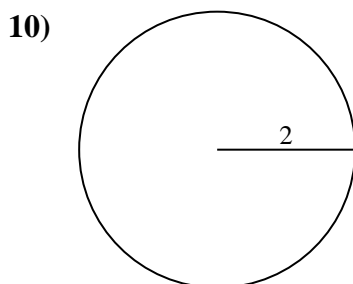
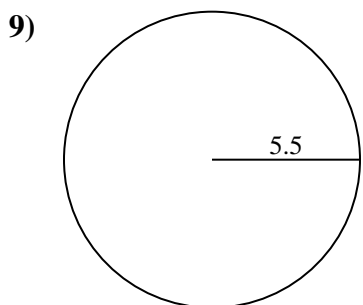
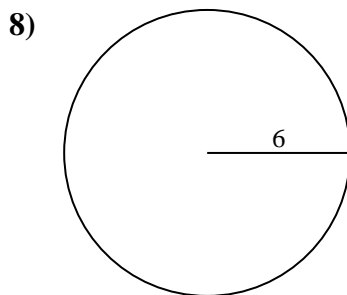
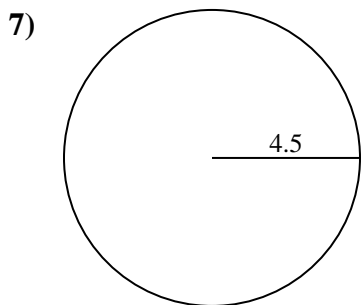
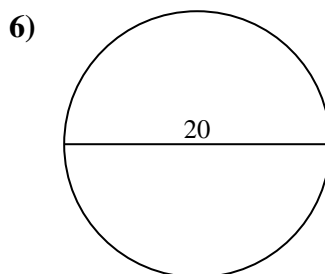
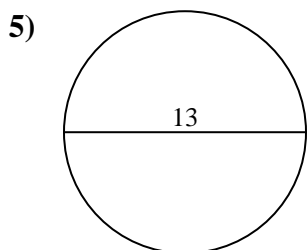
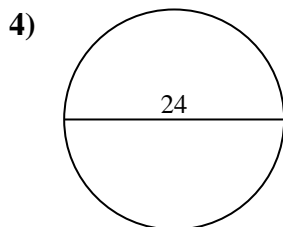
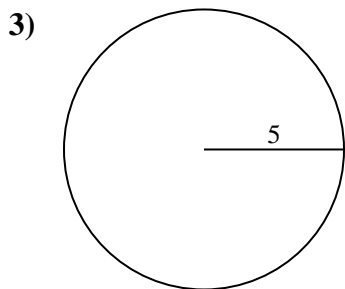
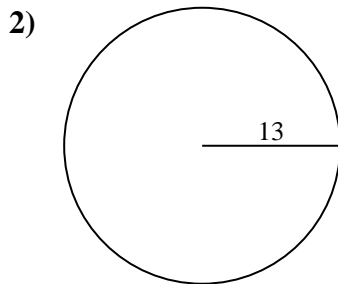
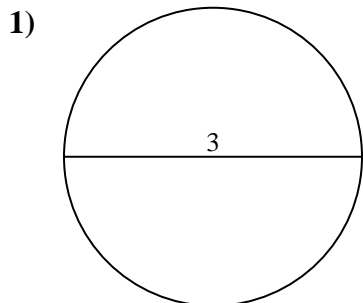
**Respuestas**

1. 9.42 cm
2. 81.68 cm
3. 31.42 cm
4. 75.4 cm
5. 40.84 cm
6. 62.83 cm
7. 28.27 cm
8. 37.7 cm
9. 34.56 cm
10. 12.57 cm



Encuentra la circunferencia de cada círculo. Los círculos no están a escala.

|          |          |          |          |          |
|----------|----------|----------|----------|----------|
| 12.57 cm | 28.27 cm | 62.83 cm | 34.56 cm | 81.68 cm |
| 9.42 cm  | 37.7 cm  | 75.4 cm  | 31.42 cm | 40.84 cm |



**Respuestas**

1. \_\_\_\_\_
2. \_\_\_\_\_
3. \_\_\_\_\_
4. \_\_\_\_\_
5. \_\_\_\_\_
6. \_\_\_\_\_
7. \_\_\_\_\_
8. \_\_\_\_\_
9. \_\_\_\_\_
10. \_\_\_\_\_