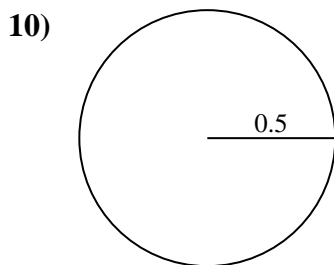
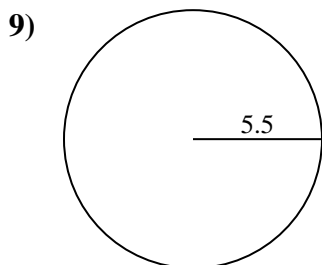
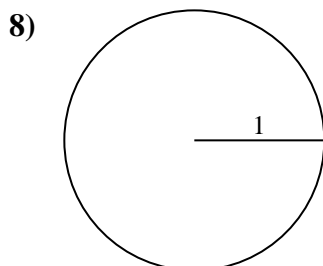
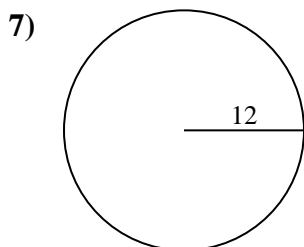
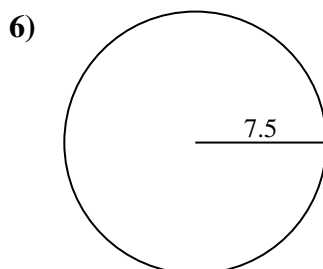
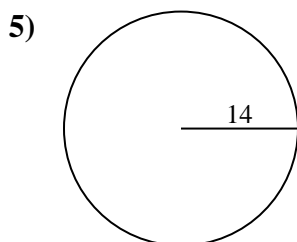
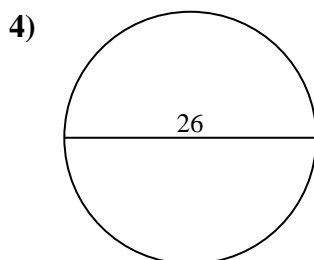
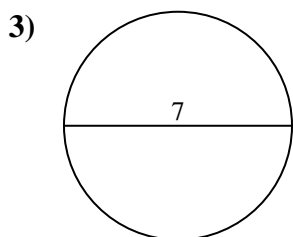
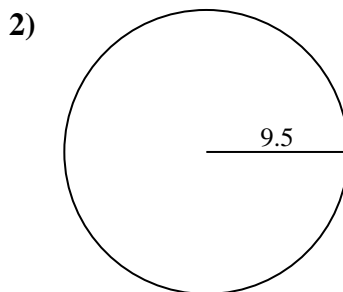
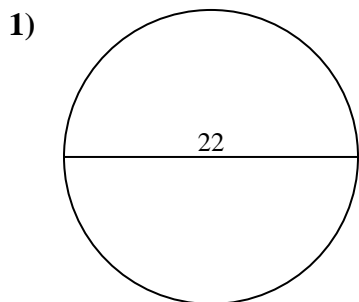




Encuentra el área de cada círculo. Los círculos no están a escala.

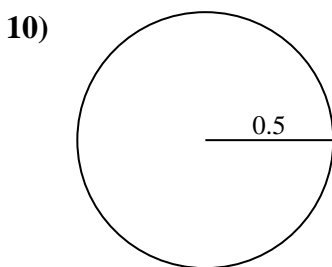
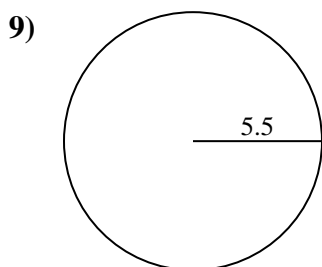
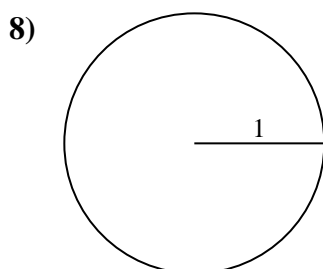
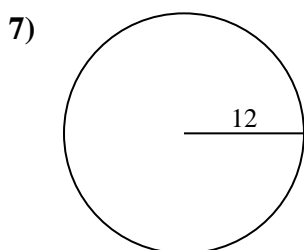
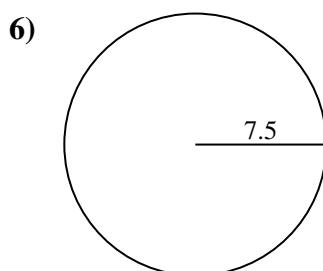
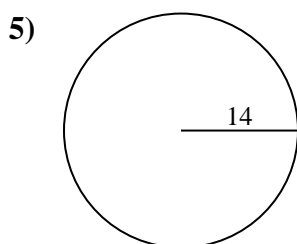
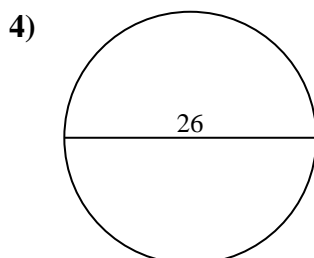
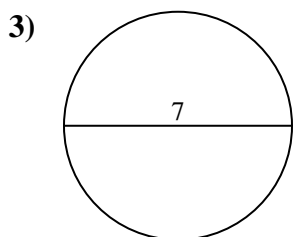
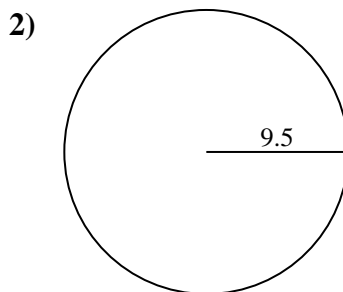
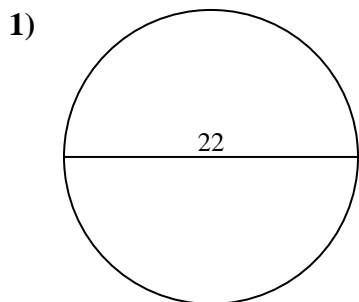


**Respuestas**

- 1. \_\_\_\_\_
- 2. \_\_\_\_\_
- 3. \_\_\_\_\_
- 4. \_\_\_\_\_
- 5. \_\_\_\_\_
- 6. \_\_\_\_\_
- 7. \_\_\_\_\_
- 8. \_\_\_\_\_
- 9. \_\_\_\_\_
- 10. \_\_\_\_\_



Encuentra el área de cada círculo. Los círculos no están a escala.



**Respuestas**

1. 380.1

2. 283.5

3. 38.5

4. 530.9

5. 615.8

6. 176.7

7. 452.4

8. 3.1

9. 95

10. 0.8



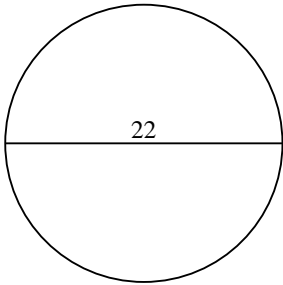
Encuentra el área de cada círculo. Los círculos no están a escala.

176.7	38.5	530.9	283.5	95
615.8	3.1	452.4	380.1	

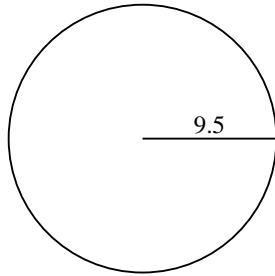
**Respuestas**

1. \_\_\_\_\_
2. \_\_\_\_\_
3. \_\_\_\_\_
4. \_\_\_\_\_
5. \_\_\_\_\_
6. \_\_\_\_\_
7. \_\_\_\_\_
8. \_\_\_\_\_
9. \_\_\_\_\_

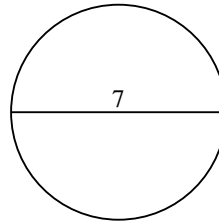
1)



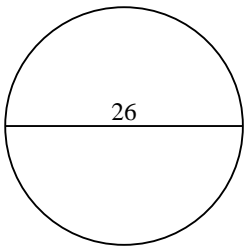
2)



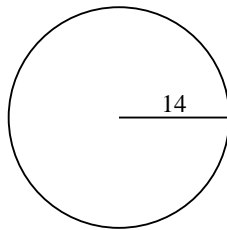
3)



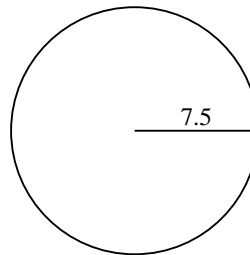
4)



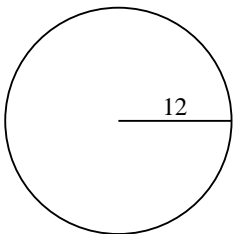
5)



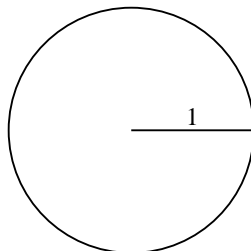
6)



7)



8)



9)

