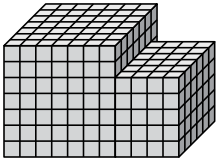




Encuentra el volumen total de cada figura. La medida es en cm (no a escala).

Respuestas

1)



1. _____

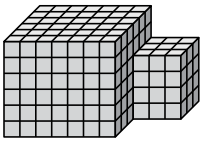
2. _____

3. _____

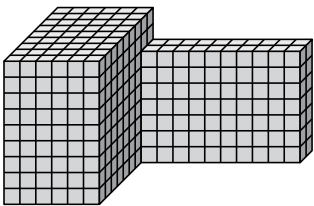
4. _____

5. _____

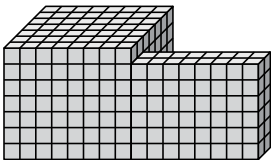
2)



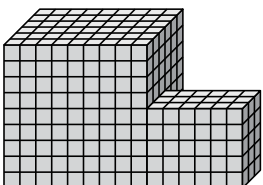
3)



4)



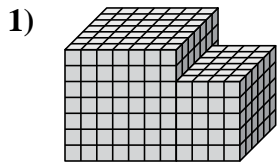
5)





Encuentra el volumen total de cada figura. La medida es en cm (no a escala).

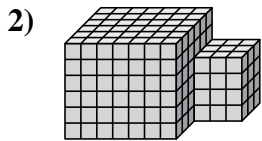
Respuestas



$$7 \times 7 \times 7 = 343$$

$$4 \times 6 \times 5 = 120$$

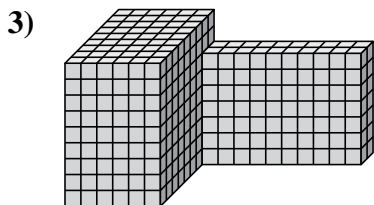
1. 463 cm³



$$7 \times 6 \times 6 = 252$$

$$3 \times 3 \times 4 = 36$$

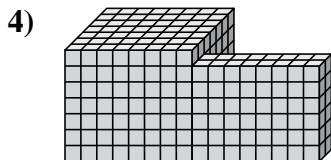
2. 288 cm³



$$6 \times 9 \times 9 = 486$$

$$10 \times 2 \times 7 = 140$$

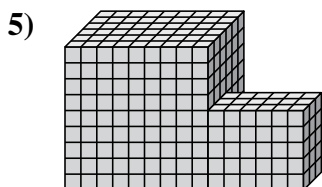
3. 626 cm³



$$8 \times 7 \times 7 = 392$$

$$8 \times 2 \times 6 = 96$$

4. 488 cm³



$$9 \times 6 \times 9 = 486$$

$$6 \times 3 \times 5 = 90$$

5. 576 cm³