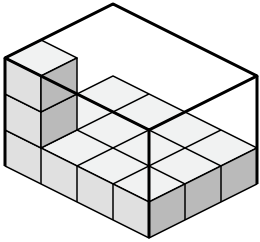


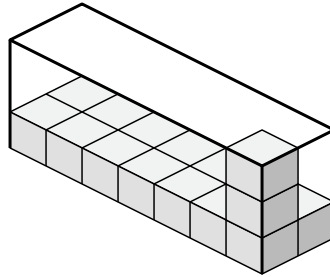


Cree una expresión para determinar el volumen de cada caja.

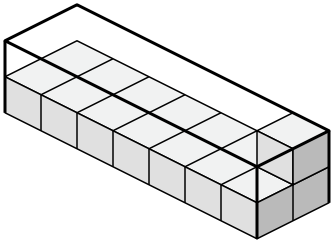
1)



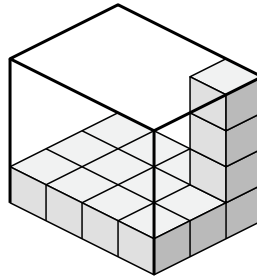
2)



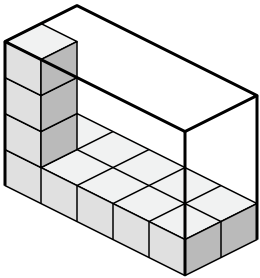
3)



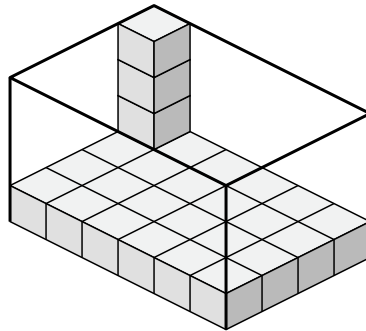
4)



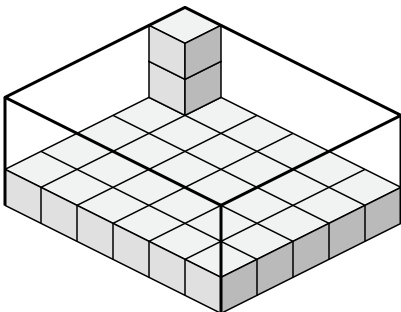
5)



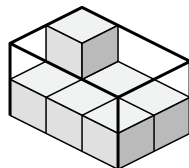
6)



7)



8)



Respuestas

1. _____

2. _____

3. _____

4. _____

5. _____

6. _____

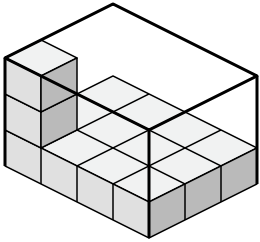
7. _____

8. _____

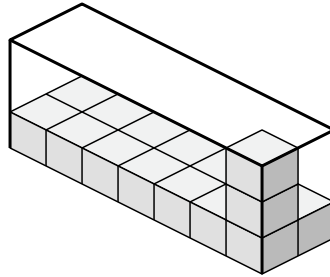


Cree una expresión para determinar el volumen de cada caja.

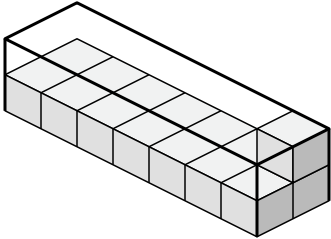
1)



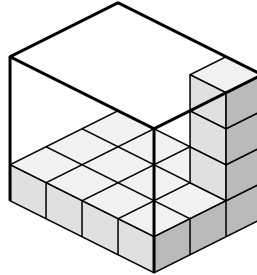
2)



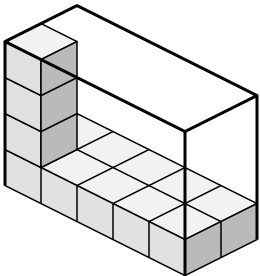
3)



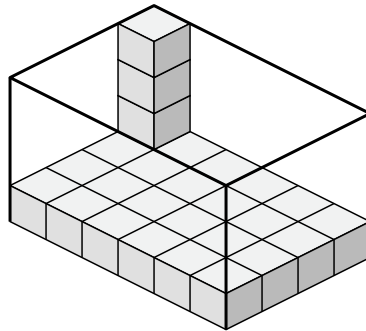
4)



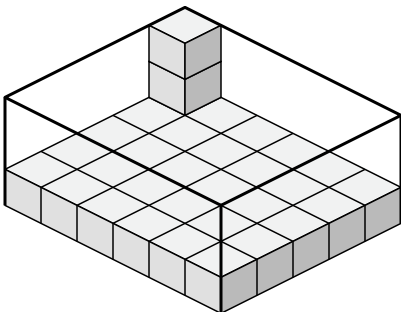
5)



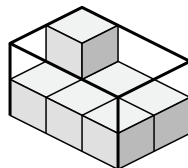
6)



7)



8)



Respuestas

1. 4x3x3

2. 7x2x3

3. 7x2x2

4. 4x3x4

5. 5x2x4

6. 6x4x4

7. 6x5x3

8. 3x2x2