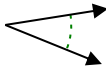




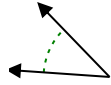
Determina si el ángulo mostrado es agudo, obtuso, recto o llano.

Respuestas

Ej)



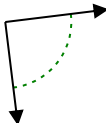
1)



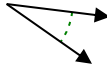
2)



3)



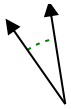
4)



5)



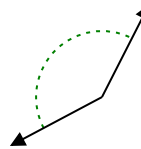
6)



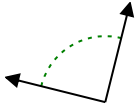
7)



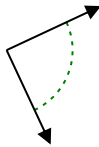
8)



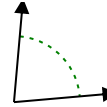
9)



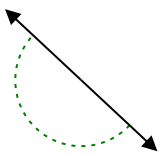
10)



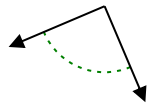
11)



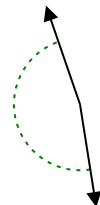
12)



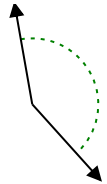
13)



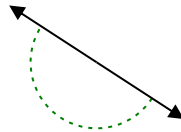
14)



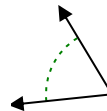
15)



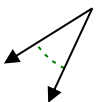
16)



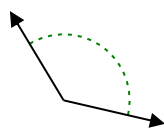
17)



18)



19)



20)



Ej. agudo

1. _____

2. _____

3. _____

4. _____

5. _____

6. _____

7. _____

8. _____

9. _____

10. _____

11. _____

12. _____

13. _____

14. _____

15. _____

16. _____

17. _____

18. _____

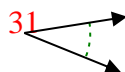
19. _____

20. _____

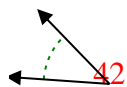


Determina si el ángulo mostrado es agudo, obtuso, recto o llano.

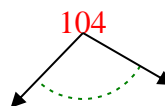
Ej)



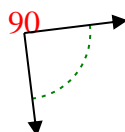
1)



2)



3)



4)



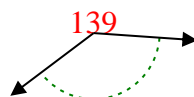
5)



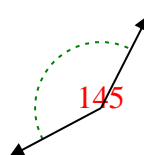
6)



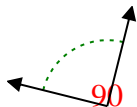
7)



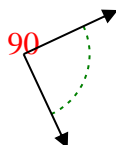
8)



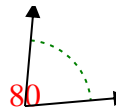
9)



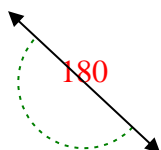
10)



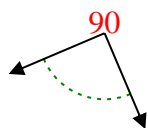
11)



12)



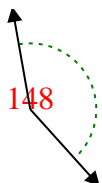
13)



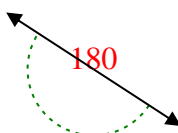
14)



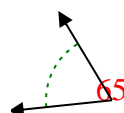
15)



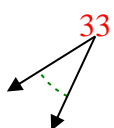
16)



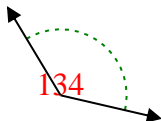
17)



18)



19)



20)



Respuestas

Ej. **agudo**

1. **agudo**

2. **obtuso**

3. **derecho**

4. **agudo**

5. **obtuso**

6. **agudo**

7. **obtuso**

8. **obtuso**

9. **derecho**

10. **derecho**

11. **agudo**

12. **recto**

13. **derecho**

14. **obtuso**

15. **obtuso**

16. **recto**

17. **agudo**

18. **agudo**

19. **obtuso**

20. **obtuso**

1-10	95	90	85	80	75	70	65	60	55	50
11-20	45	40	35	30	25	20	15	10	5	0