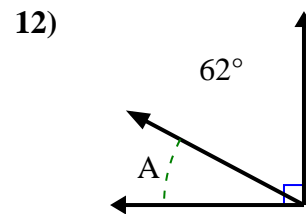
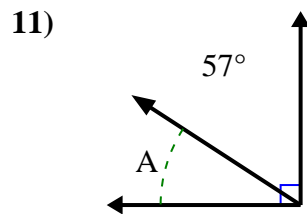
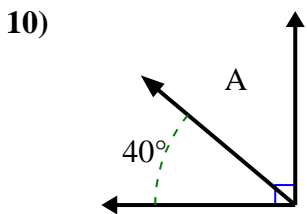
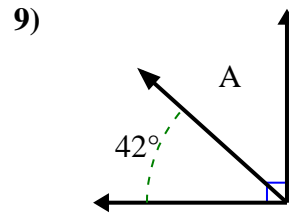
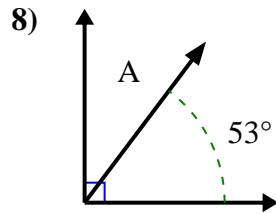
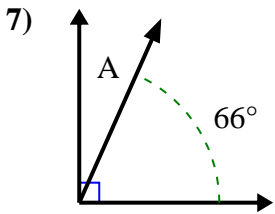
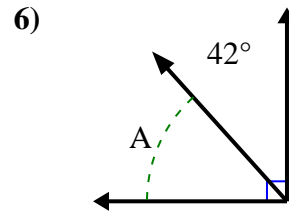
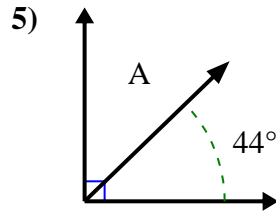
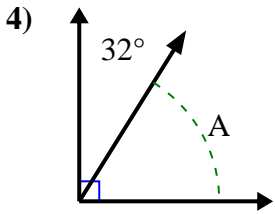
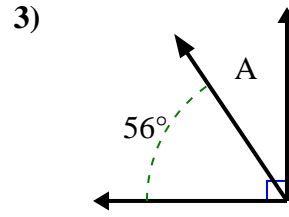
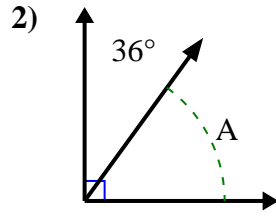
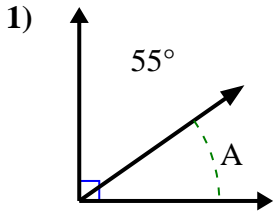




Encuentra el valor de 'A' en el conjunto de ángulos complementarios.

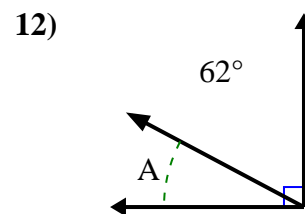
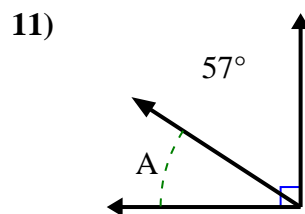
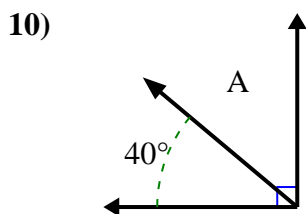
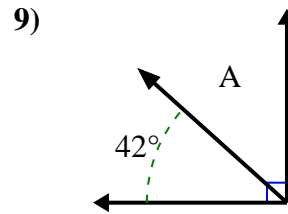
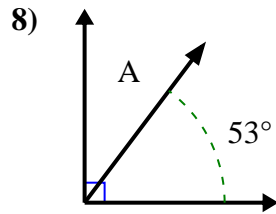
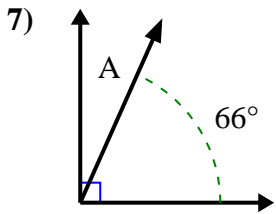
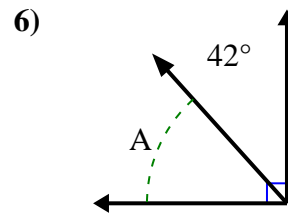
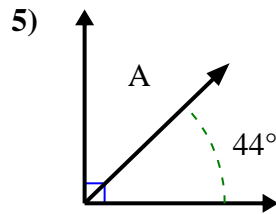
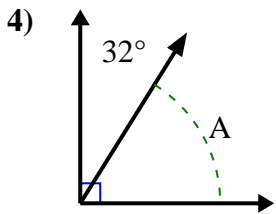
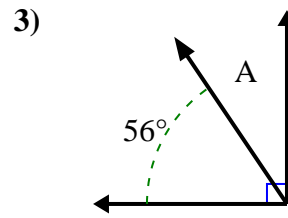
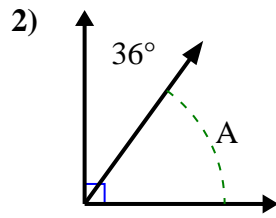
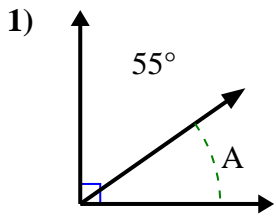
**Respuestas**



1. \_\_\_\_\_
2. \_\_\_\_\_
3. \_\_\_\_\_
4. \_\_\_\_\_
5. \_\_\_\_\_
6. \_\_\_\_\_
7. \_\_\_\_\_
8. \_\_\_\_\_
9. \_\_\_\_\_
10. \_\_\_\_\_
11. \_\_\_\_\_
12. \_\_\_\_\_



Encuentra el valor de 'A' en el conjunto de ángulos complementarios.

**Respuestas**1. 35°2. 54°3. 34°4. 58°5. 46°6. 48°7. 24°8. 37°9. 48°10. 50°11. 33°12. 28°