



Resuelve cada problema.

1)  $4 + 1 =$  \_\_\_\_\_

2)  $5 + 0 =$  \_\_\_\_\_

3)  $1 + 2 =$  \_\_\_\_\_

4)  $4 + 0 =$  \_\_\_\_\_

5)  $3 - 2 =$  \_\_\_\_\_

6)  $4 - 4 =$  \_\_\_\_\_

7)  $5 - 5 =$  \_\_\_\_\_

8)  $2 + 1 =$  \_\_\_\_\_

9)  $5 - 2 =$  \_\_\_\_\_

10)  $4 - 2 =$  \_\_\_\_\_

11)  $1 + 0 =$  \_\_\_\_\_

12)  $3 + 0 =$  \_\_\_\_\_

13)  $3 + 1 =$  \_\_\_\_\_

14)  $5 - 3 =$  \_\_\_\_\_

15)  $3 + 2 =$  \_\_\_\_\_

16)  $5 - 4 =$  \_\_\_\_\_

**Respuestas**

1. \_\_\_\_\_

2. \_\_\_\_\_

3. \_\_\_\_\_

4. \_\_\_\_\_

5. \_\_\_\_\_

6. \_\_\_\_\_

7. \_\_\_\_\_

8. \_\_\_\_\_

9. \_\_\_\_\_

10. \_\_\_\_\_

11. \_\_\_\_\_

12. \_\_\_\_\_

13. \_\_\_\_\_

14. \_\_\_\_\_

15. \_\_\_\_\_

16. \_\_\_\_\_



Resuelve cada problema.

1)  $4 + 1 =$  5

2)  $5 + 0 =$  5

3)  $1 + 2 =$  3

4)  $4 + 0 =$  4

5)  $3 - 2 =$  1

6)  $4 - 4 =$  0

7)  $5 - 5 =$  0

8)  $2 + 1 =$  3

9)  $5 - 2 =$  3

10)  $4 - 2 =$  2

11)  $1 + 0 =$  1

12)  $3 + 0 =$  3

13)  $3 + 1 =$  4

14)  $5 - 3 =$  2



15)  $3 + 2 =$  5


16)  $5 - 4 =$  1



**Respuestas**1. 52. 53. 34. 45. 16. 07. 08. 39. 310. 211. 112. 313. 414. 215. 516. 1






Resuelve cada problema.



1)  $4 + 1 =$  \_\_\_\_\_  
 



2)  $5 + 0 =$  \_\_\_\_\_  




3)  $1 + 2 =$  \_\_\_\_\_  
 



4)  $4 + 0 =$  \_\_\_\_\_  




5)  $3 - 2 =$  \_\_\_\_\_  
 



6)  $4 - 4 =$  \_\_\_\_\_  
 


7)  $5 - 5 =$  \_\_\_\_\_  
 



8)  $2 + 1 =$  \_\_\_\_\_  
 



9)  $5 - 2 =$  \_\_\_\_\_  
 



10)  $4 - 2 =$  \_\_\_\_\_  
 



11)  $1 + 0 =$  \_\_\_\_\_  
 

12)  $3 + 0 =$  \_\_\_\_\_  


13)  $3 + 1 =$  \_\_\_\_\_  
 

14)  $5 - 3 =$  \_\_\_\_\_  
 

15)  $3 + 2 =$  \_\_\_\_\_  
 

16)  $5 - 4 =$  \_\_\_\_\_  
 

**Respuestas**

1. \_\_\_\_\_
2. \_\_\_\_\_
3. \_\_\_\_\_
4. \_\_\_\_\_
5. \_\_\_\_\_
6. \_\_\_\_\_
7. \_\_\_\_\_
8. \_\_\_\_\_
9. \_\_\_\_\_
10. \_\_\_\_\_
11. \_\_\_\_\_
12. \_\_\_\_\_
13. \_\_\_\_\_
14. \_\_\_\_\_
15. \_\_\_\_\_
16. \_\_\_\_\_